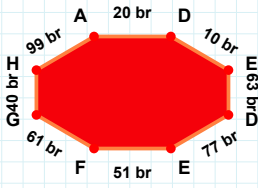
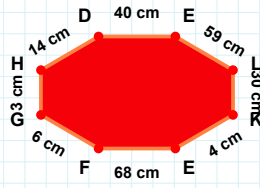


SORU: Aşağıdaki şekillerde istenen kenarın kaç birim veya santimetre olduğunu bulunuz.



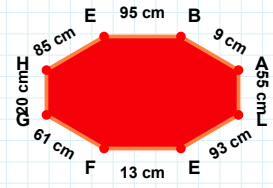
|EF| kaç brdir?

- ☐ 48 br
☐ 51 br
☐ 50 br



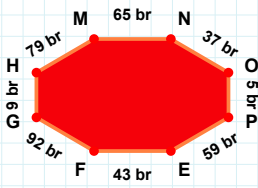
|GH| kaç cmdir?

- ☐ 21 cm
☐ 20 cm
☐ 17 cm



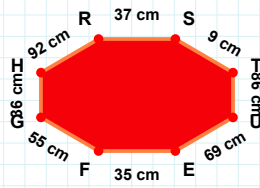
|KE| kaç cmdir?

- ☐ 5 cm
☐ 4 cm
☐ 9 cm



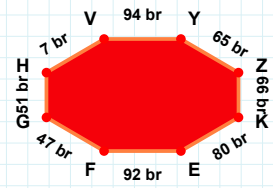
|HV| kaç brdir?

- ☐ 7 br
☐ 12 br
☐ 8 br



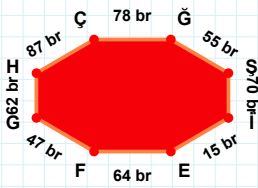
|TU| kaç cmdir?

- ☐ 76 cm
☐ 86 cm
☐ 89 cm



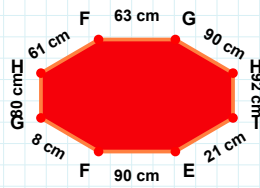
|NO| kaç brdir?

- ☐ 47 br
☐ 37 br
☐ 34 br



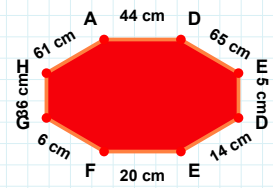
|HÇ| kaç brdir?

- ☐ 92 br
☐ 87 br
☐ 90 br



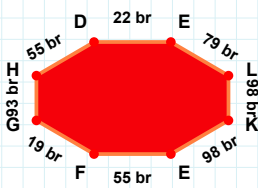
|EF| kaç cmdir?

- ☐ 20 cm
☐ 18 cm
☐ 21 cm



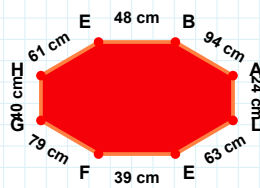
|FG| kaç cmdir?

- ☐ 63 cm
☐ 68 cm
☐ 65 cm



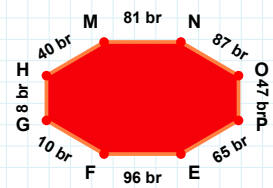
|EL| kaç brdir?

- ☐ 84 br
☐ 79 br
☐ 80 br



|AL| kaç cmdir?

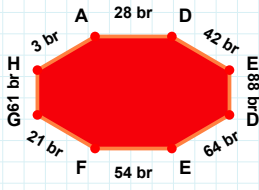
- ☐ 22 cm
☐ 24 cm
☐ 34 cm



|OP| kaç brdir?

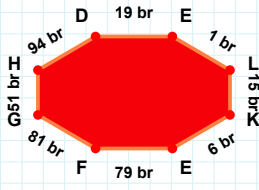
- ☐ 42 br
☐ 49 br
☐ 47 br

SORU: Aşağıdaki şekillerde istenen kenarın kaç birim veya santimetre olduğunu bulunuz.



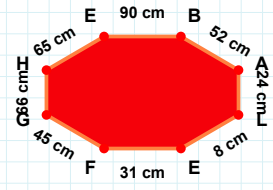
|KE| kaç brdir?

- ☐ 16 br
☐ 6 br
☐ 7 br



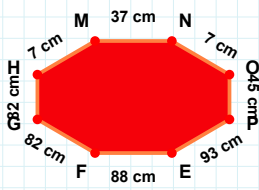
|ED| kaç brdir?

- ☐ 86 br
☐ 88 br
☐ 90 br



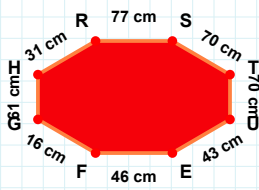
|AL| kaç cmdir?

- ☐ 14 cm
☐ 27 cm
☐ 24 cm



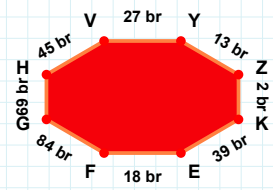
|PE| kaç cmdir?

- ☐ 93 cm
☐ 90 cm
☐ 91 cm



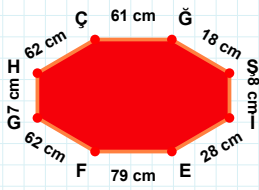
|HV| kaç brdir?

- ☐ 45 br
☐ 43 br
☐ 50 br



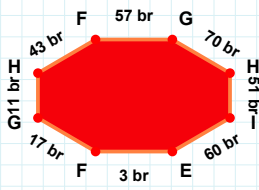
|UE| kaç cmdir?

- ☐ 43 cm
☐ 48 cm
☐ 53 cm



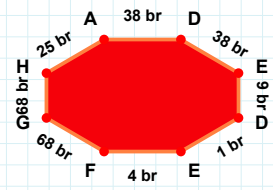
|DE| kaç brdir?

- ☐ 4 br
☐ 1 br
☐ 2 br



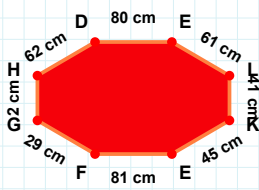
|İE| kaç cmdir?

- ☐ 28 cm
☐ 33 cm
☐ 18 cm



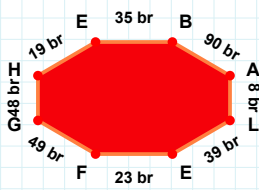
|GH| kaç brdir?

- ☐ 21 br
☐ 11 br
☐ 13 br



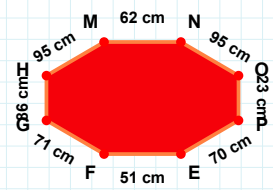
|EB| kaç brdir?

- ☐ 35 br
☐ 34 br
☐ 40 br



|NO| kaç cmdir?

- ☐ 93 cm
☐ 94 cm
☐ 95 cm



|LK| kaç cmdir?

- ☐ 46 cm
☐ 44 cm
☐ 41 cm

SÜREÇ ODAKLI DEĞERLENDİRME ÖLÇEĞİ

Doğru Sayısı: / 24

Öğretmen ilgili kutucuğu işaretler.

Geliştirilmeli (0-8)

İyi (9-14)

Çok İyi (15-20)

Mükemmel (21-24)

☐
☐
☐
☐

Hazırlayan:

Bu bölüme sınıfınızın ilgili kazanıma yönelik genel durumuna ilişkin gözlem ve izlenimlerinizi, öğrencilerinizin bu kazanımla ilgili öğrenme eksikliklerini ve bu eksikliklerin giderilmesi amacıyla yaptığınız/yapmayı planladığınız faaliyetleri not edebilirsiniz.

No	Adı - Soyadı	Toplam Puan	Değerlendirme
1			
2			
3			
4			
5			
6			
7			
8			
9			
10			
11			
12			
13			
14			
15			
16			
17			
18			
19			
20			
21			
22			
23			
24			
25			
26			
27			
28			
29			
30			
31			
32			
33			
34			
35			

Hazırlayan: