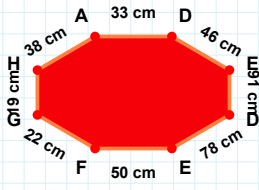
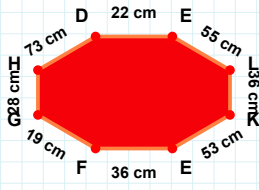


SORU: Aşağıdaki şekillerde istenen kenarın kaç birim veya santimetre olduğunu bulunuz.



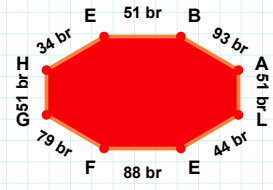
|EF| kaç brdir?

- ☐ 89 br
☐ 93 br
☐ 88 br



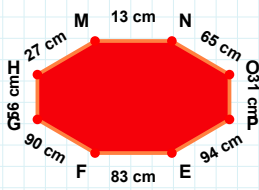
|GH| kaç cmdir?

- ☐ 28 cm
☐ 29 cm
☐ 38 cm



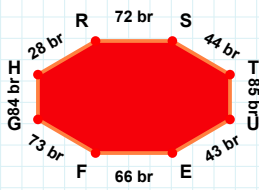
|DE| kaç cmdir?

- ☐ 45 cm
☐ 49 cm
☐ 46 cm



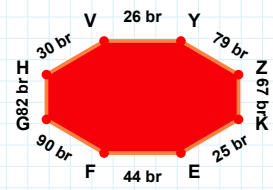
|EF| kaç brdir?

- ☐ 71 br
☐ 66 br
☐ 67 br



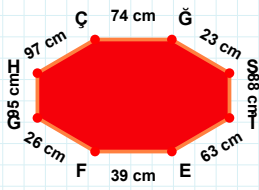
|ZK| kaç brdir?

- ☐ 64 br
☐ 77 br
☐ 67 br



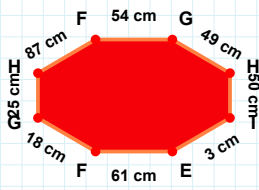
|FG| kaç cmdir?

- ☐ 87 cm
☐ 90 cm
☐ 95 cm



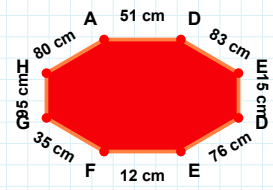
|HÇ| kaç cmdir?

- ☐ 98 cm
☐ 99 cm
☐ 97 cm



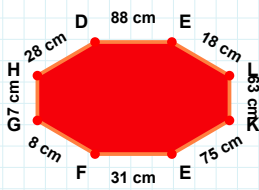
|DE| kaç cmdir?

- ☐ 71 cm
☐ 76 cm
☐ 77 cm



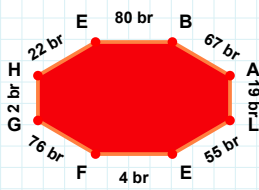
|EF| kaç cmdir?

- ☐ 61 cm
☐ 66 cm
☐ 64 cm



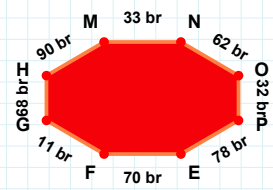
|LE| kaç brdir?

- ☐ 52 br
☐ 65 br
☐ 55 br



|GH| kaç brdir?

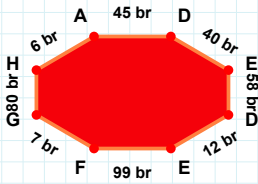
- ☐ 73 br
☐ 68 br
☐ 63 br



|DE| kaç cmdir?

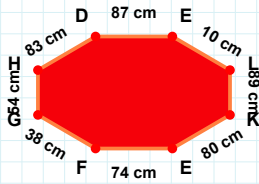
- ☐ 85 cm
☐ 83 cm
☐ 88 cm

SORU: Aşağıdaki şekillerde istenen kenarın kaç birim veya santimetre olduğunu bulunuz.



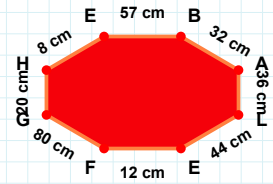
|EF| kaç cmdir?

- ☐ 7 cm
☐ 12 cm
☐ 14 cm



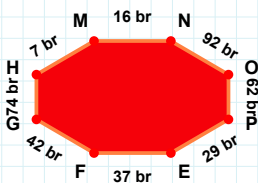
|EF| kaç brdir?

- ☐ 99 br
☐ 89 br
☐ 97 br



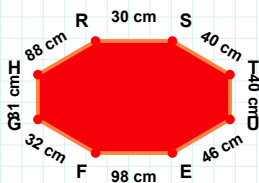
|KE| kaç cmdir?

- ☐ 75 cm
☐ 80 cm
☐ 82 cm



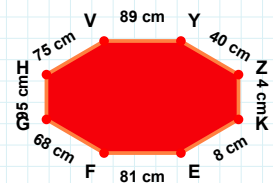
|TU| kaç cmdir?

- ☐ 38 cm
☐ 40 cm
☐ 42 cm



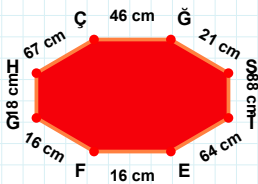
|HM| kaç brdir?

- ☐ 7 br
☐ 10 br
☐ 2 br



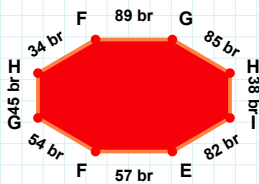
|KE| kaç cmdir?

- ☐ 6 cm
☐ 8 cm
☐ 7 cm



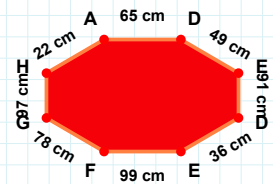
|EF| kaç cmdir?

- ☐ 16 cm
☐ 19 cm
☐ 11 cm



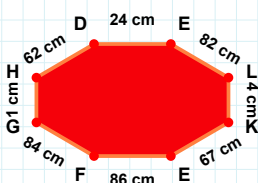
|FG| kaç brdir?

- ☐ 54 br
☐ 56 br
☐ 57 br



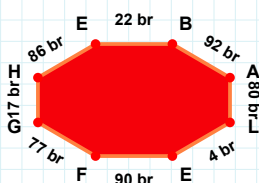
|GH| kaç cmdir?

- ☐ 92 cm
☐ 97 cm
☐ 98 cm



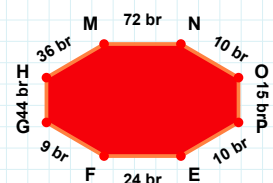
|GH| kaç brdir?

- ☐ 14 br
☐ 17 br
☐ 7 br



|HM| kaç brdir?

- ☐ 36 br
☐ 34 br
☐ 26 br



|GH| kaç cmdir?

- ☐ 3 cm
☐ 1 cm
☐ 2 cm

SÜREÇ ODAKLI DEĞERLENDİRME ÖLÇEĞİ

Doğru Sayısı: / 24

Öğretmen ilgili kutucuğu işaretler.

Geliştirilmeli (0-8)

İyi (9-14)

Çok İyi (15-20)

Mükemmel (21-24)

☐
☐
☐
☐

Hazırlayan:

Bu bölüme sınıfınızın ilgili kazanıma yönelik genel durumuna ilişkin gözlem ve izlenimlerinizi, öğrencilerinizin bu kazanımla ilgili öğrenme eksikliklerini ve bu eksikliklerin giderilmesi amacıyla yaptığınız/yapmayı planladığınız faaliyetleri not edebilirsiniz.

No	Adı - Soyadı	Toplam Puan	Değerlendirme
1			
2			
3			
4			
5			
6			
7			
8			
9			
10			
11			
12			
13			
14			
15			
16			
17			
18			
19			
20			
21			
22			
23			
24			
25			
26			
27			
28			
29			
30			
31			
32			
33			
34			
35			

Hazırlayan: