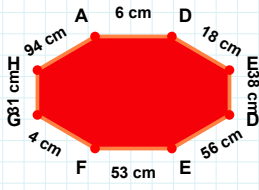
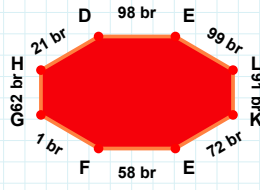


**SORU:** Aşağıdaki şekillerde istenen kenarın kaç birim veya santimetre olduğunu bulunuz.



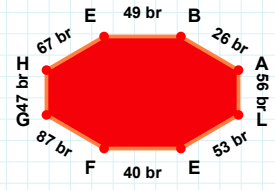
**|AL| kaç brdir?**

- ☐ 66 br  
☐ 56 br  
☐ 58 br



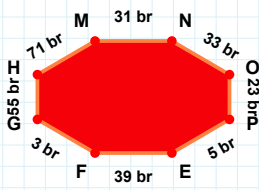
**|EF| kaç brdir?**

- ☐ 55 br  
☐ 57 br  
☐ 58 br



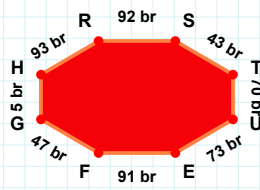
**|GH| kaç cmdir?**

- ☐ 28 cm  
☐ 31 cm  
☐ 33 cm



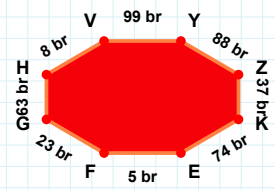
**|ZK| kaç brdir?**

- ☐ 35 br  
☐ 36 br  
☐ 37 br



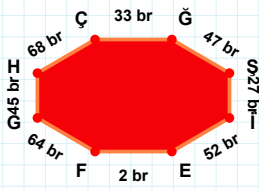
**|NO| kaç brdir?**

- ☐ 43 br  
☐ 33 br  
☐ 32 br



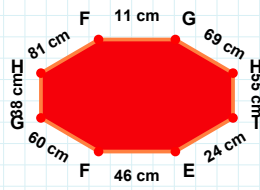
**|TU| kaç brdir?**

- ☐ 72 br  
☐ 70 br  
☐ 68 br



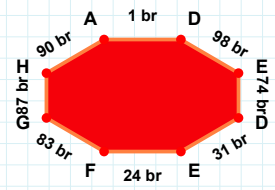
**|GH| kaç cmdir?**

- ☐ 38 cm  
☐ 48 cm  
☐ 35 cm



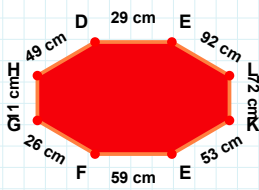
**|HA| kaç brdir?**

- ☐ 80 br  
☐ 95 br  
☐ 90 br



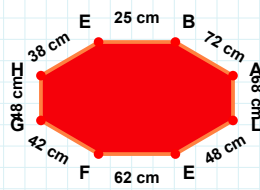
**|HÇ| kaç brdir?**

- ☐ 73 br  
☐ 68 br  
☐ 63 br



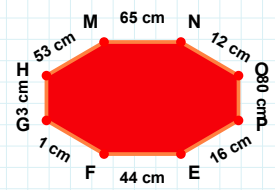
**|LK| kaç cmdir?**

- ☐ 72 cm  
☐ 69 cm  
☐ 74 cm



**|HM| kaç cmdir?**

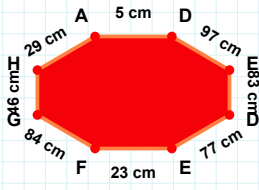
- ☐ 55 cm  
☐ 53 cm  
☐ 58 cm



**|LE| kaç cmdir?**

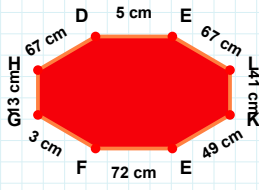
- ☐ 51 cm  
☐ 38 cm  
☐ 48 cm

**SORU:** Aşağıdaki şekillerde istenen kenarın kaç birim veya santimetre olduğunu bulunuz.



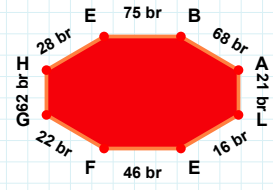
**|AD| kaç cm'dir?**

- ☐ 4 cm  
☐ 5 cm  
☐ 15 cm



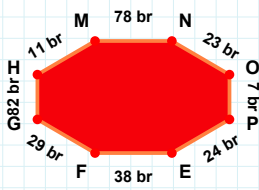
**|BA| kaç br'dir?**

- ☐ 70 br  
☐ 68 br  
☐ 58 br



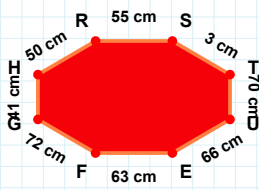
**|KE| kaç cm'dir?**

- ☐ 49 cm  
☐ 39 cm  
☐ 46 cm



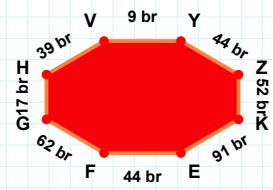
**|NO| kaç br'dir?**

- ☐ 28 br  
☐ 23 br  
☐ 22 br



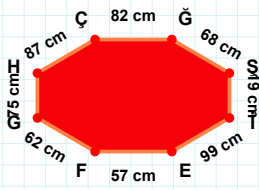
**|VY| kaç br'dir?**

- ☐ 9 br  
☐ 19 br  
☐ 12 br



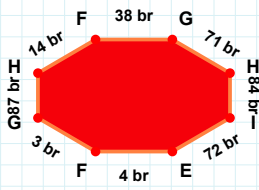
**|RS| kaç cm'dir?**

- ☐ 53 cm  
☐ 55 cm  
☐ 45 cm



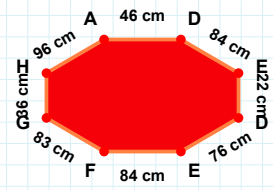
**|EF| kaç br'dir?**

- ☐ 4 br  
☐ 1 br  
☐ 3 br



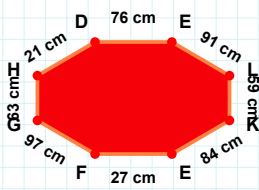
**|İE| kaç cm'dir?**

- ☐ 99 cm  
☐ 96 cm  
☐ 97 cm



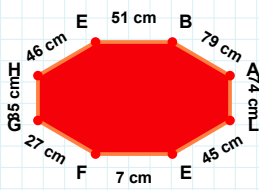
**|DE| kaç cm'dir?**

- ☐ 84 cm  
☐ 83 cm  
☐ 85 cm



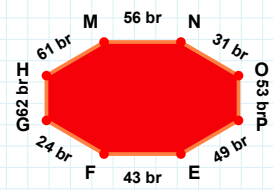
**|EF| kaç br'dir?**

- ☐ 43 br  
☐ 40 br  
☐ 45 br



**|HD| kaç cm'dir?**

- ☐ 21 cm  
☐ 20 cm  
☐ 23 cm



**|BA| kaç cm'dir?**

- ☐ 74 cm  
☐ 79 cm  
☐ 84 cm

### SÜREÇ ODAKLI DEĞERLENDİRME ÖLÇEĞİ

Doğru Sayısı: ..... / 24

Öğretmen ilgili kutucuğu işaretler.

Geliştirilmeli (0-8)

İyi (9-14)

Çok İyi (15-20)

Mükemmel (21-24)

☐
☐
☐
☐

Hazırlayan: .....

Bu bölüme sınıfınızın ilgili kazanıma yönelik genel durumuna ilişkin gözlem ve izlenimlerinizi, öğrencilerinizin bu kazanımla ilgili öğrenme eksikliklerini ve bu eksikliklerin giderilmesi amacıyla yaptığınız/yapmayı planladığınız faaliyetleri not edebilirsiniz.

No	Adı - Soyadı	Toplam Puan	Değerlendirme
1			
2			
3			
4			
5			
6			
7			
8			
9			
10			
11			
12			
13			
14			
15			
16			
17			
18			
19			
20			
21			
22			
23			
24			
25			
26			
27			
28			
29			
30			
31			
32			
33			
34			
35			

Hazırlayan: .....