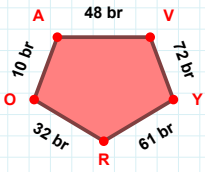
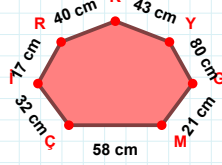


SORU: Aşağıdaki geometrik şekillerle ilgili soruları cevaplayınız.



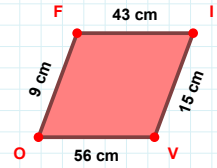
10 br hangi kenara aittir?

- ☐ VO kenarı  
☐ RO kenarı  
☐ YR kenarı



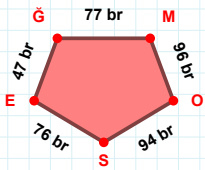
|GY| kaç cm'dir?

- ☐ 79 cm  
☐ 80 cm  
☐ 81 cm



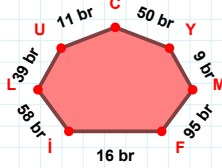
43 cm hangi kenara aittir?

Kenar: .....



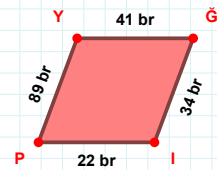
|MO| kaç br'dir?

- ☐ 95 br  
☐ 96 br  
☐ 97 br



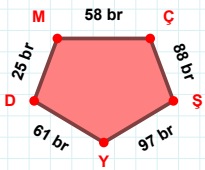
58 br hangi kenara aittir?

Kenar: .....



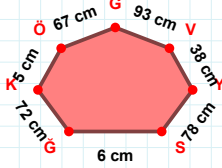
|IP| + |YG| = ....

Cevap: ..... br



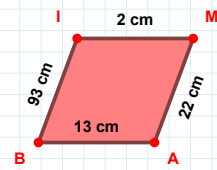
25 br hangi kenara aittir?

- ☐ MÇ kenarı  
☐ YD kenarı  
☐ ŞD kenarı



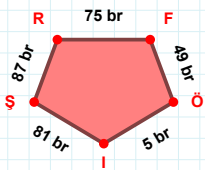
SY kenarı hangi şeklin kenarıdır?

- ☐ Üçgen  
☐ Kare  
☐ Dikdörtgen



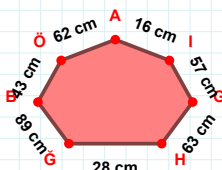
22 cm hangi kenara aittir?

Kenar: .....



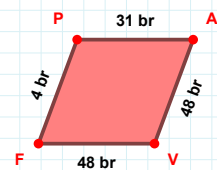
|İŞ| kaç br'dir?

- ☐ 80 br  
☐ 81 br  
☐ 82 br



57 cm hangi kenara aittir?

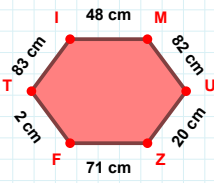
Kenar: .....



|VF| + |AV| = ....

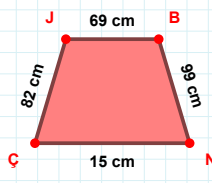
Cevap: ..... br

SORU: Aşağıdaki geometrik şekillerle ilgili soruları cevaplayınız.



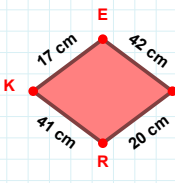
83 cm hangi kenara aittir?

Kenar: .....



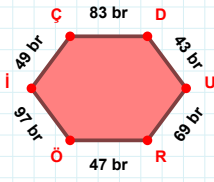
|JB| kaç cm'dir?

- ☐ 68 cm  
☐ 69 cm  
☐ 70 cm



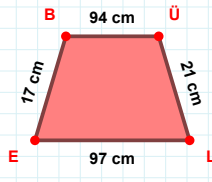
20 cm hangi kenara aittir?

Kenar: .....



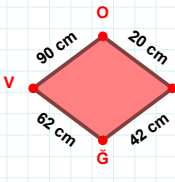
|Öİ| kaç br'dir?

- ☐ 96 br  
☐ 97 br  
☐ 98 br



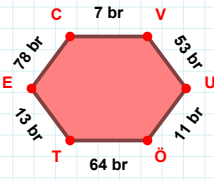
ÜL kenarı hangi şeklin kenarıdır?

- ☐ Üçgen  
☐ Kare  
☐ Dikdörtgen



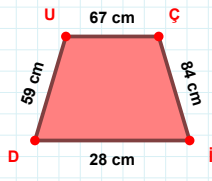
90 cm hangi kenara aittir?

Kenar: .....



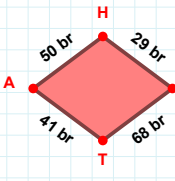
|EC| + |VU| = ....

Cevap: ..... br



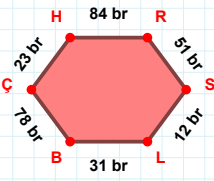
59 cm hangi kenara aittir?

- ☐ ÇI kenarı  
☐ İU kenarı  
☐ UÇ kenarı



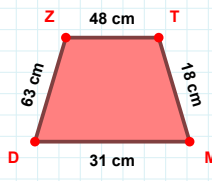
HE kenarı hangi şeklin kenarıdır?

- ☐ Üçgen  
☐ Kare  
☐ Dikdörtgen



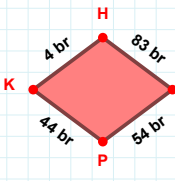
|ÇH| + |HR| = ....

Cevap: ..... br



63 cm hangi kenara aittir?

Kenar: .....



PK kenarı hangi şeklin kenarıdır?

- ☐ Üçgen  
☐ Kare  
☐ Dikdörtgen

## SÜREÇ ODAKLI DEĞERLENDİRME ÖLÇEĞİ

Doğru Sayısı: ..... / 24

Öğretmen ilgili kutucuğu işaretler.

Geliştirilmeli (0-8)

İyi (9-14)

Çok İyi (15-20)

Mükemmel (21-24)

☐
☐
☐
☐

Hazırlayan: .....

Bu bölüme sınıfınızın ilgili kazanıma yönelik genel durumuna ilişkin gözlem ve izlenimlerinizi, öğrencilerinizin bu kazanımla ilgili öğrenme eksikliklerini ve bu eksikliklerin giderilmesi amacıyla yaptığınız/yapmayı planladığınız faaliyetleri not edebilirsiniz.

No	Adı - Soyadı	Toplam Puan	Değerlendirme
1			
2			
3			
4			
5			
6			
7			
8			
9			
10			
11			
12			
13			
14			
15			
16			
17			
18			
19			
20			
21			
22			
23			
24			
25			
26			
27			
28			
29			
30			
31			
32			
33			
34			
35			

Hazırlayan: .....