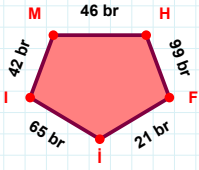
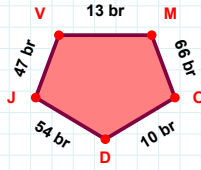


SORU: Aşağıdaki geometrik şekillerle ilgili soruları cevaplayınız.



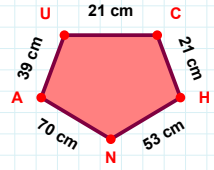
65 br hangi kenara aittir?

Kenar:



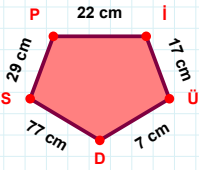
54 br hangi kenara aittir?

Kenar:



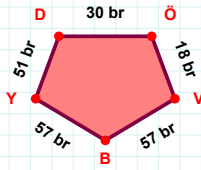
39 cm hangi kenara aittir?

Kenar:



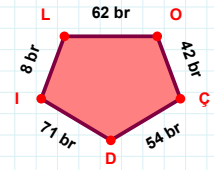
7 cm hangi kenara aittir?

Kenar:



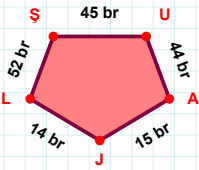
30 br hangi kenara aittir?

Kenar:



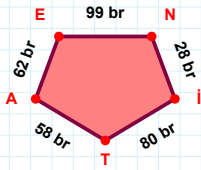
8 br hangi kenara aittir?

Kenar:

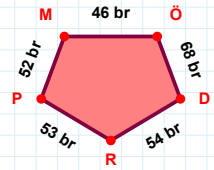


52 br hangi kenara aittir?

- ☐ AL kenarı
☐ JL kenarı
☐ UA kenarı

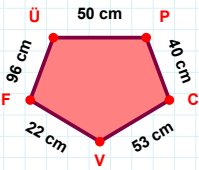
 $|İT| + |AE| = \dots$

Cevap: br

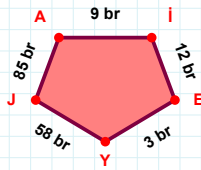


52 br hangi kenara aittir?

- ☐ ÖR kenarı
☐ DR kenarı
☐ RP kenarı

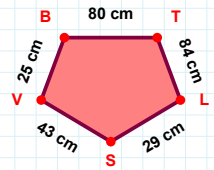
 $|CV|$ kaç cm'dir?

- ☐ 52 cm
☐ 53 cm
☐ 54 cm



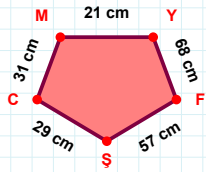
85 br hangi kenara aittir?

- ☐ EY kenarı
☐ YJ kenarı
☐ AE kenarı

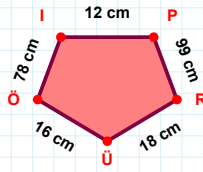
 $|BT| + |VB| = \dots$

Cevap: cm

SORU: Aşağıdaki geometrik şekillerle ilgili soruları cevaplayınız.

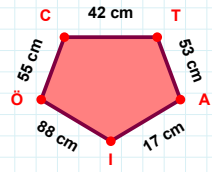
 $|CM| + |MY| = \dots$

Cevap: cm



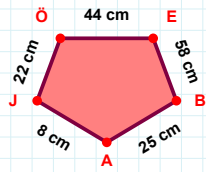
78 cm hangi kenara aittir?

Kenar:



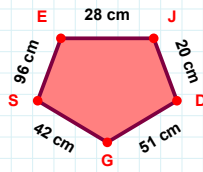
88 cm hangi kenara aittir?

Kenar:

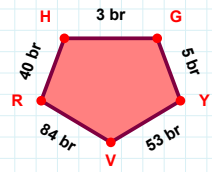


8 cm hangi kenara aittir?

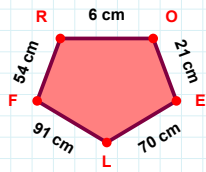
Kenar:

 $|GS|$ kaç cm'dir?

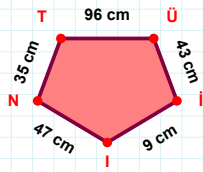
- ☐ 41 cm
☐ 42 cm
☐ 43 cm

 $|HG|$ kaç br'dir?

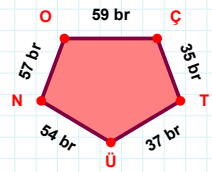
- ☐ 2 br
☐ 3 br
☐ 4 br

 $|LF|$ kaç cm'dir?

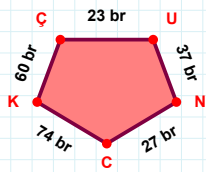
- ☐ 90 cm
☐ 91 cm
☐ 92 cm

 $|TÜ| + |NT| = \dots$

Cevap: cm

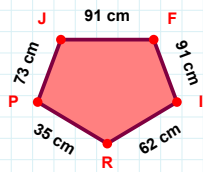
 $|OÇ| + |TÜ| = \dots$

Cevap: br



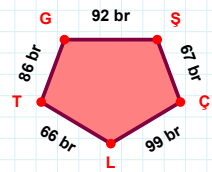
60 br hangi kenara aittir?

- ☐ NC kenarı
☐ UK kenarı
☐ CK kenarı



91 cm hangi kenara aittir?

Kenar:



92 br hangi kenara aittir?

Kenar:

SÜREÇ ODAKLI DEĞERLENDİRME ÖLÇEĞİ

Doğru Sayısı: / 24

Öğretmen ilgili kutucuğu işaretler.

Geliştirilmeli (0-8)

İyi (9-14)

Çok İyi (15-20)

Mükemmel (21-24)

☐☐☐☐

Hazırlayan:

Bu bölüme sınıfınızın ilgili kazanıma yönelik genel durumuna ilişkin gözlem ve izlenimlerinizi, öğrencilerinizin bu kazanımla ilgili öğrenme eksikliklerini ve bu eksikliklerin giderilmesi amacıyla yaptığınız/yapmayı planladığınız faaliyetleri not edebilirsiniz.

No	Adı - Soyadı	Toplam Puan	Değerlendirme
1			
2			
3			
4			
5			
6			
7			
8			
9			
10			
11			
12			
13			
14			
15			
16			
17			
18			
19			
20			
21			
22			
23			
24			
25			
26			
27			
28			
29			
30			
31			
32			
33			
34			
35			

Hazırlayan: