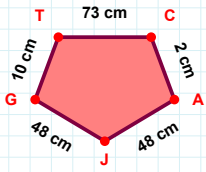
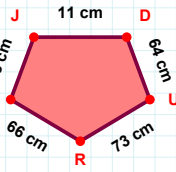


SORU: Aşağıdaki geometrik şekillerle ilgili soruları cevaplayınız.



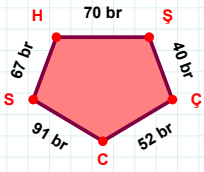
10 cm hangi kenara aittir?

- ☐ TC kenarı
☐ GC kenarı
☐ AJ kenarı



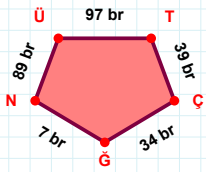
18 cm hangi kenara aittir?

- ☐ HJ kenarı
☐ JR kenarı
☐ JD kenarı



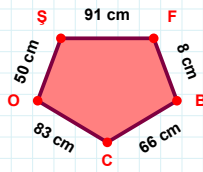
67 br hangi kenara aittir?

- ☐ ÇS kenarı
☐ SH kenarı
☐ HŞ kenarı

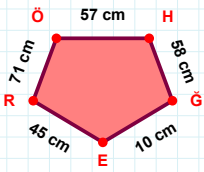


89 br hangi kenara aittir?

- ☐ ÇG kenarı
☐ ÜT kenarı
☐ ÜÇ kenarı

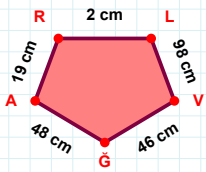
 $|FB| + |BC| = \dots$

Cevap: cm

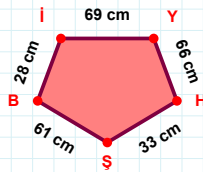


10 cm hangi kenara aittir?

Kenar:

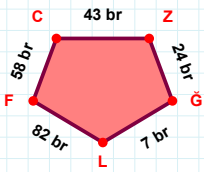
 $|VG|$ kaç cm'dir?

- ☐ 45 cm
☐ 46 cm
☐ 47 cm



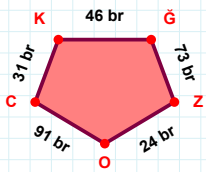
28 cm hangi kenara aittir?

- ☐ BH kenarı
☐ HŞ kenarı
☐ YH kenarı

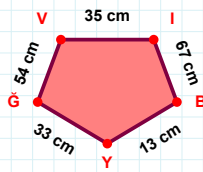


82 br hangi kenara aittir?

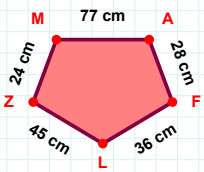
Kenar:

 $|KĞ| + |CK| = \dots$

Cevap: br

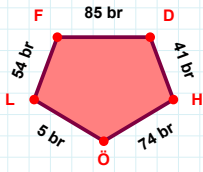
 $|YĞ| + |İB| = \dots$

Cevap: cm

 $|AF| + |MA| = \dots$

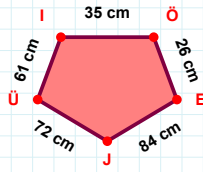
Cevap: cm

SORU: Aşağıdaki geometrik şekillerle ilgili soruları cevaplayınız.



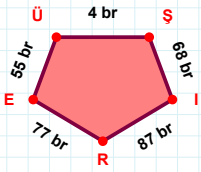
85 br hangi kenara aittir?

Kenar:



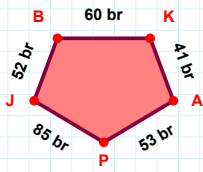
|JÜ| kaç cmdir?

- ☐ 71 cm
☐ 72 cm
☐ 73 cm



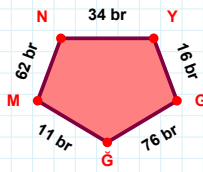
|İR| kaç brdir?

- ☐ 86 br
☐ 87 br
☐ 88 br



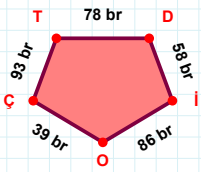
|KA| + |AP| =

Cevap: br



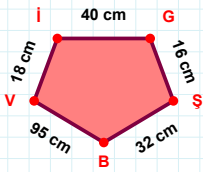
|MN| kaç brdir?

- ☐ 61 br
☐ 62 br
☐ 63 br



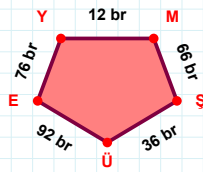
78 br hangi kenara aittir?

Kenar:



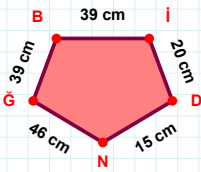
95 cm hangi kenara aittir?

Kenar:



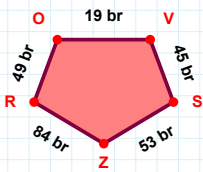
76 br hangi kenara aittir?

- ☐ ÜE kenarı
☐ MÜ kenarı
☐ EY kenarı



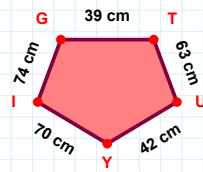
39 cm hangi kenara aittir?

- ☐ BN kenarı
☐ GB kenarı
☐ NG kenarı



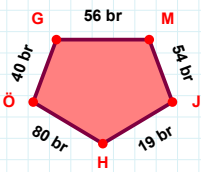
49 br hangi kenara aittir?

- ☐ OV kenarı
☐ VR kenarı
☐ ZR kenarı



|TU| kaç cmdir?

- ☐ 62 cm
☐ 63 cm
☐ 64 cm



40 br hangi kenara aittir?

- ☐ HÖ kenarı
☐ ÖG kenarı
☐ HG kenarı

SÜREÇ ODAKLI DEĞERLENDİRME ÖLÇEĞİ

Doğru Sayısı: / 24

Öğretmen ilgili kutucuğu işaretler.

Geliştirilmeli (0-8)

İyi (9-14)

Çok İyi (15-20)

Mükemmel (21-24)

☐☐☐☐

Hazırlayan:

Bu bölüme sınıfınızın ilgili kazanıma yönelik genel durumuna ilişkin gözlem ve izlenimlerinizi, öğrencilerinizin bu kazanımla ilgili öğrenme eksikliklerini ve bu eksikliklerin giderilmesi amacıyla yaptığınız/yapmayı planladığınız faaliyetleri not edebilirsiniz.

No	Adı - Soyadı	Toplam Puan	Değerlendirme
1			
2			
3			
4			
5			
6			
7			
8			
9			
10			
11			
12			
13			
14			
15			
16			
17			
18			
19			
20			
21			
22			
23			
24			
25			
26			
27			
28			
29			
30			
31			
32			
33			
34			
35			

Hazırlayan: