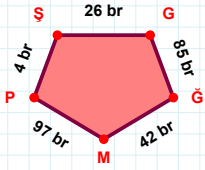
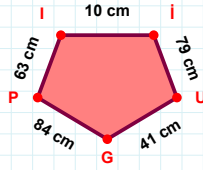


SORU: Aşağıdaki geometrik şekillerle ilgili soruları cevaplayınız.



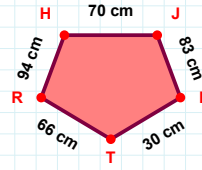
|GG| kaç brdir?

- ☐ 84 br
☐ 85 br
☐ 86 br



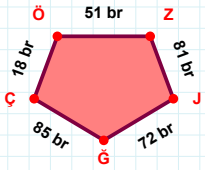
63 cm hangi kenara aittir?

- ☐ PI kenarı
☐ İP kenarı
☐ İU kenarı



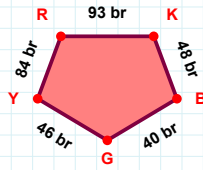
|HJ| kaç cmdir?

- ☐ 69 cm
☐ 70 cm
☐ 71 cm



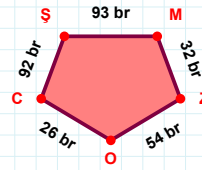
51 br hangi kenara aittir?

Kenar:



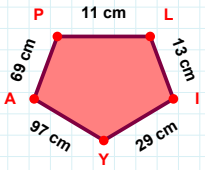
|BG| + |YR| =

Cevap: br



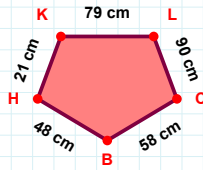
|MZ| kaç brdir?

- ☐ 31 br
☐ 32 br
☐ 33 br



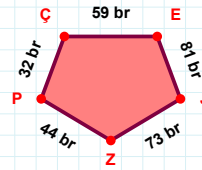
29 cm hangi kenara aittir?

Kenar:



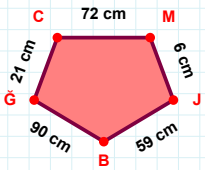
|KL| + |LC| =

Cevap: cm



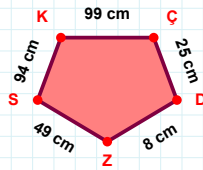
32 br hangi kenara aittir?

- ☐ ZE kenarı
☐ ZP kenarı
☐ JZ kenarı



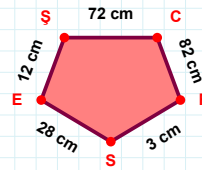
|CM| + |MJ| =

Cevap: cm



94 cm hangi kenara aittir?

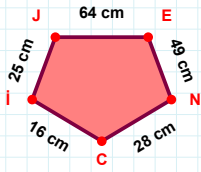
- ☐ KÇ kenarı
☐ SÇ kenarı
☐ ÇD kenarı



12 cm hangi kenara aittir?

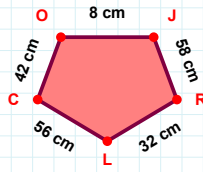
- ☐ SE kenarı
☐ EŞ kenarı
☐ SC kenarı

SORU: Aşağıdaki geometrik şekillerle ilgili soruları cevaplayınız.



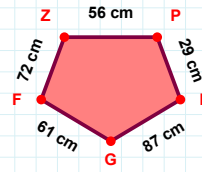
25 cm hangi kenara aittir?

- ☐ EN kenarı
☐ EC kenarı
☐ NC kenarı



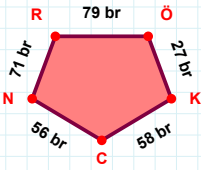
|JR| kaç cm'dir?

- ☐ 57 cm
☐ 58 cm
☐ 59 cm



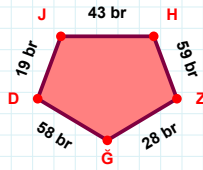
56 cm hangi kenara aittir?

Kenar:



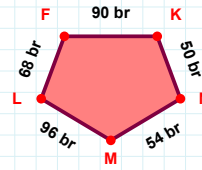
|RÖ| + |CN| =

Cevap: br



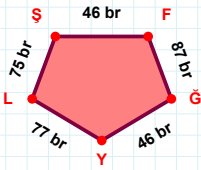
19 br hangi kenara aittir?

- ☐ ZG kenarı
☐ HZ kenarı
☐ JG kenarı



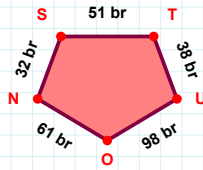
|FK| + |ML| =

Cevap: br



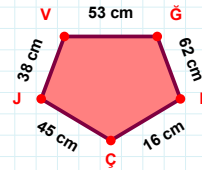
|LŞ| + |GY| =

Cevap: br



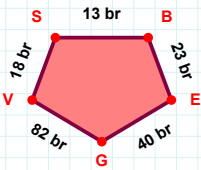
|TU| + |ON| =

Cevap: br



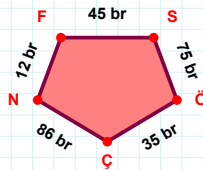
53 cm hangi kenara aittir?

Kenar:



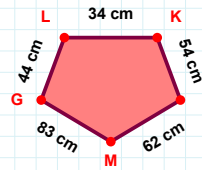
|GV| + |EG| =

Cevap: br



12 br hangi kenara aittir?

- ☐ SÖ kenarı
☐ ÇN kenarı
☐ NÖ kenarı



83 cm hangi kenara aittir?

Kenar:

SÜREÇ ODAKLI DEĞERLENDİRME ÖLÇEĞİ

Doğru Sayısı: / 24

Öğretmen ilgili kutucuğu işaretler.

Geliştirilmeli (0-8)

İyi (9-14)

Çok İyi (15-20)

Mükemmel (21-24)

☐☐☐☐

Hazırlayan:

Bu bölüme sınıfınızın ilgili kazanıma yönelik genel durumuna ilişkin gözlem ve izlenimlerinizi, öğrencilerinizin bu kazanımla ilgili öğrenme eksikliklerini ve bu eksikliklerin giderilmesi amacıyla yaptığınız/yapmayı planladığınız faaliyetleri not edebilirsiniz.

No	Adı - Soyadı	Toplam Puan	Değerlendirme
1			
2			
3			
4			
5			
6			
7			
8			
9			
10			
11			
12			
13			
14			
15			
16			
17			
18			
19			
20			
21			
22			
23			
24			
25			
26			
27			
28			
29			
30			
31			
32			
33			
34			
35			

Hazırlayan: