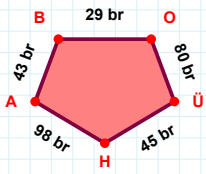
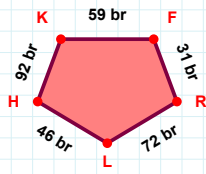


SORU: Aşağıdaki geometrik şekillerle ilgili soruları cevaplayınız.

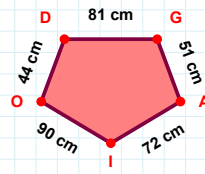


43 br hangi kenara aittir?

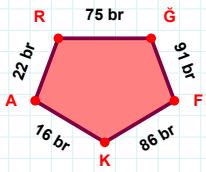
- ☐ AO kenarı
☐ BO kenarı
☐ HA kenarı

 $|RL| + |HK| = \dots$

Cevap: br

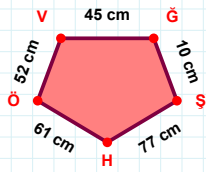
 $|OD|$ kaç cm'dir?

- ☐ 43 cm
☐ 44 cm
☐ 45 cm

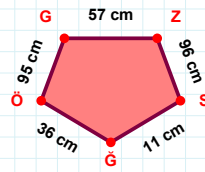


22 br hangi kenara aittir?

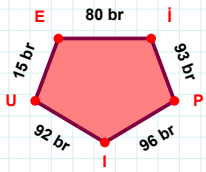
- ☐ AR kenarı
☐ GF kenarı
☐ RK kenarı

 $|VG| + |HÖ| = \dots$

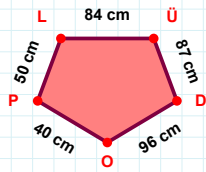
Cevap: cm

 $|ÖG| + |ZS| = \dots$

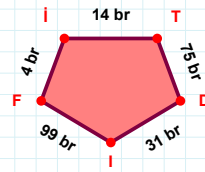
Cevap: cm

 $|EI|$ kaç br'dir?

- ☐ 79 br
☐ 80 br
☐ 81 br

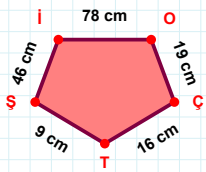
 $|OP|$ kaç cm'dir?

- ☐ 39 cm
☐ 40 cm
☐ 41 cm



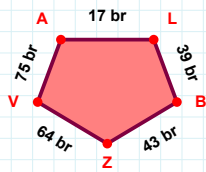
99 br hangi kenara aittir?

Kenar:



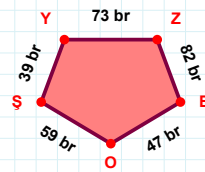
9 cm hangi kenara aittir?

Kenar:



75 br hangi kenara aittir?

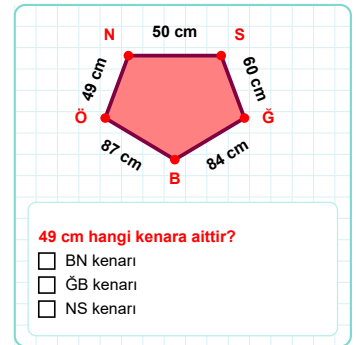
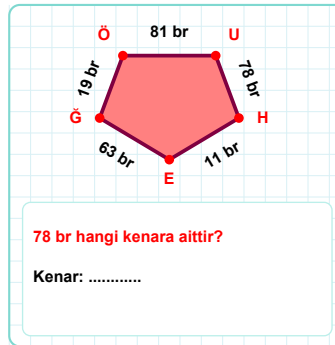
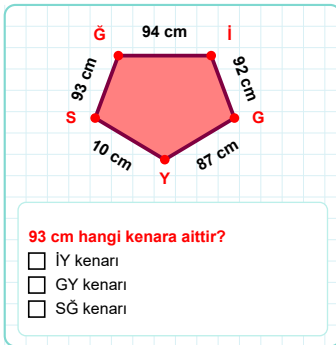
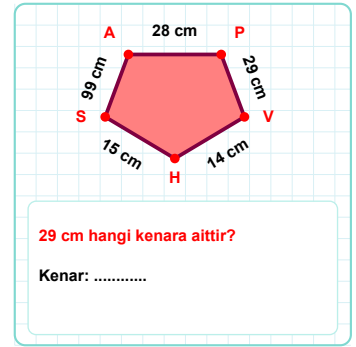
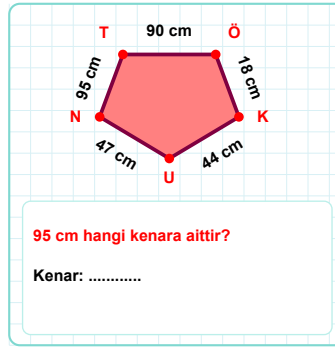
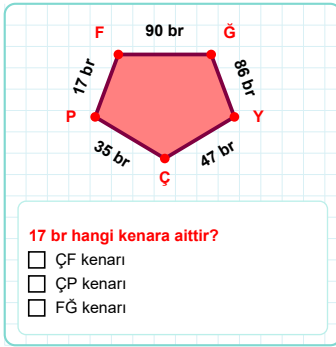
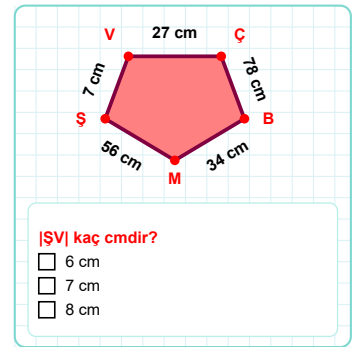
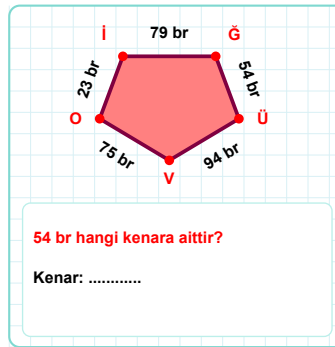
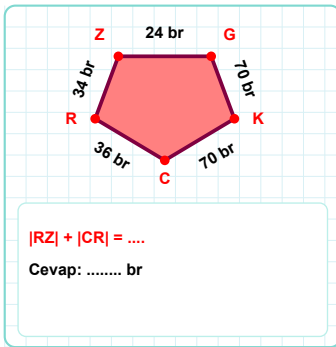
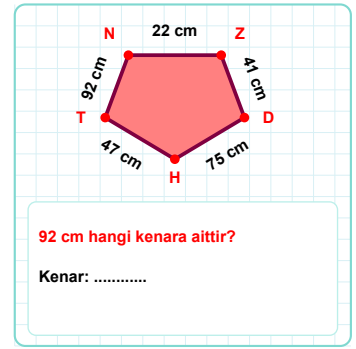
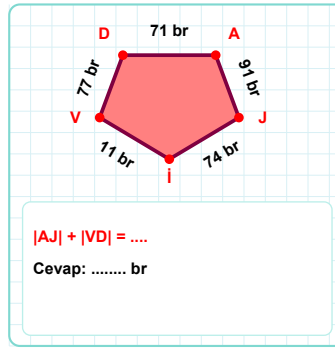
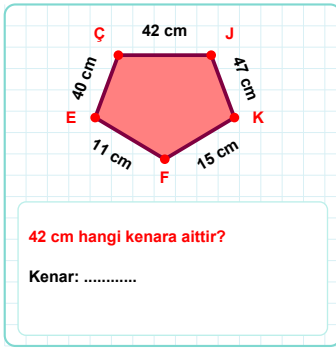
- ☐ VA kenarı
☐ LB kenarı
☐ LV kenarı



39 br hangi kenara aittir?

- ☐ YZ kenarı
☐ ŞY kenarı
☐ ZO kenarı

SORU: Aşağıdaki geometrik şekillerle ilgili soruları cevaplayınız.



SÜREÇ ODAKLI DEĞERLENDİRME ÖLÇEĞİ

Doğru Sayısı: / 24

Öğretmen ilgili kutucuğu işaretler.

Geliştirilmeli (0-8)

İyi (9-14)

Çok İyi (15-20)

Mükemmel (21-24)

☐☐☐☐

Hazırlayan:

Bu bölüme sınıfınızın ilgili kazanıma yönelik genel durumuna ilişkin gözlem ve izlenimlerinizi, öğrencilerinizin bu kazanımla ilgili öğrenme eksikliklerini ve bu eksikliklerin giderilmesi amacıyla yaptığınız/yapmayı planladığınız faaliyetleri not edebilirsiniz.

No	Adı - Soyadı	Toplam Puan	Değerlendirme
1			
2			
3			
4			
5			
6			
7			
8			
9			
10			
11			
12			
13			
14			
15			
16			
17			
18			
19			
20			
21			
22			
23			
24			
25			
26			
27			
28			
29			
30			
31			
32			
33			
34			
35			

Hazırlayan: