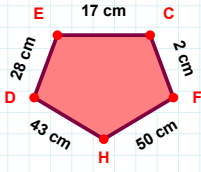
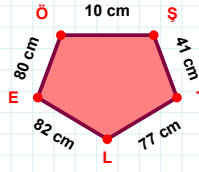


SORU: Aşağıdaki geometrik şekillerle ilgili soruları cevaplayınız.



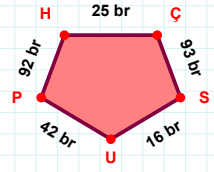
$$|FH| + |EC| = \dots$$

Cevap: cm



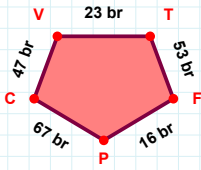
80 cm hangi kenara aittir?

- ☐ ŞE kenarı
☐ TL kenarı
☐ EÖ kenarı



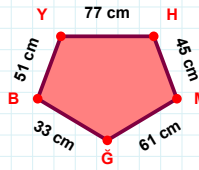
$$|PH| + |ÇS| = \dots$$

Cevap: br



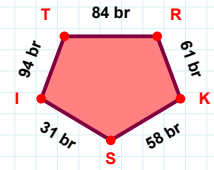
47 br hangi kenara aittir?

- ☐ TF kenarı
☐ VP kenarı
☐ PC kenarı



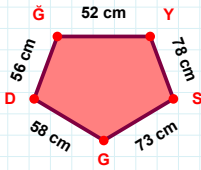
51 cm hangi kenara aittir?

Kenar:



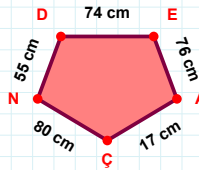
|IT| kaç brdir?

- ☐ 93 br
☐ 94 br
☐ 95 br



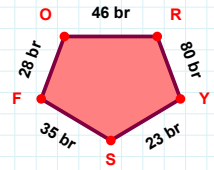
$$|YS| + |SG| = \dots$$

Cevap: cm



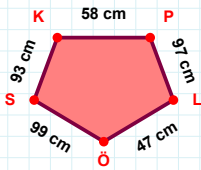
|AÇ| kaç cmdir?

- ☐ 16 cm
☐ 17 cm
☐ 18 cm



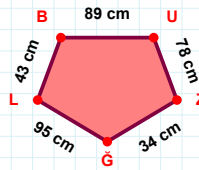
28 br hangi kenara aittir?

- ☐ FY kenarı
☐ SF kenarı
☐ FO kenarı



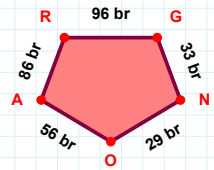
$$|KP| + |ÖS| = \dots$$

Cevap: cm



89 cm hangi kenara aittir?

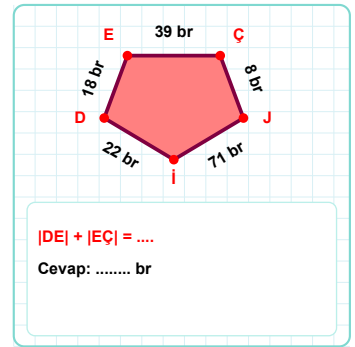
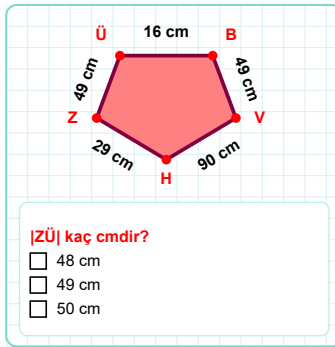
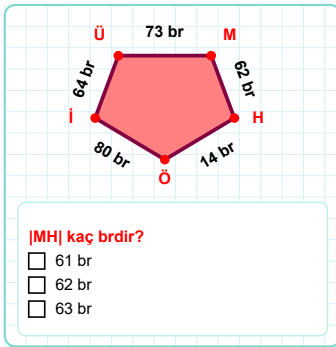
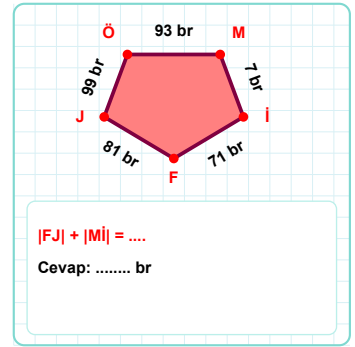
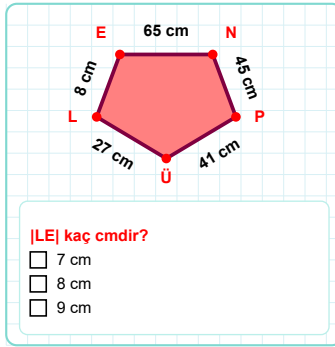
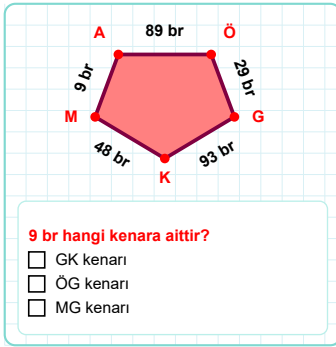
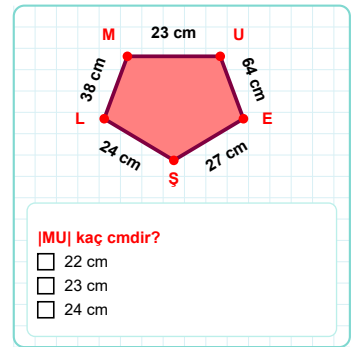
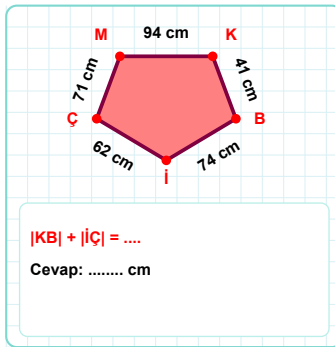
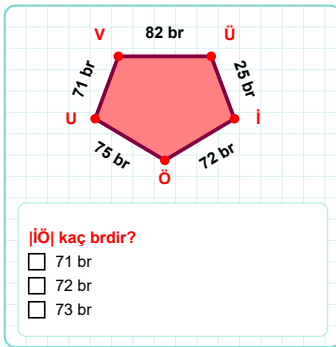
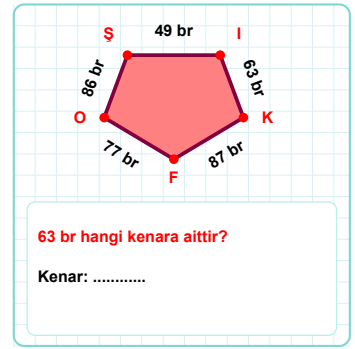
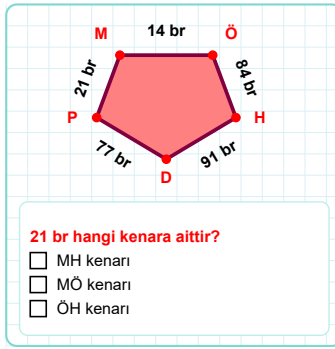
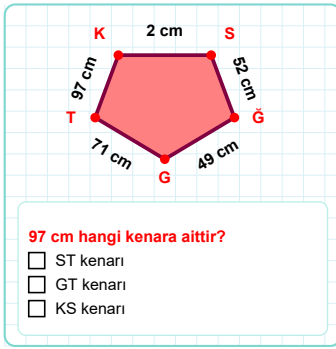
Kenar:



86 br hangi kenara aittir?

- ☐ OA kenarı
☐ AG kenarı
☐ GN kenarı

SORU: Aşağıdaki geometrik şekillerle ilgili soruları cevaplayınız.



SÜREÇ ODAKLI DEĞERLENDİRME ÖLÇEĞİ

Doğru Sayısı: / 24

Öğretmen ilgili kutucuğu işaretler.

Geliştirilmeli (0-8)

İyi (9-14)

Çok İyi (15-20)

Mükemmel (21-24)

☐☐☐☐

Hazırlayan:

Bu bölüme sınıfınızın ilgili kazanıma yönelik genel durumuna ilişkin gözlem ve izlenimlerinizi, öğrencilerinizin bu kazanımla ilgili öğrenme eksikliklerini ve bu eksikliklerin giderilmesi amacıyla yaptığınız/yapmayı planladığınız faaliyetleri not edebilirsiniz.

No	Adı - Soyadı	Toplam Puan	Değerlendirme
1			
2			
3			
4			
5			
6			
7			
8			
9			
10			
11			
12			
13			
14			
15			
16			
17			
18			
19			
20			
21			
22			
23			
24			
25			
26			
27			
28			
29			
30			
31			
32			
33			
34			
35			

Hazırlayan: