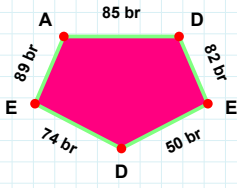
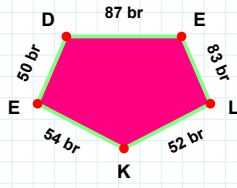


SORU: Aşağıdaki şekillerde istenen kenarın kaç birim veya santimetre olduğunu bulunuz.



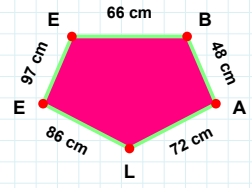
|DE| kaç brdir?

- ☐ 87 br
☐ 77 br
☐ 82 br



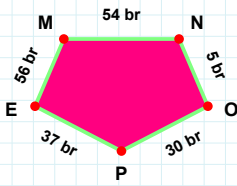
|LE| kaç cmdir?

- ☐ 84 cm
☐ 83 cm
☐ 86 cm



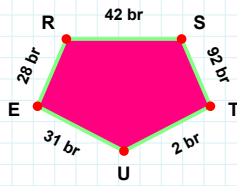
|DE| kaç brdir?

- ☐ 75 br
☐ 74 br
☐ 72 br



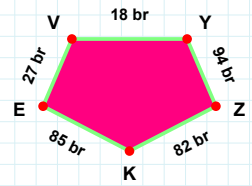
|EV| kaç brdir?

- ☐ 27 br
☐ 32 br
☐ 26 br



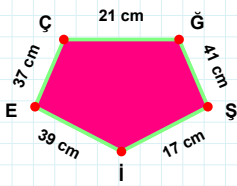
|ST| kaç brdir?

- ☐ 92 br
☐ 93 br
☐ 82 br



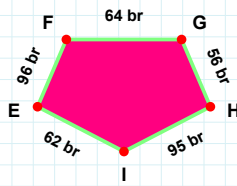
|OP| kaç brdir?

- ☐ 40 br
☐ 30 br
☐ 35 br



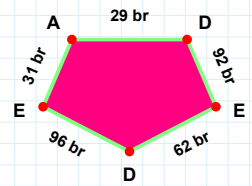
|EF| kaç brdir?

- ☐ 96 br
☐ 97 br
☐ 86 br



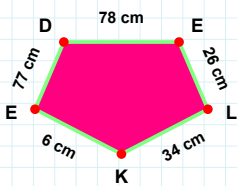
|ED| kaç brdir?

- ☐ 64 br
☐ 62 br
☐ 61 br



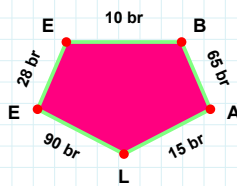
|ÇĞ| kaç cmdir?

- ☐ 21 cm
☐ 16 cm
☐ 19 cm



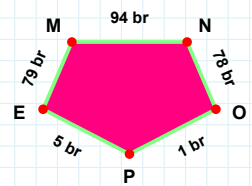
|BA| kaç brdir?

- ☐ 65 br
☐ 60 br
☐ 62 br



|DE| kaç cmdir?

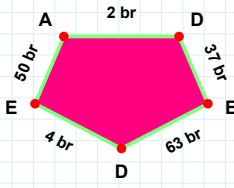
- ☐ 83 cm
☐ 78 cm
☐ 76 cm



|PE| kaç brdir?

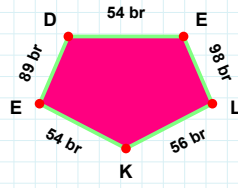
- ☐ 5 br
☐ 4 br
☐ 7 br

SORU: Aşağıdaki şekillerde istenen kenarın kaç birim veya santimetre olduğunu bulunuz.



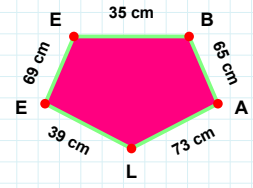
|KE| kaç brdir?

- ☐ 55 br
☐ 56 br
☐ 54 br



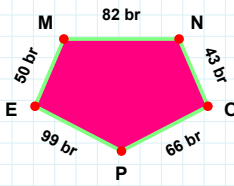
|EB| kaç cmdir?

- ☐ 34 cm
☐ 37 cm
☐ 35 cm



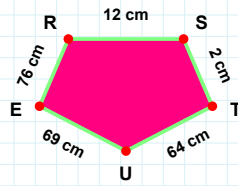
|DE| kaç brdir?

- ☐ 37 br
☐ 27 br
☐ 32 br



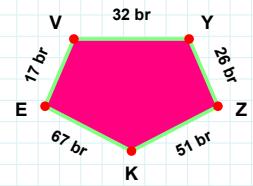
|ZK| kaç brdir?

- ☐ 46 br
☐ 49 br
☐ 51 br



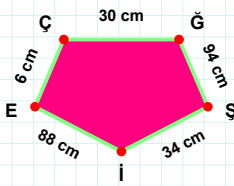
|RS| kaç cmdir?

- ☐ 12 cm
☐ 14 cm
☐ 7 cm



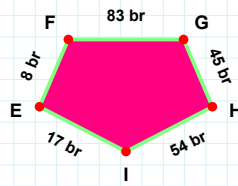
|PE| kaç brdir?

- ☐ 94 br
☐ 99 br
☐ 96 br



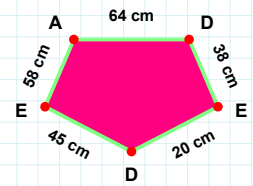
|EÇ| kaç cmdir?

- ☐ 3 cm
☐ 16 cm
☐ 6 cm



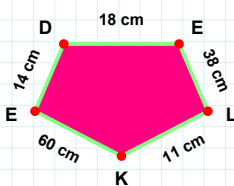
|EF| kaç brdir?

- ☐ 18 br
☐ 10 br
☐ 8 br



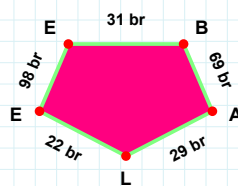
|AD| kaç cmdir?

- ☐ 64 cm
☐ 66 cm
☐ 62 cm



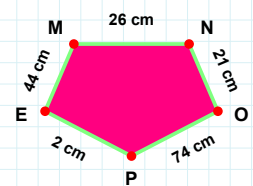
|PE| kaç cmdir?

- ☐ 12 cm
☐ 2 cm
☐ 1 cm



|EE| kaç brdir?

- ☐ 93 br
☐ 98 br
☐ 99 br



|KE| kaç cmdir?

- ☐ 57 cm
☐ 55 cm
☐ 60 cm

SÜREÇ ODAKLI DEĞERLENDİRME ÖLÇEĞİ

Doğru Sayısı: / 24

Öğretmen ilgili kutucuğu işaretler.

Geliştirilmeli (0-8)

İyi (9-14)

Çok İyi (15-20)

Mükemmel (21-24)

☐
☐
☐
☐

Hazırlayan:

Bu bölüme sınıfınızın ilgili kazanıma yönelik genel durumuna ilişkin gözlem ve izlenimlerinizi, öğrencilerinizin bu kazanımla ilgili öğrenme eksikliklerini ve bu eksikliklerin giderilmesi amacıyla yaptığınız/yapmayı planladığınız faaliyetleri not edebilirsiniz.

No	Adı - Soyadı	Toplam Puan	Değerlendirme
1			
2			
3			
4			
5			
6			
7			
8			
9			
10			
11			
12			
13			
14			
15			
16			
17			
18			
19			
20			
21			
22			
23			
24			
25			
26			
27			
28			
29			
30			
31			
32			
33			
34			
35			

Hazırlayan: