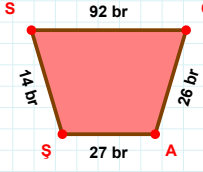
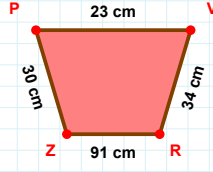


SORU: Aşağıdaki geometrik şekillerle ilgili soruları cevaplayınız.



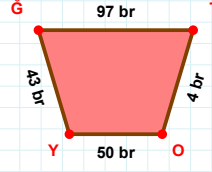
|SS| kaç brdir?

- ☐ 13 br
☐ 14 br
☐ 15 br



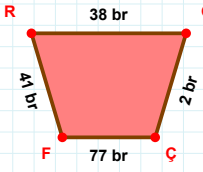
|PV| kaç cmdir?

- ☐ 22 cm
☐ 23 cm
☐ 24 cm



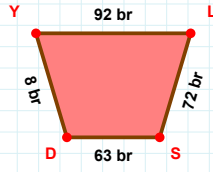
|TO| kaç brdir?

- ☐ 3 br
☐ 4 br
☐ 5 br



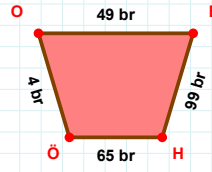
|RG| + |GÇ| =

Cevap: br



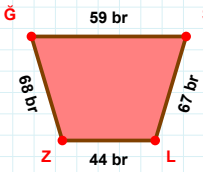
|DY| + |LS| =

Cevap: br



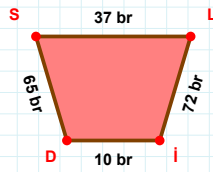
|ÖO| kaç brdir?

- ☐ 3 br
☐ 4 br
☐ 5 br



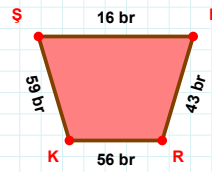
|ZŞ| kaç brdir?

- ☐ 67 br
☐ 68 br
☐ 69 br



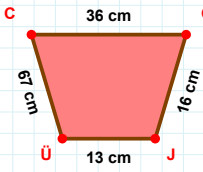
65 br hangi kenara aittir?

Kenar:



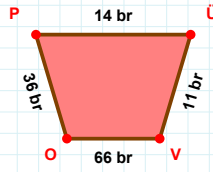
59 br hangi kenara aittir?

- ☐ ŞR kenarı
☐ PR kenarı
☐ RK kenarı



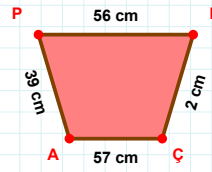
|ÜC| + |CG| =

Cevap: cm



|ÜV| kaç brdir?

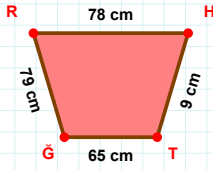
- ☐ 10 br
☐ 11 br
☐ 12 br



39 cm hangi kenara aittir?

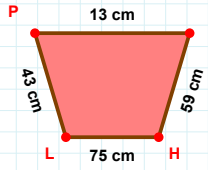
- ☐ ÇP kenarı
☐ LÇ kenarı
☐ ÇA kenarı

SORU: Aşağıdaki geometrik şekillerle ilgili soruları cevaplayınız.



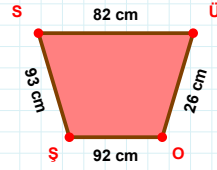
|HT| kaç cm'dir?

- ☐ 8 cm
☐ 9 cm
☐ 10 cm



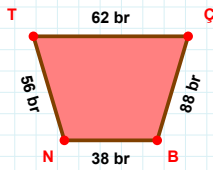
43 cm hangi kenara aittir?

- ☐ PH kenarı
☐ İH kenarı
☐ PL kenarı



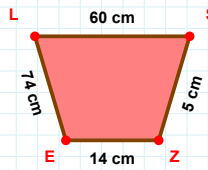
93 cm hangi kenara aittir?

- ☐ OS kenarı
☐ SÜ kenarı
☐ ŞS kenarı



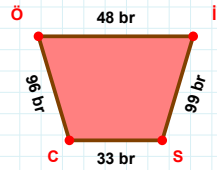
56 br hangi kenara aittir?

- ☐ ÇB kenarı
☐ NÇ kenarı
☐ BN kenarı



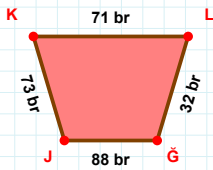
|SZ| kaç cm'dir?

- ☐ 4 cm
☐ 5 cm
☐ 6 cm



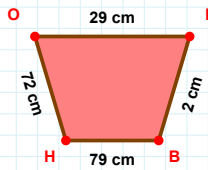
96 br hangi kenara aittir?

- ☐ CÖ kenarı
☐ CI kenarı
☐ Öİ kenarı



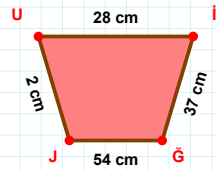
|JK| + |LG| =

Cevap: br



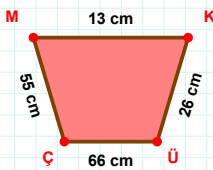
|KB| kaç cm'dir?

- ☐ 1 cm
☐ 2 cm
☐ 3 cm



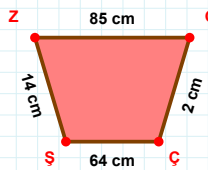
|ĞJ| kaç cm'dir?

- ☐ 53 cm
☐ 54 cm
☐ 55 cm



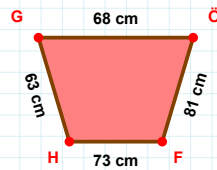
13 cm hangi kenara aittir?

Kenar:



14 cm hangi kenara aittir?

- ☐ GŞ kenarı
☐ GÇ kenarı
☐ ŞZ kenarı



63 cm hangi kenara aittir?

Kenar:

SÜREÇ ODAKLI DEĞERLENDİRME ÖLÇEĞİ

Doğru Sayısı: / 24

Öğretmen ilgili kutucuğu işaretler.

Geliştirilmeli (0-8)

İyi (9-14)

Çok İyi (15-20)

Mükemmel (21-24)

☐
☐
☐
☐

Hazırlayan:

Bu bölüme sınıfınızın ilgili kazanıma yönelik genel durumuna ilişkin gözlem ve izlenimlerinizi, öğrencilerinizin bu kazanımla ilgili öğrenme eksikliklerini ve bu eksikliklerin giderilmesi amacıyla yaptığınız/yapmayı planladığınız faaliyetleri not edebilirsiniz.

No	Adı - Soyadı	Toplam Puan	Değerlendirme
1			
2			
3			
4			
5			
6			
7			
8			
9			
10			
11			
12			
13			
14			
15			
16			
17			
18			
19			
20			
21			
22			
23			
24			
25			
26			
27			
28			
29			
30			
31			
32			
33			
34			
35			

Hazırlayan: