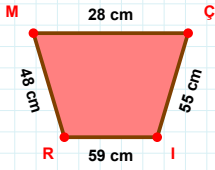
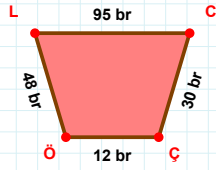


SORU: Aşağıdaki geometrik şekillerle ilgili soruları cevaplayınız.



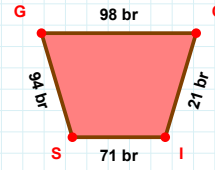
$|MC| + |RM| = \dots$

Cevap: ..... cm



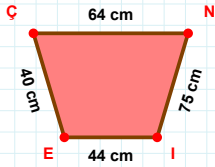
$|CÇ| + |ÇÖ| = \dots$

Cevap: ..... br



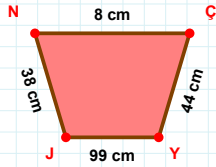
98 br hangi kenara aittir?

Kenar: .....



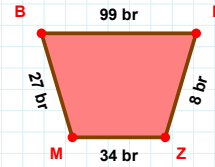
75 cm hangi kenara aittir?

Kenar: .....



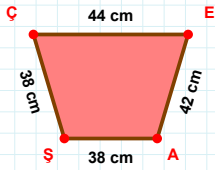
$|ÇY| + |JN| = \dots$

Cevap: ..... cm



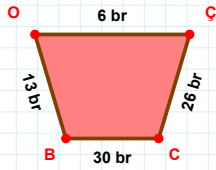
27 br hangi kenara aittir?

- ☐ BP kenarı  
☐ ZM kenarı  
☐ MP kenarı



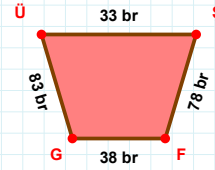
$|ÇE| + |AŞ| = \dots$

Cevap: ..... cm



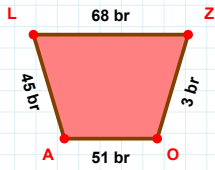
|CB| kaç brdir?

- ☐ 29 br  
☐ 30 br  
☐ 31 br



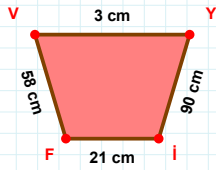
$|ÜŞ| + |FG| = \dots$

Cevap: ..... br



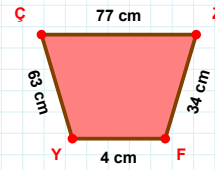
$|OA| + |AL| = \dots$

Cevap: ..... br



|İF| kaç cmdir?

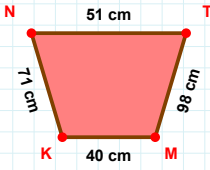
- ☐ 20 cm  
☐ 21 cm  
☐ 22 cm



63 cm hangi kenara aittir?

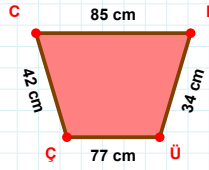
Kenar: .....

SORU: Aşağıdaki geometrik şekillerle ilgili soruları cevaplayınız.



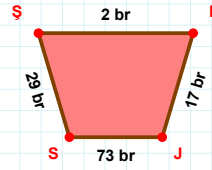
71 cm hangi kenara aittir?

- ☐ NT kenarı  
☐ KT kenarı  
☐ TM kenarı



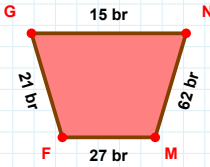
77 cm hangi kenara aittir?

Kenar: .....

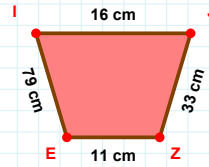


29 br hangi kenara aittir?

- ☐ ES kenarı  
☐ JS kenarı  
☐ EJ kenarı

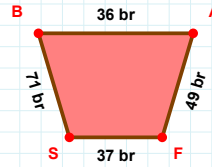
 $|FG| + |GN| = \dots$ 

Cevap: ..... br



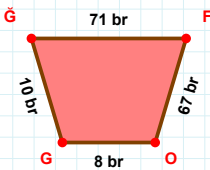
79 cm hangi kenara aittir?

Kenar: .....

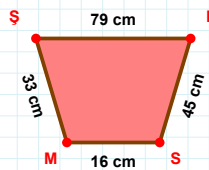


71 br hangi kenara aittir?

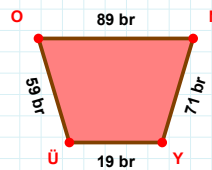
- ☐ FS kenarı  
☐ AF kenarı  
☐ SA kenarı

 $|OG| + |FO| = \dots$ 

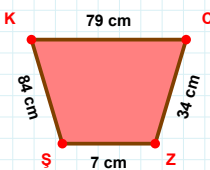
Cevap: ..... br

 $|KS|$  kaç cm'dir?

- ☐ 44 cm  
☐ 45 cm  
☐ 46 cm

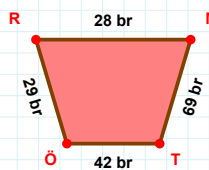
 $|ON|$  kaç br'dir?

- ☐ 88 br  
☐ 89 br  
☐ 90 br

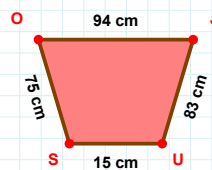


84 cm hangi kenara aittir?

- ☐ ŞK kenarı  
☐ ŞC kenarı  
☐ ZŞ kenarı

 $|MT| + |ÖR| = \dots$ 

Cevap: ..... br

 $|US| + |OJ| = \dots$ 

Cevap: ..... cm

## SÜREÇ ODAKLI DEĞERLENDİRME ÖLÇEĞİ

Doğru Sayısı: ..... / 24

Öğretmen ilgili kutucuğu işaretler.

Geliştirilmeli (0-8)

İyi (9-14)

Çok İyi (15-20)

Mükemmel (21-24)

☐
☐
☐
☐

Hazırlayan: .....

Bu bölüme sınıfınızın ilgili kazanıma yönelik genel durumuna ilişkin gözlem ve izlenimlerinizi, öğrencilerinizin bu kazanımla ilgili öğrenme eksikliklerini ve bu eksikliklerin giderilmesi amacıyla yaptığınız/yapmayı planladığınız faaliyetleri not edebilirsiniz.

No	Adı - Soyadı	Toplam Puan	Değerlendirme
1			
2			
3			
4			
5			
6			
7			
8			
9			
10			
11			
12			
13			
14			
15			
16			
17			
18			
19			
20			
21			
22			
23			
24			
25			
26			
27			
28			
29			
30			
31			
32			
33			
34			
35			

Hazırlayan: .....