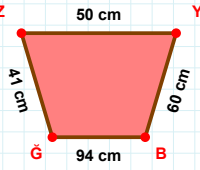
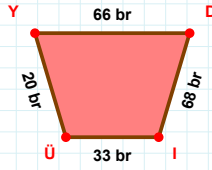


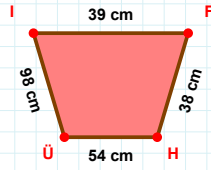
SORU: Aşağıdaki geometrik şekillerle ilgili soruları cevaplayınız.

 $|YB| + |ZY| = \dots$

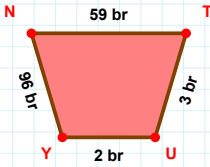
Cevap: cm

 $|DI|$ kaç brdir?

- ☐ 67 br
☐ 68 br
☐ 69 br

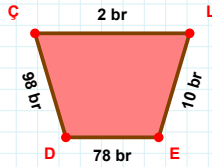
 $|IF|$ kaç cm'dir?

- ☐ 38 cm
☐ 39 cm
☐ 40 cm



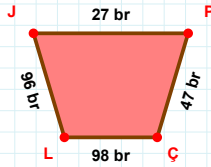
59 br hangi kenara aittir?

Kenar:

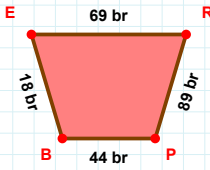


98 br hangi kenara aittir?

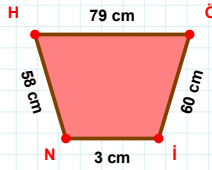
- ☐ LE kenarı
☐ DÇ kenarı
☐ EÇ kenarı

 $|JP|$ kaç brdir?

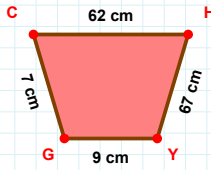
- ☐ 26 br
☐ 27 br
☐ 28 br

 $|ER|$ kaç brdir?

- ☐ 68 br
☐ 69 br
☐ 70 br

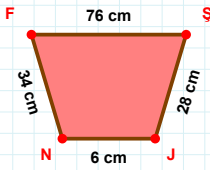
 $|İN| + |HÖ| = \dots$

Cevap: cm



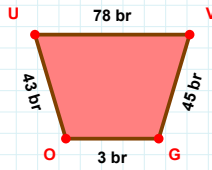
7 cm hangi kenara aittir?

Kenar:



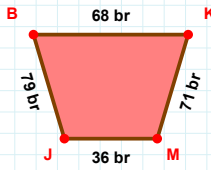
6 cm hangi kenara aittir?

Kenar:



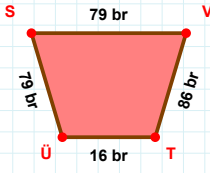
43 br hangi kenara aittir?

- ☐ VO kenarı
☐ VG kenarı
☐ GO kenarı

 $|MJ|$ kaç brdir?

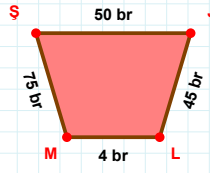
- ☐ 35 br
☐ 36 br
☐ 37 br

SORU: Aşağıdaki geometrik şekillerle ilgili soruları cevaplayınız.



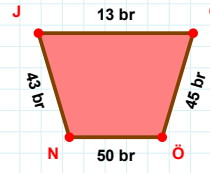
86 br hangi kenara aittir?

Kenar:



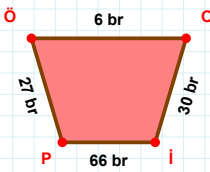
75 br hangi kenara aittir?

- ☐ JL kenarı
☐ JM kenarı
☐ LM kenarı



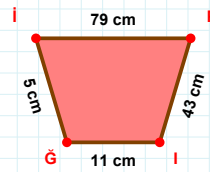
13 br hangi kenara aittir?

Kenar:



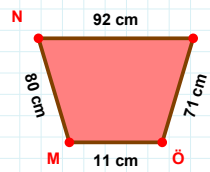
|İP| kaç brdir?

- ☐ 65 br
☐ 66 br
☐ 67 br



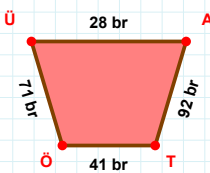
5 cm hangi kenara aittir?

- ☐ İP kenarı
☐ İI kenarı
☐ İG kenarı



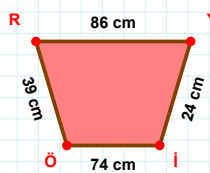
|ÖM| + |MN| =

Cevap: cm



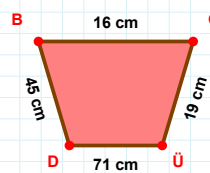
71 br hangi kenara aittir?

- ☐ ÜA kenarı
☐ AÖ kenarı
☐ ÖÜ kenarı



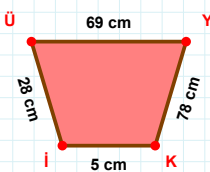
|RY| kaç cm'dir?

- ☐ 85 cm
☐ 86 cm
☐ 87 cm



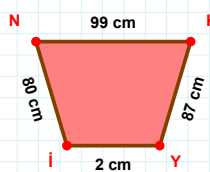
|ĞÜ| + |DB| =

Cevap: cm



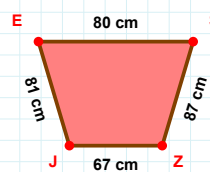
|İÜ| + |YK| =

Cevap: cm



|İN| + |NK| =

Cevap: cm



|ZJ| + |EŞ| =

Cevap: cm

SÜREÇ ODAKLI DEĞERLENDİRME ÖLÇEĞİ

Doğru Sayısı: / 24

Öğretmen ilgili kutucuğu işaretler.

Geliştirilmeli (0-8)

İyi (9-14)

Çok İyi (15-20)

Mükemmel (21-24)

☐
☐
☐
☐

Hazırlayan:

Bu bölüme sınıfınızın ilgili kazanıma yönelik genel durumuna ilişkin gözlem ve izlenimlerinizi, öğrencilerinizin bu kazanımla ilgili öğrenme eksikliklerini ve bu eksikliklerin giderilmesi amacıyla yaptığınız/yapmayı planladığınız faaliyetleri not edebilirsiniz.

No	Adı - Soyadı	Toplam Puan	Değerlendirme
1			
2			
3			
4			
5			
6			
7			
8			
9			
10			
11			
12			
13			
14			
15			
16			
17			
18			
19			
20			
21			
22			
23			
24			
25			
26			
27			
28			
29			
30			
31			
32			
33			
34			
35			

Hazırlayan: