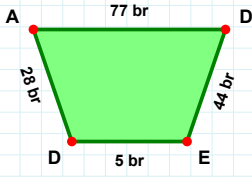
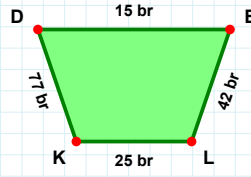


**SORU:** Aşağıdaki şekillerde istenen kenarın kaç birim veya santimetre olduğunu bulunuz.



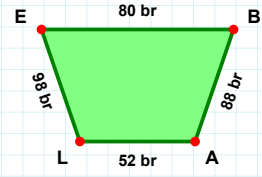
|ED| kaç brdir?

- ☐ 6 br  
☐ 5 br  
☐ 7 br



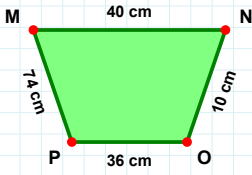
|EB| kaç brdir?

- ☐ 85 br  
☐ 80 br  
☐ 79 br



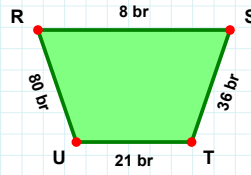
|KD| kaç brdir?

- ☐ 75 br  
☐ 77 br  
☐ 76 br



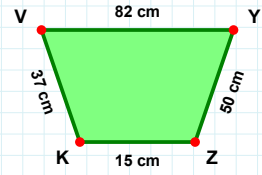
|RS| kaç brdir?

- ☐ 9 br  
☐ 18 br  
☐ 8 br



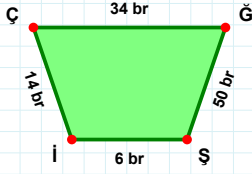
|NO| kaç cmdir?

- ☐ 10 cm  
☐ 8 cm  
☐ 5 cm



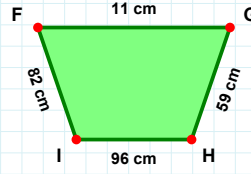
|KV| kaç cmdir?

- ☐ 39 cm  
☐ 40 cm  
☐ 37 cm



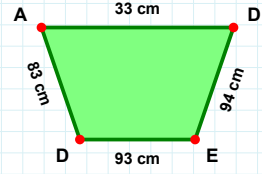
|ÇĞ| kaç brdir?

- ☐ 31 br  
☐ 39 br  
☐ 34 br



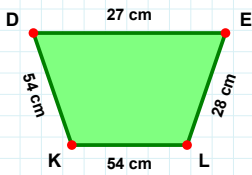
|İF| kaç cmdir?

- ☐ 92 cm  
☐ 72 cm  
☐ 82 cm



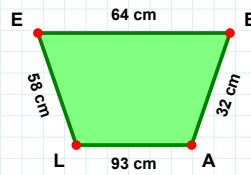
|ED| kaç cmdir?

- ☐ 95 cm  
☐ 93 cm  
☐ 90 cm



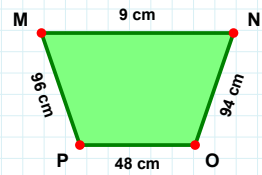
|OP| kaç cmdir?

- ☐ 50 cm  
☐ 48 cm  
☐ 43 cm



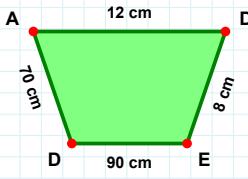
|BA| kaç cmdir?

- ☐ 30 cm  
☐ 32 cm  
☐ 35 cm



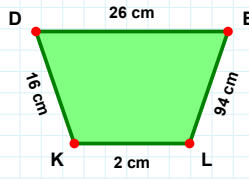
|KD| kaç cmdir?

- ☐ 54 cm  
☐ 55 cm  
☐ 52 cm

**SORU:** Aşağıdaki şekillerde istenen kenarın kaç birim veya santimetre olduğunu bulunuz.

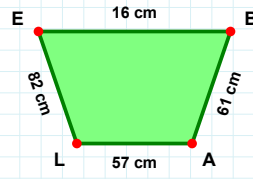
|ED| kaç cmdir?

- ☐ 88 cm  
☐ 90 cm  
☐ 92 cm



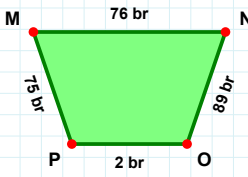
|EL| kaç cmdir?

- ☐ 92 cm  
☐ 94 cm  
☐ 96 cm



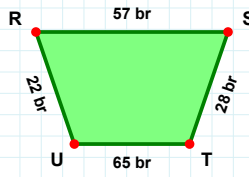
|BA| kaç cmdir?

- ☐ 61 cm  
☐ 62 cm  
☐ 56 cm



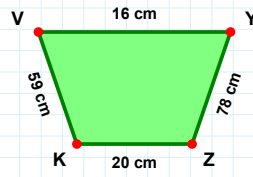
|KV| kaç cmdir?

- ☐ 54 cm  
☐ 59 cm  
☐ 60 cm



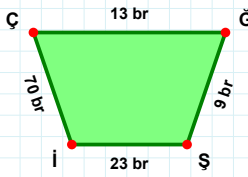
|PM| kaç brdir?

- ☐ 77 br  
☐ 73 br  
☐ 75 br



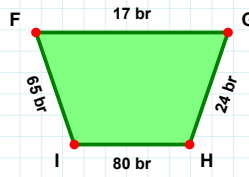
|RS| kaç brdir?

- ☐ 60 br  
☐ 57 br  
☐ 62 br



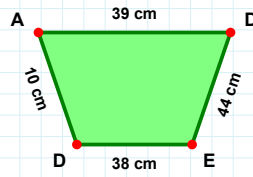
|ED| kaç cmdir?

- ☐ 37 cm  
☐ 40 cm  
☐ 38 cm



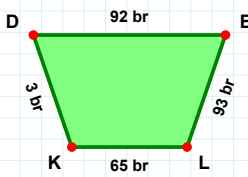
|FG| kaç brdir?

- ☐ 15 br  
☐ 7 br  
☐ 17 br



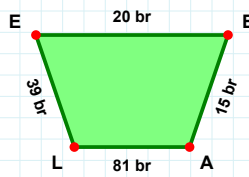
|Şİ| kaç brdir?

- ☐ 21 br  
☐ 23 br  
☐ 13 br



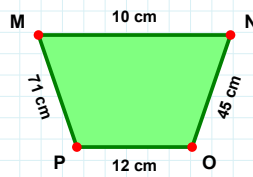
|NO| kaç cmdir?

- ☐ 45 cm  
☐ 44 cm  
☐ 47 cm



|KD| kaç brdir?

- ☐ 3 br  
☐ 8 br  
☐ 1 br



|AL| kaç brdir?

- ☐ 81 br  
☐ 83 br  
☐ 79 br

## SÜREÇ ODAKLI DEĞERLENDİRME ÖLÇEĞİ

Doğru Sayısı: ..... / 24

Öğretmen ilgili kutucuğu işaretler.

Geliştirilmeli (0-8)

İyi (9-14)

Çok İyi (15-20)

Mükemmel (21-24)

☐
☐
☐
☐

Hazırlayan: .....

Bu bölüme sınıfınızın ilgili kazanıma yönelik genel durumuna ilişkin gözlem ve izlenimlerinizi, öğrencilerinizin bu kazanımla ilgili öğrenme eksikliklerini ve bu eksikliklerin giderilmesi amacıyla yaptığınız/yapmayı planladığınız faaliyetleri not edebilirsiniz.

No	Adı - Soyadı	Toplam Puan	Değerlendirme
1			
2			
3			
4			
5			
6			
7			
8			
9			
10			
11			
12			
13			
14			
15			
16			
17			
18			
19			
20			
21			
22			
23			
24			
25			
26			
27			
28			
29			
30			
31			
32			
33			
34			
35			

Hazırlayan: .....