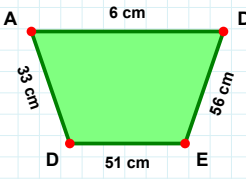
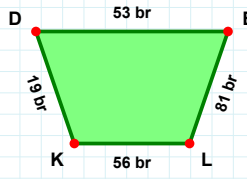


**SORU:** Aşağıdaki şekillerde istenen kenarın kaç birim veya santimetre olduğunu bulunuz.

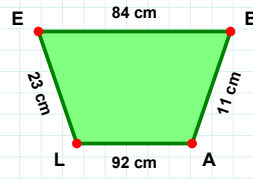
|DE| kaç cmdir?

- ☐ 56 cm  
☐ 61 cm  
☐ 53 cm



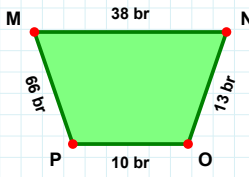
|EL| kaç brdir?

- ☐ 84 br  
☐ 81 br  
☐ 91 br



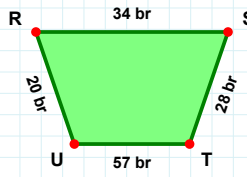
|BA| kaç cmdir?

- ☐ 1 cm  
☐ 6 cm  
☐ 11 cm



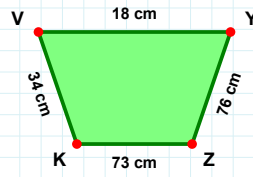
|YZ| kaç cmdir?

- ☐ 76 cm  
☐ 77 cm  
☐ 81 cm



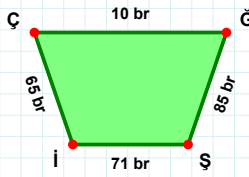
|ST| kaç brdir?

- ☐ 29 br  
☐ 26 br  
☐ 28 br



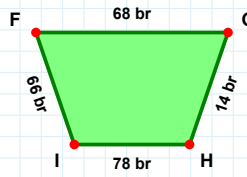
|MN| kaç brdir?

- ☐ 37 br  
☐ 38 br  
☐ 48 br



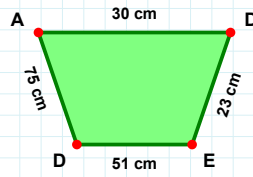
|Şİ| kaç brdir?

- ☐ 74 br  
☐ 71 br  
☐ 81 br



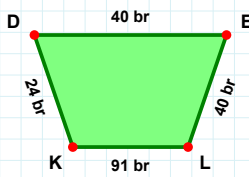
|DA| kaç cmdir?

- ☐ 75 cm  
☐ 73 cm  
☐ 80 cm



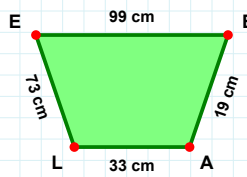
|HI| kaç brdir?

- ☐ 78 br  
☐ 68 br  
☐ 76 br



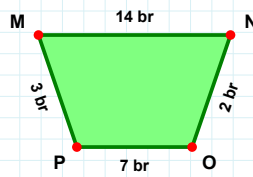
|AL| kaç cmdir?

- ☐ 33 cm  
☐ 36 cm  
☐ 34 cm



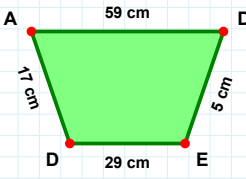
|DE| kaç brdir?

- ☐ 42 br  
☐ 50 br  
☐ 40 br



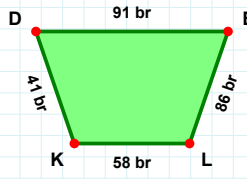
|PM| kaç brdir?

- ☐ 3 br  
☐ 13 br  
☐ 4 br

**SORU:** Aşağıdaki şekillerde istenen kenarın kaç birim veya santimetre olduğunu bulunuz.

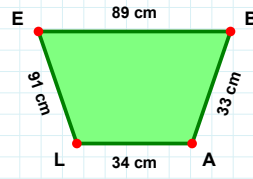
|BA| kaç cmdir?

- ☐ 34 cm  
☐ 38 cm  
☐ 33 cm



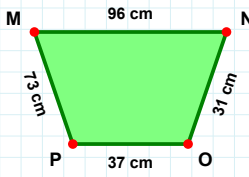
|LK| kaç brdir?

- ☐ 55 br  
☐ 58 br  
☐ 48 br



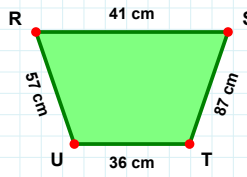
|DE| kaç cmdir?

- ☐ 4 cm  
☐ 5 cm  
☐ 15 cm



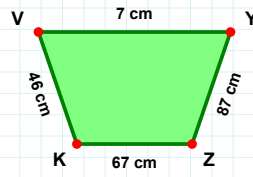
|ST| kaç cmdir?

- ☐ 92 cm  
☐ 97 cm  
☐ 87 cm



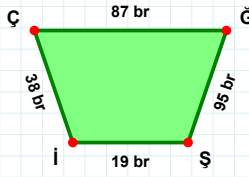
|PM| kaç cmdir?

- ☐ 72 cm  
☐ 73 cm  
☐ 78 cm



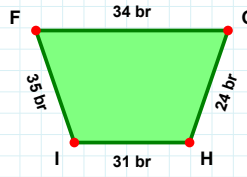
|KV| kaç cmdir?

- ☐ 46 cm  
☐ 47 cm  
☐ 43 cm



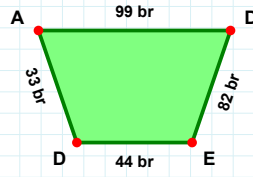
|ED| kaç brdir?

- ☐ 44 br  
☐ 45 br  
☐ 34 br



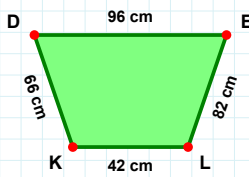
|IF| kaç brdir?

- ☐ 35 br  
☐ 45 br  
☐ 40 br



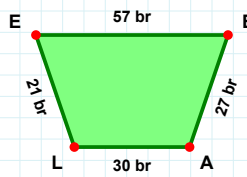
|İÇ| kaç brdir?

- ☐ 43 br  
☐ 41 br  
☐ 38 br



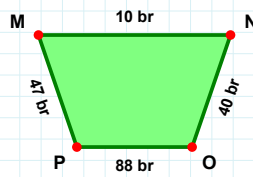
|BA| kaç brdir?

- ☐ 29 br  
☐ 25 br  
☐ 27 br



|OP| kaç brdir?

- ☐ 98 br  
☐ 88 br  
☐ 91 br



|LK| kaç cmdir?

- ☐ 32 cm  
☐ 42 cm  
☐ 44 cm

## SÜREÇ ODAKLI DEĞERLENDİRME ÖLÇEĞİ

Doğru Sayısı: ..... / 24

Öğretmen ilgili kutucuğu işaretler.

Geliştirilmeli (0-8)

İyi (9-14)

Çok İyi (15-20)

Mükemmel (21-24)

☐
☐
☐
☐

Hazırlayan: .....

Bu bölüme sınıfınızın ilgili kazanıma yönelik genel durumuna ilişkin gözlem ve izlenimlerinizi, öğrencilerinizin bu kazanımla ilgili öğrenme eksikliklerini ve bu eksikliklerin giderilmesi amacıyla yaptığınız/yapmayı planladığınız faaliyetleri not edebilirsiniz.

No	Adı - Soyadı	Toplam Puan	Değerlendirme
1			
2			
3			
4			
5			
6			
7			
8			
9			
10			
11			
12			
13			
14			
15			
16			
17			
18			
19			
20			
21			
22			
23			
24			
25			
26			
27			
28			
29			
30			
31			
32			
33			
34			
35			

Hazırlayan: .....