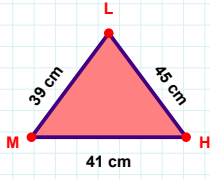
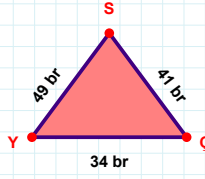


SORU: Aşağıdaki geometrik şekillerle ilgili soruları cevaplayınız.

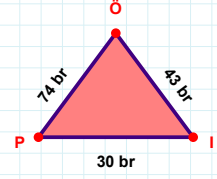
45 cm hangi kenara aittir?

- ☐ HL kenarı
☐ LM kenarı
☐ XY kenarı



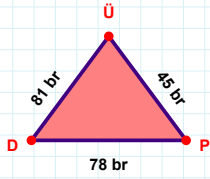
|YC| kaç brdir?

- ☐ 33 br
☐ 34 br
☐ 35 br



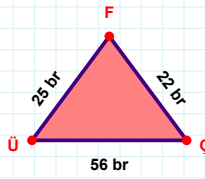
43 br hangi kenara aittir?

- ☐ IÖ kenarı
☐ ÖP kenarı
☐ XY kenarı



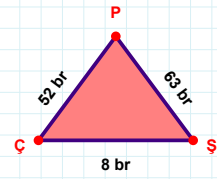
|DP| kaç brdir?

- ☐ 77 br
☐ 78 br
☐ 79 br



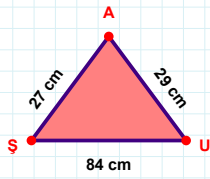
|ÇF| kaç brdir?

- ☐ 21 br
☐ 22 br
☐ 23 br



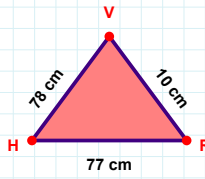
|ÇŞ| + |PÇ| =

Cevap: br



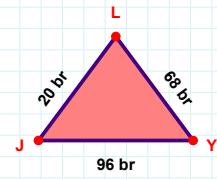
27 cm hangi kenara aittir?

Kenar:



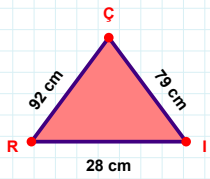
10 cm hangi kenara aittir?

Kenar:



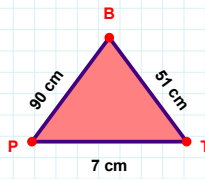
68 br hangi kenara aittir?

- ☐ JY kenarı
☐ XY kenarı
☐ YL kenarı



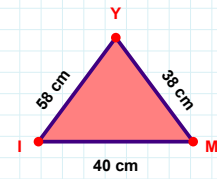
79 cm hangi kenara aittir?

- ☐ ÇR kenarı
☐ RI kenarı
☐ XY kenarı



|BP| + |PT| =

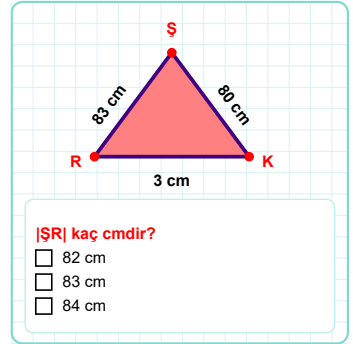
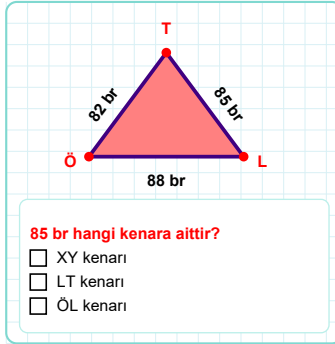
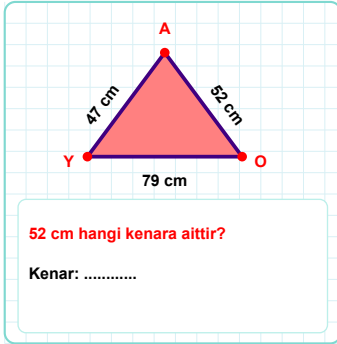
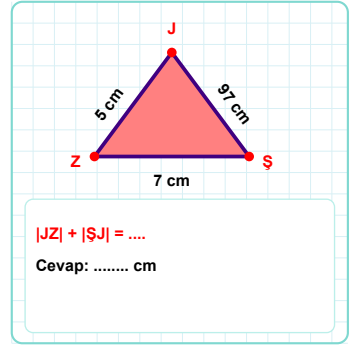
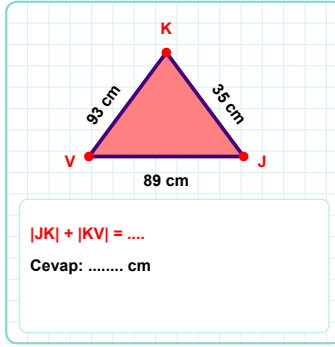
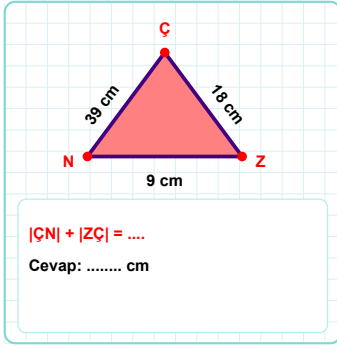
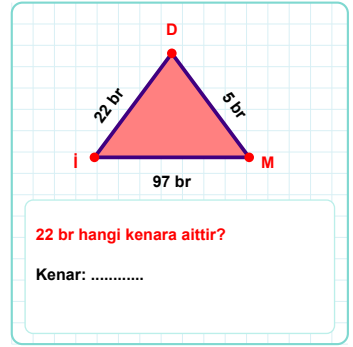
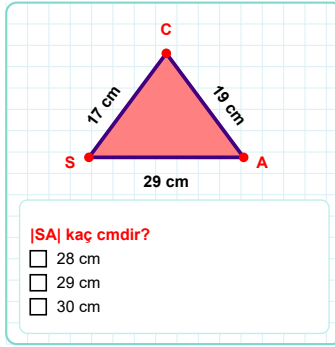
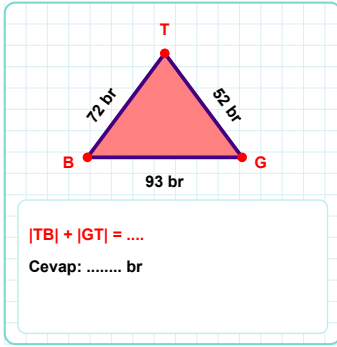
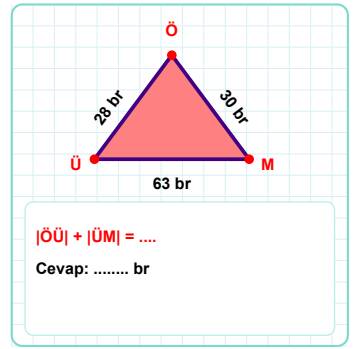
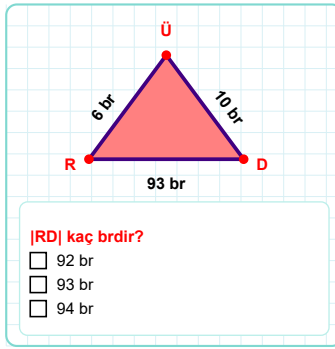
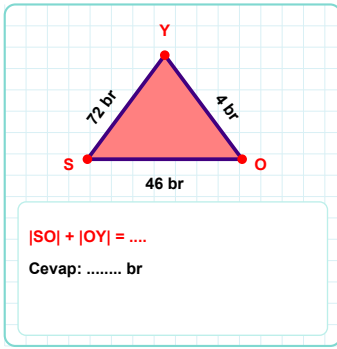
Cevap: cm



40 cm hangi kenara aittir?

Kenar:

SORU: Aşağıdaki geometrik şekillerle ilgili soruları cevaplayınız.



SÜREÇ ODAKLI DEĞERLENDİRME ÖLÇEĞİ

Doğru Sayısı: / 24

Öğretmen ilgili kutucuğu işaretler.

Geliştirilmeli (0-8)

İyi (9-14)

Çok İyi (15-20)

Mükemmel (21-24)

☐☐☐☐

Hazırlayan:

Bu bölüme sınıfınızın ilgili kazanıma yönelik genel durumuna ilişkin gözlem ve izlenimlerinizi, öğrencilerinizin bu kazanımla ilgili öğrenme eksikliklerini ve bu eksikliklerin giderilmesi amacıyla yaptığınız/yapmayı planladığınız faaliyetleri not edebilirsiniz.

No	Adı - Soyadı	Toplam Puan	Değerlendirme
1			
2			
3			
4			
5			
6			
7			
8			
9			
10			
11			
12			
13			
14			
15			
16			
17			
18			
19			
20			
21			
22			
23			
24			
25			
26			
27			
28			
29			
30			
31			
32			
33			
34			
35			

Hazırlayan: