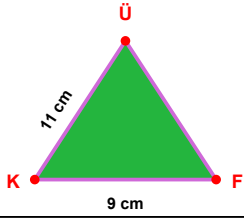
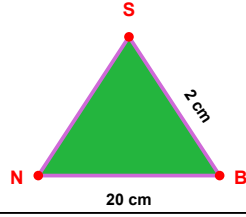


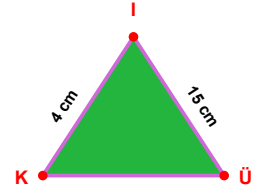
SORU: Aşağıdaki şekillerde verilen, kenar uzunlukları farklarını bulunuz.



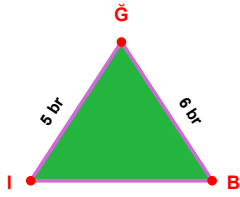
$$|ÜK| - |KF| = \dots\dots\dots$$



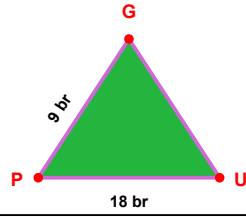
$$|NB| - |BS| = \dots\dots\dots$$



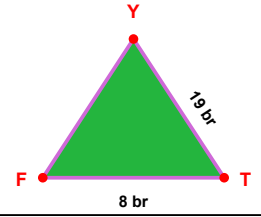
$$|İÜ| - |İK| = \dots\dots\dots$$



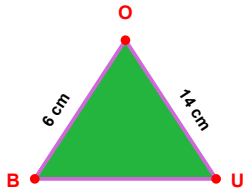
$$|BĞ| - |Ğİ| = \dots\dots\dots$$



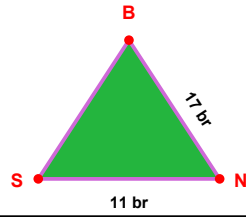
$$|PU| - |GP| = \dots\dots\dots$$



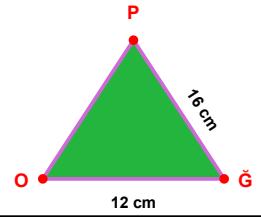
$$|TY| - |FT| = \dots\dots\dots$$



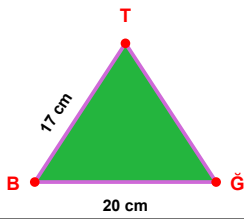
$$|UO| - |OB| = \dots\dots\dots$$



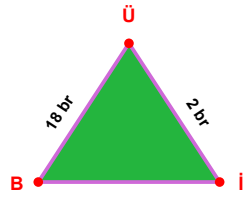
$$|NB| - |SN| = \dots\dots\dots$$



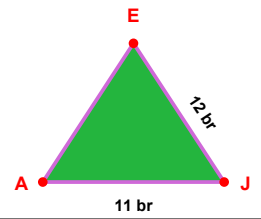
$$|GP| - |OG| = \dots\dots\dots$$



$$|BĞ| - |TB| = \dots\dots\dots$$

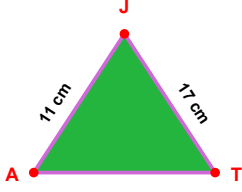


$$|ÜB| - |İÜ| = \dots\dots\dots$$

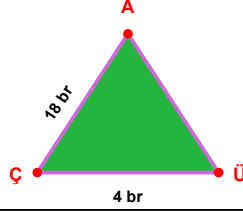


$$|JE| - |AJ| = \dots\dots\dots$$

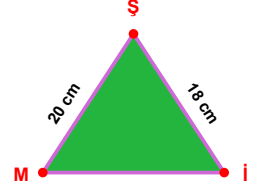
SORU: Aşağıdaki şekillerde verilen, kenar uzunlukları farklarını bulunuz.



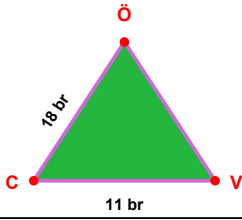
$$|JT| - |JA| = \dots\dots$$



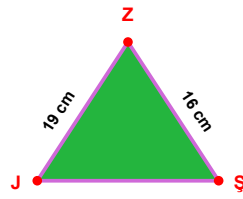
$$|AÇ| - |ÇÜ| = \dots\dots$$



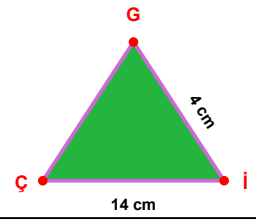
$$|ŞM| - |Şİ| = \dots\dots$$



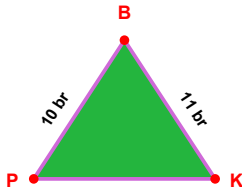
$$|ÖC| - |CV| = \dots\dots$$



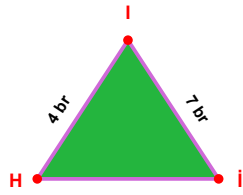
$$|ZJ| - |ZŞ| = \dots\dots$$



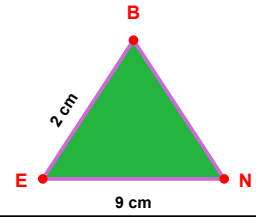
$$|Çİ| - |Gİ| = \dots\dots$$



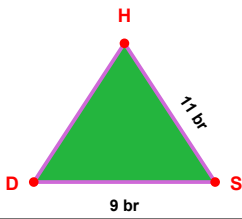
$$|KB| - |BP| = \dots\dots$$



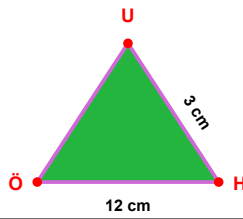
$$|İİ| - |İH| = \dots\dots$$



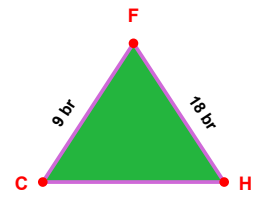
$$|EN| - |BE| = \dots\dots$$



$$|SH| - |DS| = \dots\dots$$



$$|ÖH| - |HU| = \dots\dots$$



$$|HF| - |FC| = \dots\dots$$

SÜREÇ ODAKLI DEĞERLENDİRME ÖLÇEĞİ

Doğru Sayısı: / 24

Öğretmen ilgili kutucuğu işaretler.

Geliştirilmeli (0-8)

İyi (9-14)

Çok İyi (15-20)

Mükemmel (21-24)

☐
☐
☐
☐

Hazırlayan: Şeyhmus Öğretmen

Bu bölüme sınıfınızın ilgili kazanıma yönelik genel durumuna ilişkin gözlem ve izlenimlerinizi, öğrencilerinizin bu kazanımla ilgili öğrenme eksikliklerini ve bu eksikliklerin giderilmesi amacıyla yaptığınız/yapmayı planladığınız faaliyetleri not edebilirsiniz.

No	Adı - Soyadı	Toplam Puan	Değerlendirme
1			
2			
3			
4			
5			
6			
7			
8			
9			
10			
11			
12			
13			
14			
15			
16			
17			
18			
19			
20			
21			
22			
23			
24			
25			
26			
27			
28			
29			
30			
31			
32			
33			
34			
35			

Hazırlayan: Şeyhmus Öğretmen