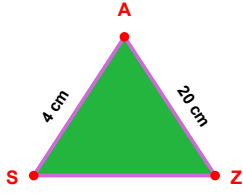
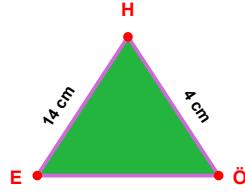


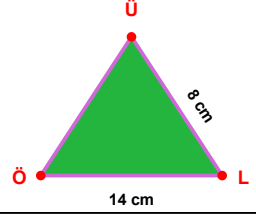
**SORU:** Aşağıdaki şekillerde verilen, kenar uzunlukları farklarını bulunuz.



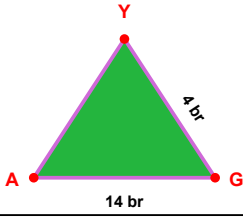
$$|ZA| - |AS| = \dots\dots\dots$$



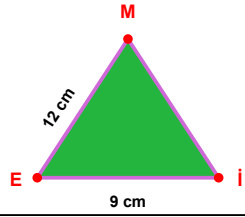
$$|HE| - |ÖH| = \dots\dots\dots$$



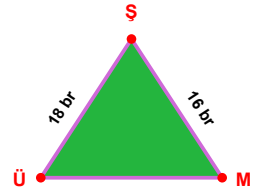
$$|ÖL| - |LÜ| = \dots\dots\dots$$



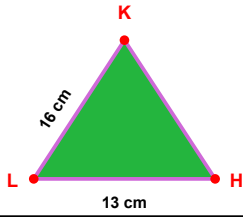
$$|AG| - |GY| = \dots\dots\dots$$



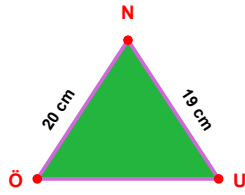
$$|ME| - |Eİ| = \dots\dots\dots$$



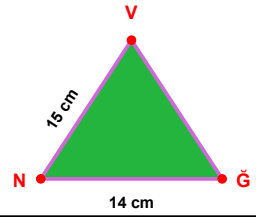
$$|ŞÜ| - |MS| = \dots\dots\dots$$



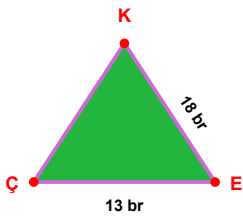
$$|KL| - |LH| = \dots\dots\dots$$



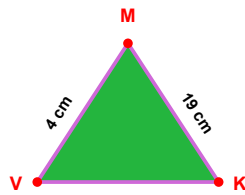
$$|NÖ| - |UN| = \dots\dots\dots$$



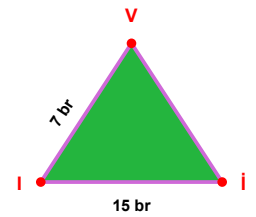
$$|VN| - |NG| = \dots\dots\dots$$



$$|EK| - |ÇE| = \dots\dots\dots$$

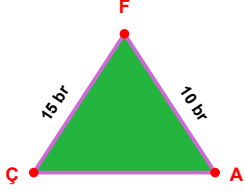


$$|KM| - |MV| = \dots\dots\dots$$

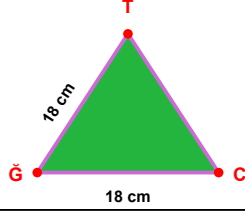


$$|İİ| - |Vİ| = \dots\dots\dots$$

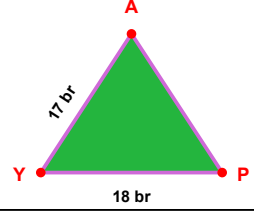
**SORU:** Aşağıdaki şekillerde verilen, kenar uzunlukları farklarını bulunuz.



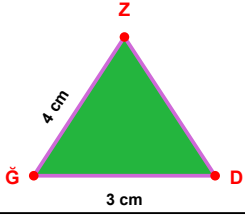
$$|FC| - |AF| = \dots\dots\dots$$



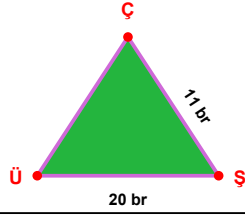
$$|TG| - |GC| = \dots\dots\dots$$



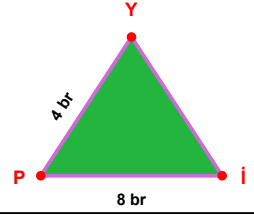
$$|YP| - |AY| = \dots\dots\dots$$



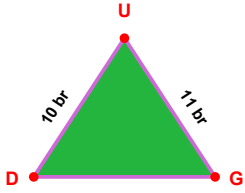
$$|ZG| - |GD| = \dots\dots\dots$$



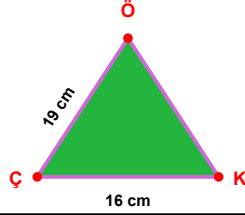
$$|ÜŞ| - |ŞÇ| = \dots\dots\dots$$



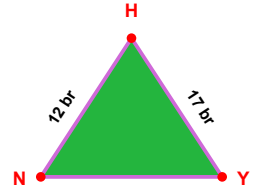
$$|PI| - |YP| = \dots\dots\dots$$



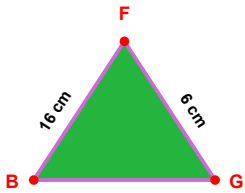
$$|GU| - |UD| = \dots\dots\dots$$



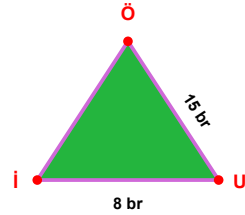
$$|ÖÇ| - |ÇK| = \dots\dots\dots$$



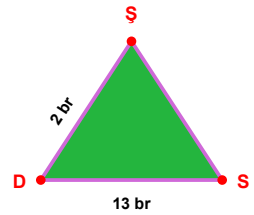
$$|YH| - |HN| = \dots\dots\dots$$



$$|FB| - |GF| = \dots\dots\dots$$



$$|ÜÖ| - |İU| = \dots\dots\dots$$



$$|DS| - |ŞD| = \dots\dots\dots$$

SÜREÇ ODAKLI DEĞERLENDİRME ÖLÇEĞİ

Doğru Sayısı: ..... / 24

Öğretmen ilgili kutucuğu işaretler.

Geliştirilmeli (0-8)

İyi (9-14)

Çok İyi (15-20)

Mükemmel (21-24)

☐☐☐☐

Hazırlayan: Şeyhmus Öğretmen

Bu bölüme sınıfınızın ilgili kazanıma yönelik genel durumuna ilişkin gözlem ve izlenimlerinizi, öğrencilerinizin bu kazanımla ilgili öğrenme eksikliklerini ve bu eksikliklerin giderilmesi amacıyla yaptığınız/yapmayı planladığınız faaliyetleri not edebilirsiniz.

No	Adı - Soyadı	Toplam Puan	Değerlendirme
1			
2			
3			
4			
5			
6			
7			
8			
9			
10			
11			
12			
13			
14			
15			
16			
17			
18			
19			
20			
21			
22			
23			
24			
25			
26			
27			
28			
29			
30			
31			
32			
33			
34			
35			

Hazırlayan: Şeyhmus Öğretmen