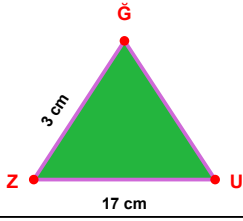
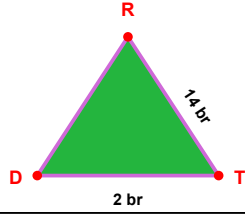


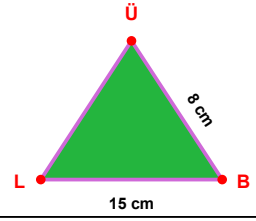
SORU: Aşağıdaki şekillerde verilen, kenar uzunlukları farklarını bulunuz.



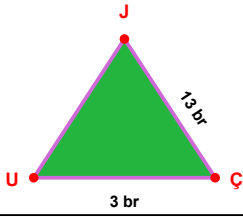
$$|ZU| - |GZ| = \dots\dots\dots$$



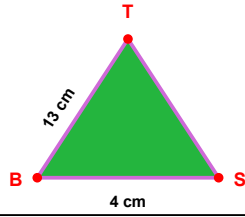
$$|TR| - |DT| = \dots\dots\dots$$



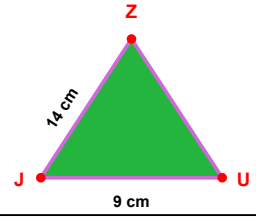
$$|LB| - |BU| = \dots\dots\dots$$



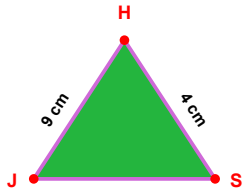
$$|CJ| - |UC| = \dots\dots\dots$$



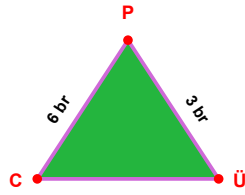
$$|TB| - |BS| = \dots\dots\dots$$



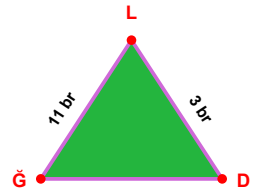
$$|ZJ| - |JU| = \dots\dots\dots$$



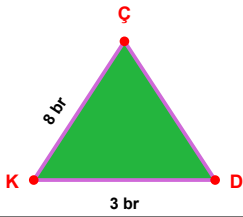
$$|HJ| - |SH| = \dots\dots\dots$$



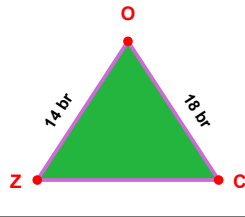
$$|PC| - |ÜP| = \dots\dots\dots$$



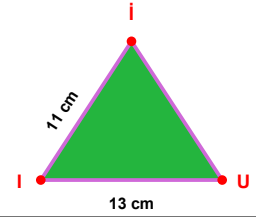
$$|LG| - |DL| = \dots\dots\dots$$



$$|CK| - |KD| = \dots\dots\dots$$

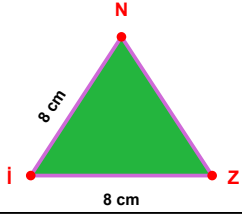


$$|CO| - |OZ| = \dots\dots\dots$$

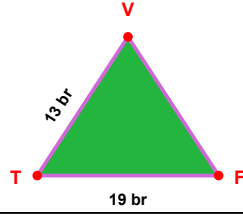


$$|IU| - |ÜI| = \dots\dots\dots$$

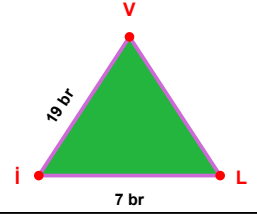
SORU: Aşağıdaki şekillerde verilen, kenar uzunlukları farklarını bulunuz.



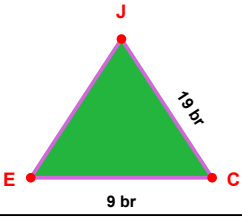
$$|NI| - |IZ| = \dots\dots\dots$$



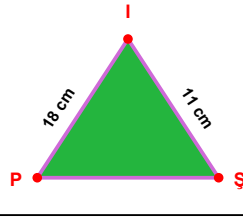
$$|TF| - |VT| = \dots\dots\dots$$



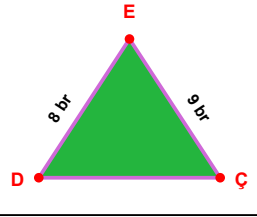
$$|VI| - |IL| = \dots\dots\dots$$



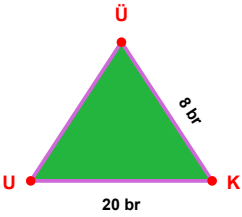
$$|CJ| - |EC| = \dots\dots\dots$$



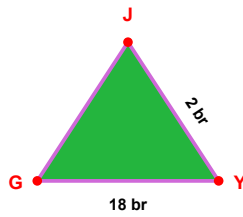
$$|IP| - |SI| = \dots\dots\dots$$



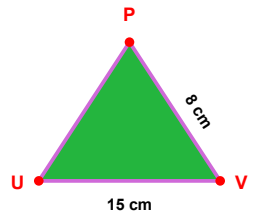
$$|CE| - |ED| = \dots\dots\dots$$



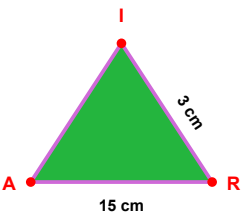
$$|UK| - |KÜ| = \dots\dots\dots$$



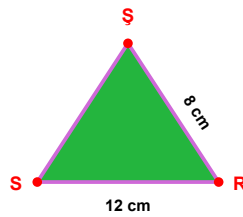
$$|GY| - |YJ| = \dots\dots\dots$$



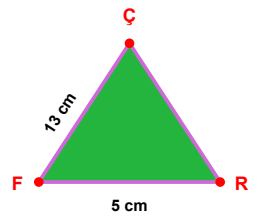
$$|UV| - |VP| = \dots\dots\dots$$



$$|AR| - |RI| = \dots\dots\dots$$



$$|SR| - |RS| = \dots\dots\dots$$



$$|ÇF| - |FR| = \dots\dots\dots$$

SÜREÇ ODAKLI DEĞERLENDİRME ÖLÇEĞİ

Doğru Sayısı: / 24

Öğretmen ilgili kutucuğu işaretler.

Geliştirilmeli (0-8)

İyi (9-14)

Çok İyi (15-20)

Mükemmel (21-24)

☐
☐
☐
☐

Hazırlayan: Şeyhmus Öğretmen

Bu bölüme sınıfınızın ilgili kazanıma yönelik genel durumuna ilişkin gözlem ve izlenimlerinizi, öğrencilerinizin bu kazanımla ilgili öğrenme eksikliklerini ve bu eksikliklerin giderilmesi amacıyla yaptığınız/yapmayı planladığınız faaliyetleri not edebilirsiniz.

No	Adı - Soyadı	Toplam Puan	Değerlendirme
1			
2			
3			
4			
5			
6			
7			
8			
9			
10			
11			
12			
13			
14			
15			
16			
17			
18			
19			
20			
21			
22			
23			
24			
25			
26			
27			
28			
29			
30			
31			
32			
33			
34			
35			

Hazırlayan: Şeyhmus Öğretmen