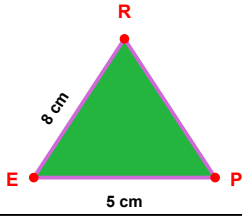
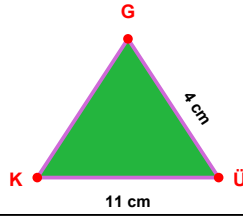


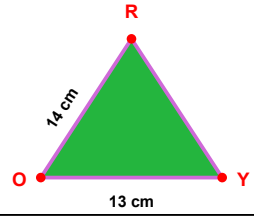
SORU: Aşağıdaki şekillerde verilen, kenar uzunlukları farklarını bulunuz.



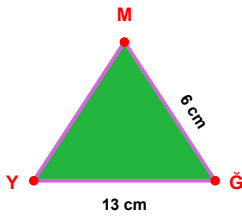
$$|RE| - |EP| = \dots\dots\dots$$



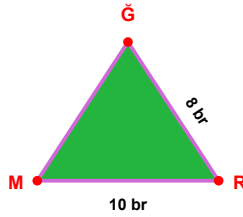
$$|KÜ| - |ÜG| = \dots\dots\dots$$



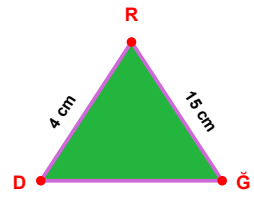
$$|RO| - |OY| = \dots\dots\dots$$



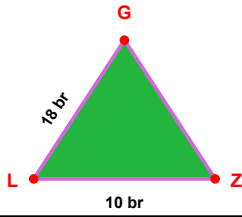
$$|YG| - |GM| = \dots\dots\dots$$



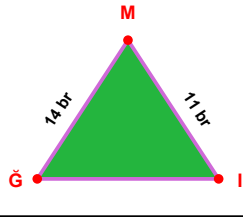
$$|MR| - |RG| = \dots\dots\dots$$



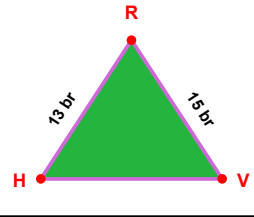
$$|GR| - |RD| = \dots\dots\dots$$



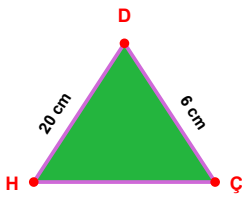
$$|GL| - |LZ| = \dots\dots\dots$$



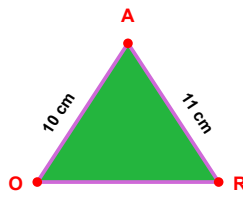
$$|MG| - |MI| = \dots\dots\dots$$



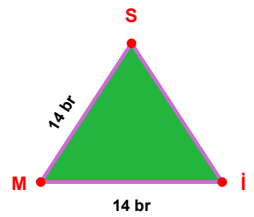
$$|VR| - |RH| = \dots\dots\dots$$



$$|DH| - |ÇD| = \dots\dots\dots$$

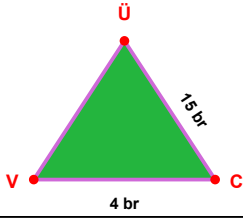


$$|RA| - |AO| = \dots\dots\dots$$

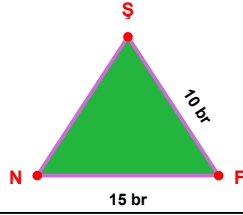


$$|SM| - |Mİ| = \dots\dots\dots$$

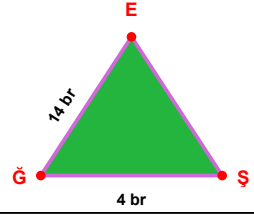
SORU: Aşağıdaki şekillerde verilen, kenar uzunlukları farklarını bulunuz.



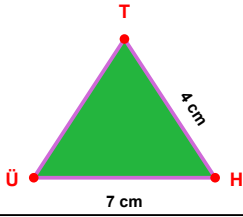
$$|CÜ| - |VC| = \dots\dots\dots$$



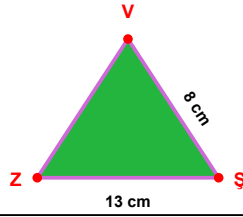
$$|NF| - |ŞF| = \dots\dots\dots$$



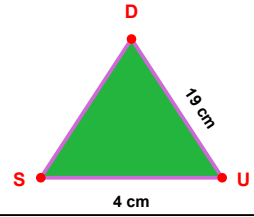
$$|EĞ| - |ŞŞ| = \dots\dots\dots$$



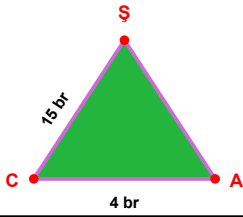
$$|ÜH| - |HT| = \dots\dots\dots$$



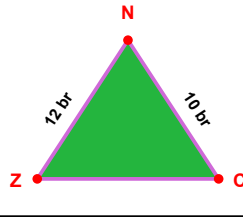
$$|ZŞ| - |ŞV| = \dots\dots\dots$$



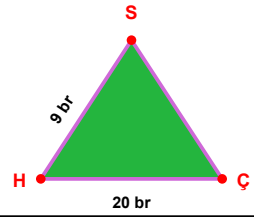
$$|UD| - |ŞU| = \dots\dots\dots$$



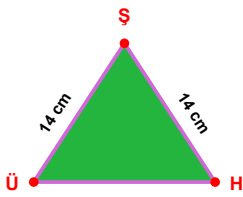
$$|ŞC| - |CA| = \dots\dots\dots$$



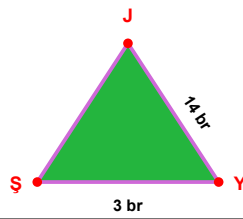
$$|NZ| - |CN| = \dots\dots\dots$$



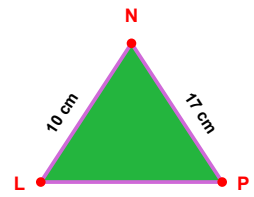
$$|HÇ| - |SH| = \dots\dots\dots$$



$$|ŞÜ| - |ŞH| = \dots\dots\dots$$



$$|YJ| - |ŞY| = \dots\dots\dots$$



$$|PN| - |NL| = \dots\dots\dots$$

SÜREÇ ODAKLI DEĞERLENDİRME ÖLÇEĞİ

Doğru Sayısı: / 24

Öğretmen ilgili kutucuğu işaretler.

Geliştirilmeli (0-8)

İyi (9-14)

Çok İyi (15-20)

Mükemmel (21-24)

☐
☐
☐
☐

Hazırlayan: Şeyhmus Öğretmen

Bu bölüme sınıfınızın ilgili kazanıma yönelik genel durumuna ilişkin gözlem ve izlenimlerinizi, öğrencilerinizin bu kazanımla ilgili öğrenme eksikliklerini ve bu eksikliklerin giderilmesi amacıyla yaptığınız/yapmayı planladığınız faaliyetleri not edebilirsiniz.

No	Adı - Soyadı	Toplam Puan	Değerlendirme
1			
2			
3			
4			
5			
6			
7			
8			
9			
10			
11			
12			
13			
14			
15			
16			
17			
18			
19			
20			
21			
22			
23			
24			
25			
26			
27			
28			
29			
30			
31			
32			
33			
34			
35			

Hazırlayan: Şeyhmus Öğretmen