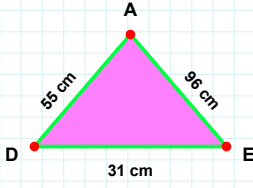
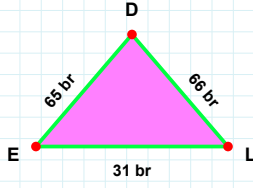


**SORU:** Aşağıdaki şekillerde istenen kenarın kaç birim veya santimetre olduğunu bulunuz.



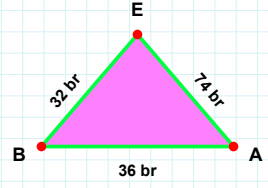
|LD| kaç brdir?

- ☐ 76 br  
☐ 65 br  
☐ 66 br



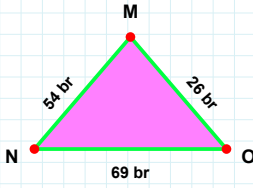
|AD| kaç cmdir?

- ☐ 45 cm  
☐ 52 cm  
☐ 55 cm



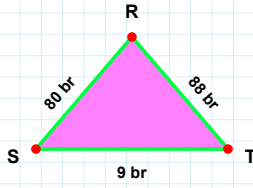
|EB| kaç brdir?

- ☐ 22 br  
☐ 32 br  
☐ 31 br



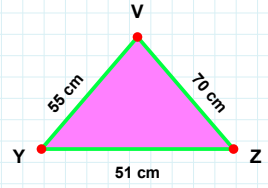
|ST| kaç brdir?

- ☐ 4 br  
☐ 9 br  
☐ 10 br



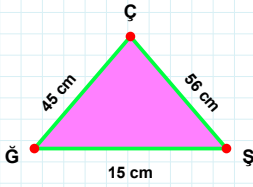
|VY| kaç cmdir?

- ☐ 57 cm  
☐ 45 cm  
☐ 55 cm



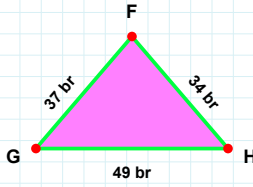
|NO| kaç brdir?

- ☐ 69 br  
☐ 74 br  
☐ 68 br



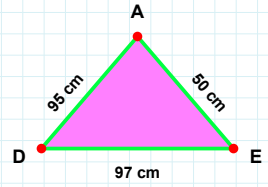
|EA| kaç cmdir?

- ☐ 48 cm  
☐ 50 cm  
☐ 55 cm



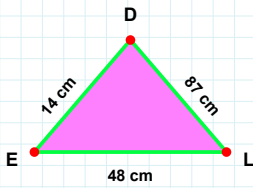
|GH| kaç brdir?

- ☐ 49 br  
☐ 51 br  
☐ 46 br



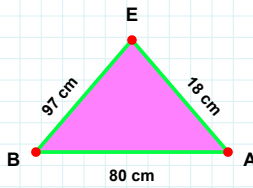
|ÇĞ| kaç cmdir?

- ☐ 46 cm  
☐ 44 cm  
☐ 45 cm



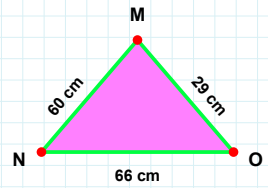
|EB| kaç cmdir?

- ☐ 97 cm  
☐ 92 cm  
☐ 98 cm



|NO| kaç cmdir?

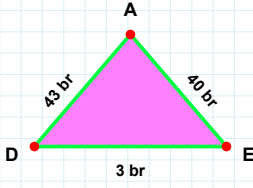
- ☐ 66 cm  
☐ 67 cm  
☐ 63 cm



|DE| kaç cmdir?

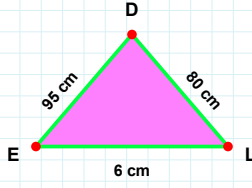
- ☐ 16 cm  
☐ 14 cm  
☐ 13 cm

**SORU:** Aşağıdaki şekillerde istenen kenarın kaç birim veya santimetre olduğunu bulunuz.



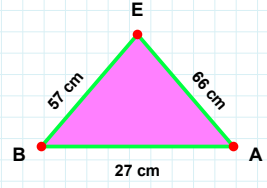
|AD| kaç brdir?

- ☐ 40 br  
☐ 43 br  
☐ 33 br



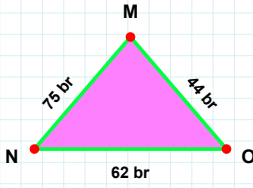
|EL| kaç cmdir?

- ☐ 9 cm  
☐ 6 cm  
☐ 8 cm



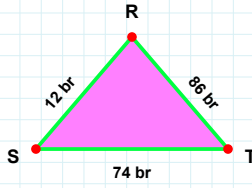
|AE| kaç cmdir?

- ☐ 67 cm  
☐ 66 cm  
☐ 61 cm



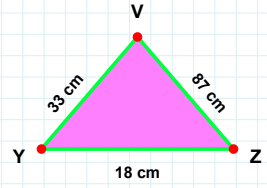
|YZ| kaç cmdir?

- ☐ 18 cm  
☐ 21 cm  
☐ 17 cm



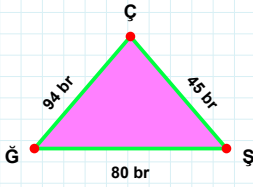
|ST| kaç brdir?

- ☐ 73 br  
☐ 74 br  
☐ 76 br



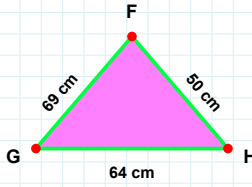
|OM| kaç brdir?

- ☐ 47 br  
☐ 44 br  
☐ 43 br



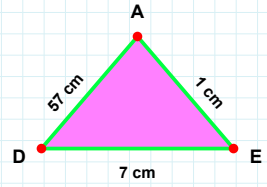
|ÇŞ| kaç brdir?

- ☐ 94 br  
☐ 93 br  
☐ 99 br



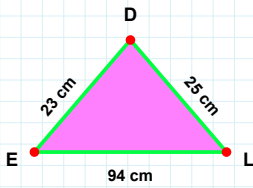
|FG| kaç cmdir?

- ☐ 71 cm  
☐ 69 cm  
☐ 64 cm



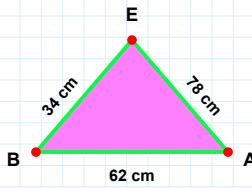
|AD| kaç cmdir?

- ☐ 57 cm  
☐ 54 cm  
☐ 67 cm



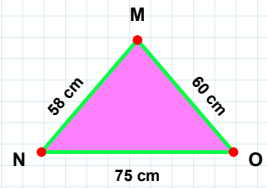
|AE| kaç cmdir?

- ☐ 88 cm  
☐ 78 cm  
☐ 75 cm



|DE| kaç cmdir?

- ☐ 25 cm  
☐ 23 cm  
☐ 24 cm



|MN| kaç cmdir?

- ☐ 56 cm  
☐ 58 cm  
☐ 57 cm

SÜREÇ ODAKLI DEĞERLENDİRME ÖLÇEĞİ

Doğru Sayısı: ..... / 24

Öğretmen ilgili kutucuğu işaretler.

Geliştirilmeli (0-8)

İyi (9-14)

Çok İyi (15-20)

Mükemmel (21-24)

☐☐☐☐

Hazırlayan: .....

Bu bölüme sınıfınızın ilgili kazanıma yönelik genel durumuna ilişkin gözlem ve izlenimlerinizi, öğrencilerinizin bu kazanımla ilgili öğrenme eksikliklerini ve bu eksikliklerin giderilmesi amacıyla yaptığınız/yapmayı planladığınız faaliyetleri not edebilirsiniz.

No	Adı - Soyadı	Toplam Puan	Değerlendirme
1			
2			
3			
4			
5			
6			
7			
8			
9			
10			
11			
12			
13			
14			
15			
16			
17			
18			
19			
20			
21			
22			
23			
24			
25			
26			
27			
28			
29			
30			
31			
32			
33			
34			
35			

Hazırlayan: .....