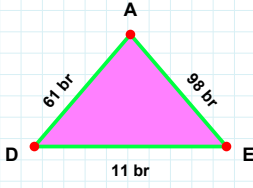
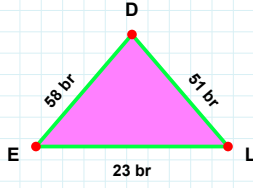


**SORU:** Aşağıdaki şekillerde istenen kenarın kaç birim veya santimetre olduğunu bulunuz.



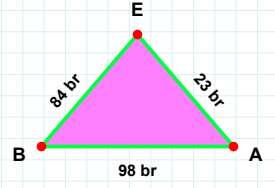
|LD| kaç brdir?

- ☐ 51 br  
☐ 52 br  
☐ 46 br



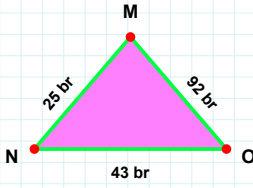
|DE| kaç brdir?

- ☐ 16 br  
☐ 11 br  
☐ 21 br



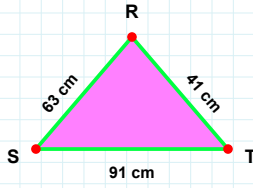
|BA| kaç brdir?

- ☐ 98 br  
☐ 93 br  
☐ 97 br



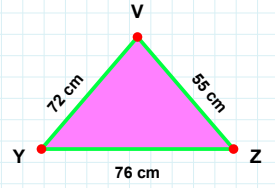
|MN| kaç brdir?

- ☐ 25 br  
☐ 28 br  
☐ 22 br



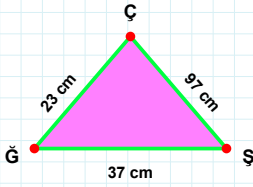
|VY| kaç cmdir?

- ☐ 72 cm  
☐ 62 cm  
☐ 70 cm



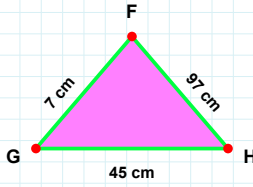
|RS| kaç cmdir?

- ☐ 64 cm  
☐ 63 cm  
☐ 60 cm



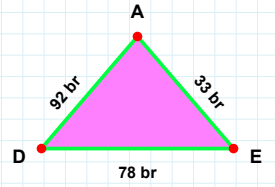
|EA| kaç brdir?

- ☐ 33 br  
☐ 38 br  
☐ 43 br



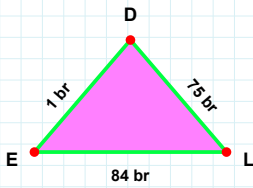
|ÇĞ| kaç cmdir?

- ☐ 23 cm  
☐ 25 cm  
☐ 20 cm



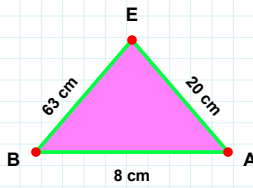
|HF| kaç cmdir?

- ☐ 97 cm  
☐ 99 cm  
☐ 95 cm



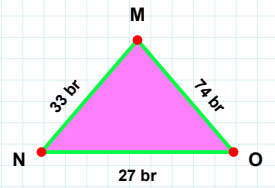
|NO| kaç brdir?

- ☐ 27 br  
☐ 24 br  
☐ 28 br



|EL| kaç brdir?

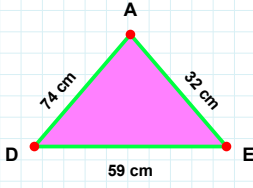
- ☐ 83 br  
☐ 86 br  
☐ 84 br



|EB| kaç cmdir?

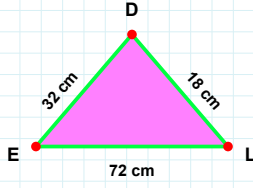
- ☐ 64 cm  
☐ 60 cm  
☐ 63 cm

**SORU:** Aşağıdaki şekillerde istenen kenarın kaç birim veya santimetre olduğunu bulunuz.



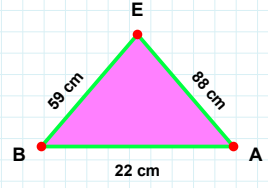
|EB| kaç cmdir?

- ☐ 58 cm  
☐ 59 cm  
☐ 69 cm



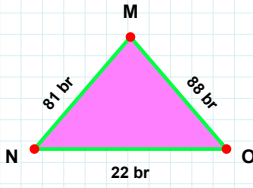
|DE| kaç cmdir?

- ☐ 27 cm  
☐ 31 cm  
☐ 32 cm



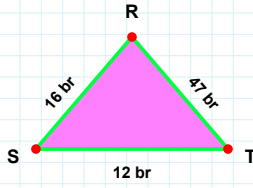
|AD| kaç cmdir?

- ☐ 75 cm  
☐ 74 cm  
☐ 71 cm



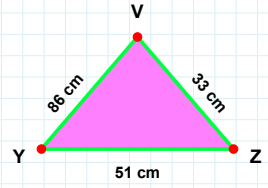
|VY| kaç cmdir?

- ☐ 83 cm  
☐ 86 cm  
☐ 88 cm



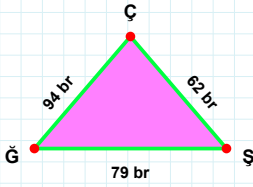
|RS| kaç brdir?

- ☐ 6 br  
☐ 19 br  
☐ 16 br



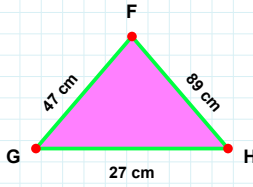
|MN| kaç brdir?

- ☐ 79 br  
☐ 81 br  
☐ 91 br



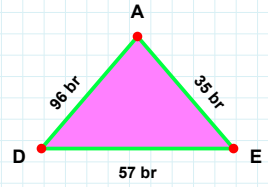
|ŞÇ| kaç brdir?

- ☐ 60 br  
☐ 62 br  
☐ 67 br



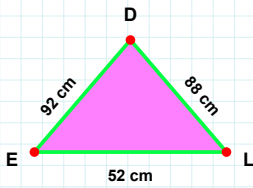
|EA| kaç brdir?

- ☐ 40 br  
☐ 38 br  
☐ 35 br



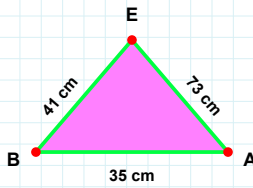
|GH| kaç cmdir?

- ☐ 25 cm  
☐ 27 cm  
☐ 32 cm



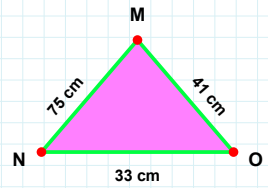
|DE| kaç cmdir?

- ☐ 87 cm  
☐ 89 cm  
☐ 92 cm



|MN| kaç cmdir?

- ☐ 85 cm  
☐ 70 cm  
☐ 75 cm



|AE| kaç cmdir?

- ☐ 83 cm  
☐ 73 cm  
☐ 75 cm

SÜREÇ ODAKLI DEĞERLENDİRME ÖLÇEĞİ

Doğru Sayısı: ..... / 24

Öğretmen ilgili kutucuğu işaretler.

Geliştirilmeli (0-8)

İyi (9-14)

Çok İyi (15-20)

Mükemmel (21-24)



Hazırlayan: .....

Bu bölüme sınıfınızın ilgili kazanıma yönelik genel durumuna ilişkin gözlem ve izlenimlerinizi, öğrencilerinizin bu kazanımla ilgili öğrenme eksikliklerini ve bu eksikliklerin giderilmesi amacıyla yaptığınız/yapmayı planladığınız faaliyetleri not edebilirsiniz.

No	Adı - Soyadı	Toplam Puan	Değerlendirme
1			
2			
3			
4			
5			
6			
7			
8			
9			
10			
11			
12			
13			
14			
15			
16			
17			
18			
19			
20			
21			
22			
23			
24			
25			
26			
27			
28			
29			
30			
31			
32			
33			
34			
35			

Hazırlayan: .....