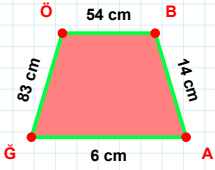
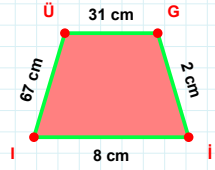


SORU: Aşağıdaki geometrik şekillerle ilgili soruları cevaplayınız.



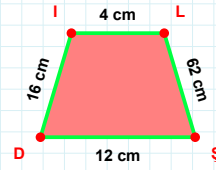
83 cm hangi kenara aittir?

☐ ÖB kenarı
☐ AĞ kenarı
☐ ÖA kenarı



|ÜG| kaç cmdir?

☐ 30 cm
☐ 31 cm
☐ 32 cm



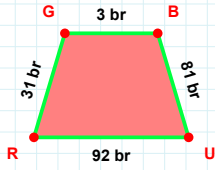
16 cm hangi kenara aittir?

Kenar:



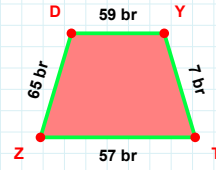
59 cm hangi kenara aittir?

Kenar:



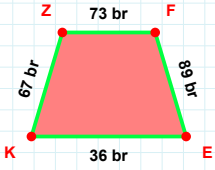
|GB| kaç brdir?

☐ 2 br
☐ 3 br
☐ 4 br



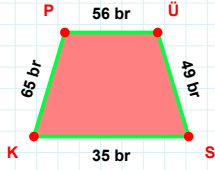
65 br hangi kenara aittir?

☐ ZD kenarı
☐ YT kenarı
☐ TD kenarı



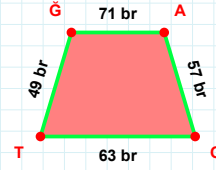
|KZ| kaç brdir?

☐ 66 br
☐ 67 br
☐ 68 br



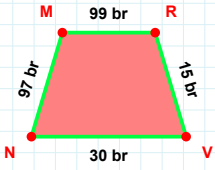
65 br hangi kenara aittir?

☐ KP kenarı
☐ PÜ kenarı
☐ ÜK kenarı



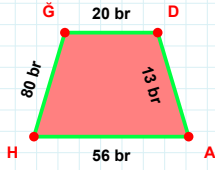
|AO| kaç brdir?

☐ 56 br
☐ 57 br
☐ 58 br



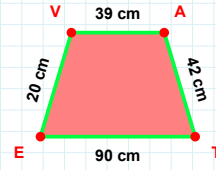
|NM| + |MR| =

Cevap: br



80 br hangi kenara aittir?

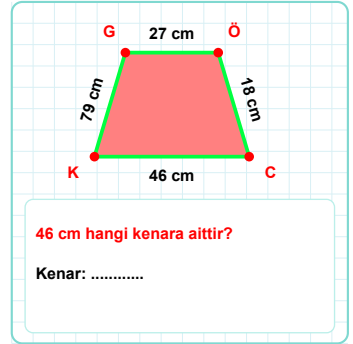
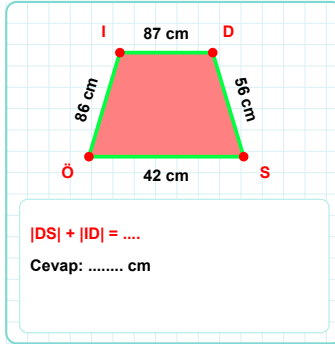
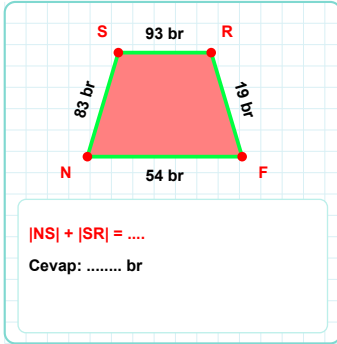
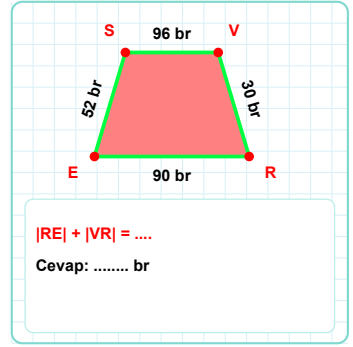
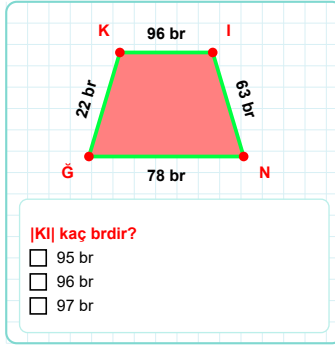
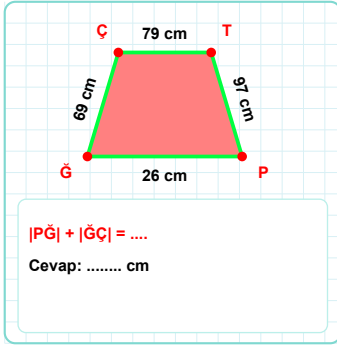
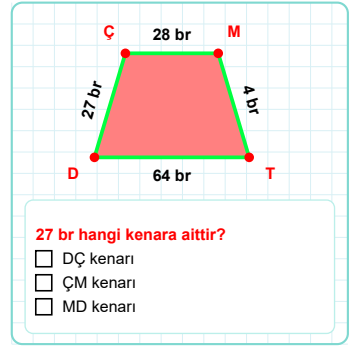
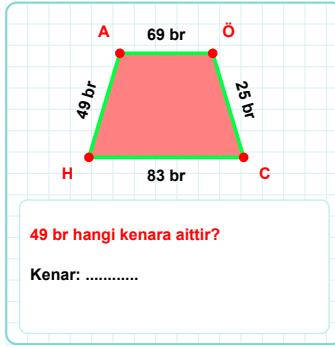
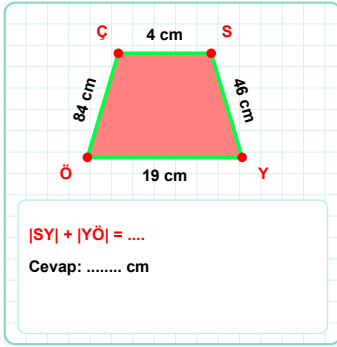
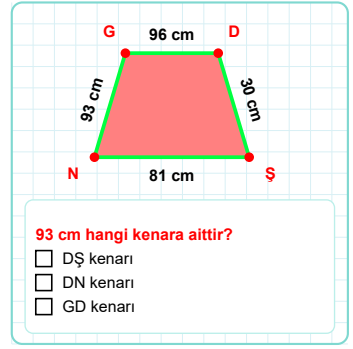
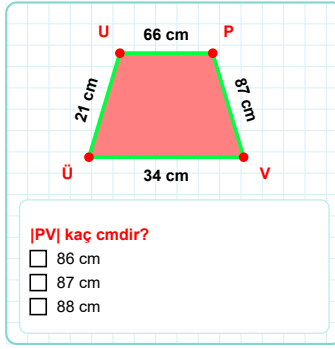
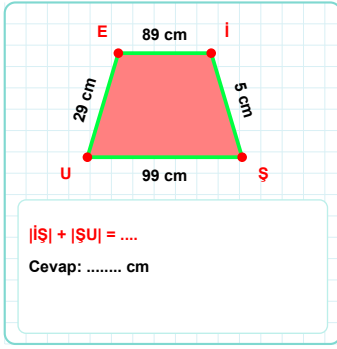
☐ HĞ kenarı
☐ AĞ kenarı
☐ ĞD kenarı



|EV| kaç cmdir?

☐ 19 cm
☐ 20 cm
☐ 21 cm

SORU: Aşağıdaki geometrik şekillerle ilgili soruları cevaplayınız.



SÜREÇ ODAKLI DEĞERLENDİRME ÖLÇEĞİ

Doğru Sayısı: / 24

Öğretmen ilgili kutucuğu işaretler.

Geliştirilmeli (0-8)

İyi (9-14)

Çok İyi (15-20)

Mükemmel (21-24)

☐☐☐☐

Hazırlayan:

Bu bölüme sınıfınızın ilgili kazanıma yönelik genel durumuna ilişkin gözlem ve izlenimlerinizi, öğrencilerinizin bu kazanımla ilgili öğrenme eksikliklerini ve bu eksikliklerin giderilmesi amacıyla yaptığınız/yapmayı planladığınız faaliyetleri not edebilirsiniz.

No	Adı - Soyadı	Toplam Puan	Değerlendirme
1			
2			
3			
4			
5			
6			
7			
8			
9			
10			
11			
12			
13			
14			
15			
16			
17			
18			
19			
20			
21			
22			
23			
24			
25			
26			
27			
28			
29			
30			
31			
32			
33			
34			
35			

Hazırlayan: