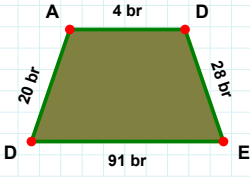
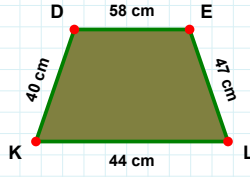


**SORU:** Aşağıdaki şekillerde istenen kenarın kaç birim veya santimetre olduğunu bulunuz.

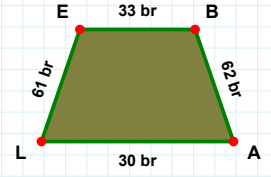
|KD| kaç cmdir?

- ☐ 41 cm  
☐ 39 cm  
☐ 40 cm



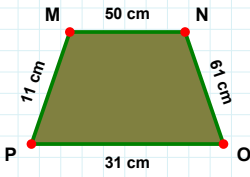
|AL| kaç brdir?

- ☐ 29 br  
☐ 30 br  
☐ 35 br



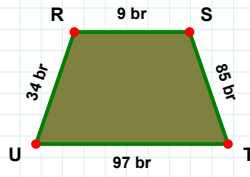
|DE| kaç brdir?

- ☐ 28 br  
☐ 23 br  
☐ 30 br



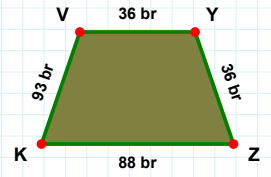
|NO| kaç cmdir?

- ☐ 61 cm  
☐ 60 cm  
☐ 59 cm



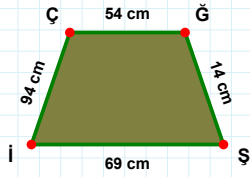
|KV| kaç brdir?

- ☐ 96 br  
☐ 93 br  
☐ 83 br



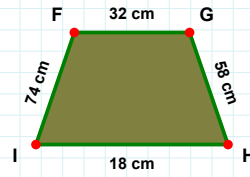
|RS| kaç brdir?

- ☐ 8 br  
☐ 9 br  
☐ 4 br



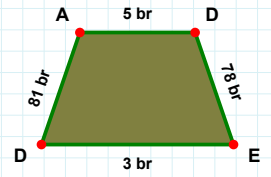
|FG| kaç cmdir?

- ☐ 37 cm  
☐ 33 cm  
☐ 32 cm



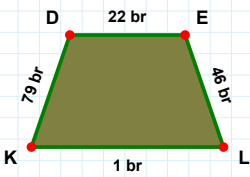
|DA| kaç brdir?

- ☐ 79 br  
☐ 81 br  
☐ 86 br



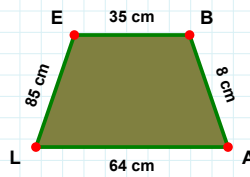
|Şİ| kaç cmdir?

- ☐ 79 cm  
☐ 69 cm  
☐ 70 cm



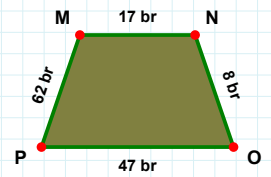
|PM| kaç brdir?

- ☐ 65 br  
☐ 62 br  
☐ 60 br



|DE| kaç brdir?

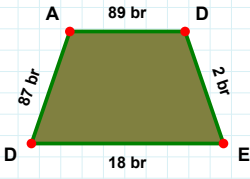
- ☐ 22 br  
☐ 32 br  
☐ 24 br



|AL| kaç cmdir?

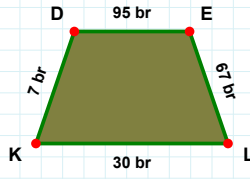
- ☐ 61 cm  
☐ 64 cm  
☐ 65 cm

**SORU:** Aşağıdaki şekillerde istenen kenarın kaç birim veya santimetre olduğunu bulunuz.



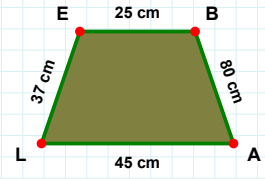
|DA| kaç brdir?

- ☐ 84 br  
☐ 82 br  
☐ 87 br



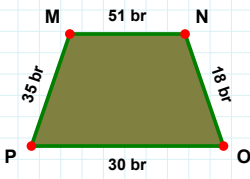
|EB| kaç cmdir?

- ☐ 30 cm  
☐ 25 cm  
☐ 24 cm



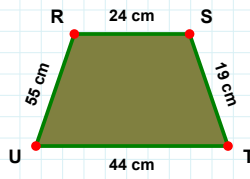
|EL| kaç brdir?

- ☐ 67 br  
☐ 70 br  
☐ 66 br



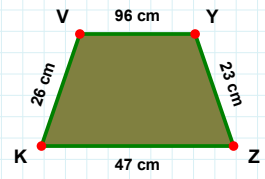
|TU| kaç cmdir?

- ☐ 49 cm  
☐ 44 cm  
☐ 42 cm



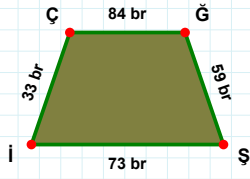
|VY| kaç cmdir?

- ☐ 96 cm  
☐ 95 cm  
☐ 97 cm



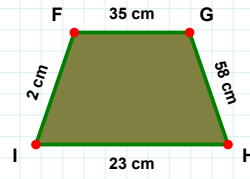
|PM| kaç brdir?

- ☐ 35 br  
☐ 34 br  
☐ 25 br



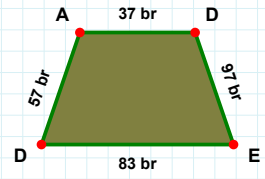
|GH| kaç cmdir?

- ☐ 61 cm  
☐ 58 cm  
☐ 57 cm



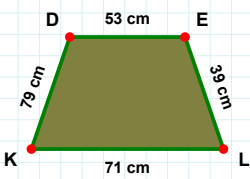
|DA| kaç brdir?

- ☐ 57 br  
☐ 60 br  
☐ 59 br



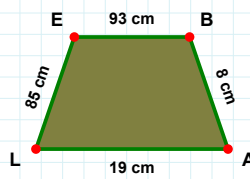
|Şİ| kaç brdir?

- ☐ 78 br  
☐ 73 br  
☐ 74 br



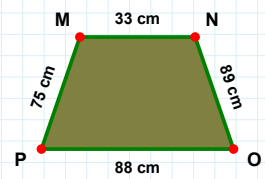
|AL| kaç cmdir?

- ☐ 21 cm  
☐ 19 cm  
☐ 18 cm



|DE| kaç cmdir?

- ☐ 54 cm  
☐ 53 cm  
☐ 63 cm



|PM| kaç cmdir?

- ☐ 75 cm  
☐ 76 cm  
☐ 65 cm

### SÜREÇ ODAKLI DEĞERLENDİRME ÖLÇEĞİ

Doğru Sayısı: ..... / 24

Öğretmen ilgili kutucuğu işaretler.

Geliştirilmeli (0-8)

İyi (9-14)

Çok İyi (15-20)

Mükemmel (21-24)

☐
☐
☐
☐

Hazırlayan: .....

Bu bölüme sınıfınızın ilgili kazanıma yönelik genel durumuna ilişkin gözlem ve izlenimlerinizi, öğrencilerinizin bu kazanımla ilgili öğrenme eksikliklerini ve bu eksikliklerin giderilmesi amacıyla yaptığınız/yapmayı planladığınız faaliyetleri not edebilirsiniz.

No	Adı - Soyadı	Toplam Puan	Değerlendirme
1			
2			
3			
4			
5			
6			
7			
8			
9			
10			
11			
12			
13			
14			
15			
16			
17			
18			
19			
20			
21			
22			
23			
24			
25			
26			
27			
28			
29			
30			
31			
32			
33			
34			
35			

Hazırlayan: .....