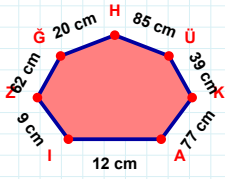
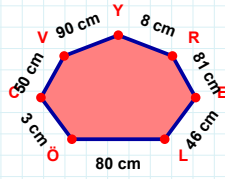


SORU: Aşağıdaki geometrik şekillerle ilgili soruları cevaplayınız.

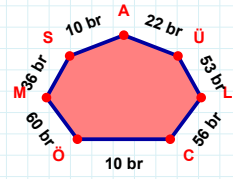


77 cm hangi kenara aittir?

Kenar:

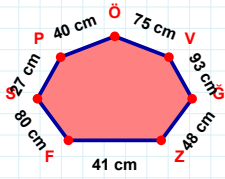
 $|ER| + |CÖ| = \dots$

Cevap: cm



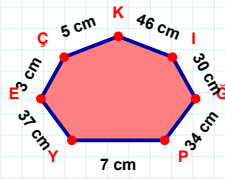
22 br hangi kenara aittir?

- ☐ ÜÖ kenarı
☐ ÜA kenarı
☐ ÖC kenarı



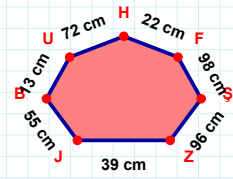
27 cm hangi kenara aittir?

Kenar:

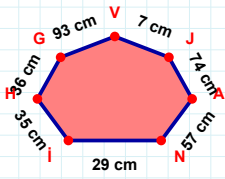


7 cm hangi kenara aittir?

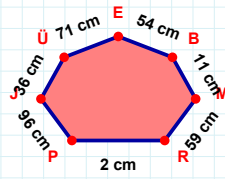
Kenar:

 $|FH|$ kaç cm'dir?

- ☐ 21 cm
☐ 22 cm
☐ 23 cm

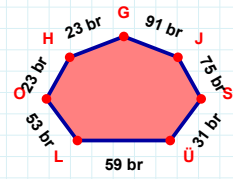
 $|IN|$ kaç cm'dir?

- ☐ 28 cm
☐ 29 cm
☐ 30 cm



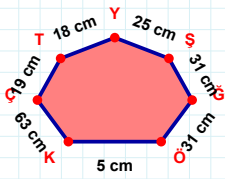
36 cm hangi kenara aittir?

Kenar:



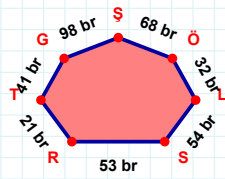
53 br hangi kenara aittir?

Kenar:

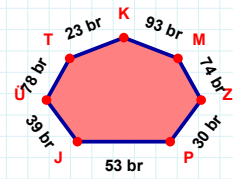


25 cm hangi kenara aittir?

- ☐ GŞ kenarı
☐ GT kenarı
☐ ŞY kenarı

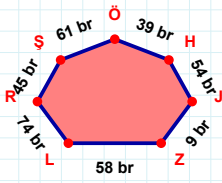
 $|GT| + |ÖŞ| = \dots$

Cevap: br

 $|JP|$ kaç br'dir?

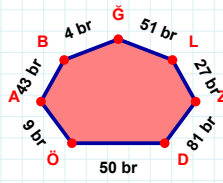
- ☐ 52 br
☐ 53 br
☐ 54 br

SORU: Aşağıdaki geometrik şekillerle ilgili soruları cevaplayınız.



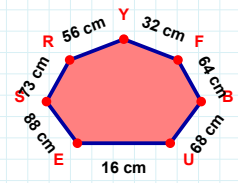
|HÖ| kaç brdir?

- ☐ 38 br
☐ 39 br
☐ 40 br



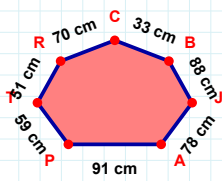
|ÖD| kaç brdir?

- ☐ 49 br
☐ 50 br
☐ 51 br



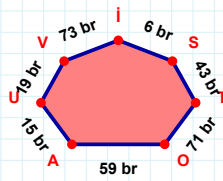
32 cm hangi kenara aittir?

- ☐ RU kenarı
☐ FY kenarı
☐ BF kenarı



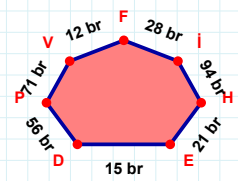
33 cm hangi kenara aittir?

- ☐ CR kenarı
☐ PC kenarı
☐ PA kenarı



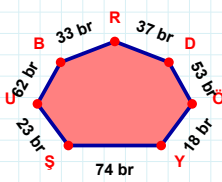
6 br hangi kenara aittir?

- ☐ VU kenarı
☐ İU kenarı
☐ İV kenarı



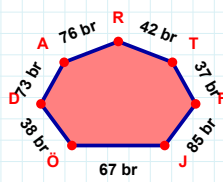
15 br hangi kenara aittir?

Kenar:



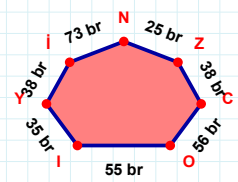
|ÖD| + |YÖ| =

Cevap: br



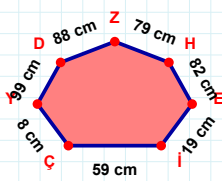
76 br hangi kenara aittir?

Kenar:



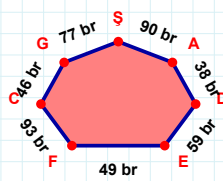
25 br hangi kenara aittir?

Kenar:



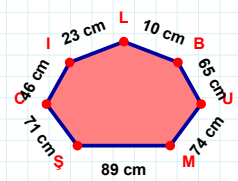
79 cm hangi kenara aittir?

- ☐ EH kenarı
☐ HZ kenarı
☐ İD kenarı



90 br hangi kenara aittir?

- ☐ CA kenarı
☐ AŞ kenarı
☐ DA kenarı



|İC| kaç cmdir?

- ☐ 45 cm
☐ 46 cm
☐ 47 cm

SÜREÇ ODAKLI DEĞERLENDİRME ÖLÇEĞİ

Doğru Sayısı: / 24

Öğretmen ilgili kutucuğu işaretler.

Geliştirilmeli (0-8)

İyi (9-14)

Çok İyi (15-20)

Mükemmel (21-24)

☐
☐
☐
☐

Hazırlayan:

Bu bölüme sınıfınızın ilgili kazanıma yönelik genel durumuna ilişkin gözlem ve izlenimlerinizi, öğrencilerinizin bu kazanımla ilgili öğrenme eksikliklerini ve bu eksikliklerin giderilmesi amacıyla yaptığınız/yapmayı planladığınız faaliyetleri not edebilirsiniz.

No	Adı - Soyadı	Toplam Puan	Değerlendirme
1			
2			
3			
4			
5			
6			
7			
8			
9			
10			
11			
12			
13			
14			
15			
16			
17			
18			
19			
20			
21			
22			
23			
24			
25			
26			
27			
28			
29			
30			
31			
32			
33			
34			
35			

Hazırlayan: