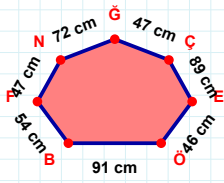
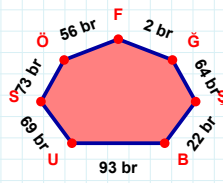


SORU: Aşağıdaki geometrik şekillerle ilgili soruları cevaplayınız.

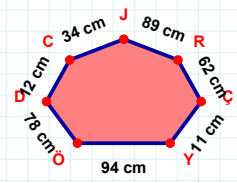


46 cm hangi kenara aittir?

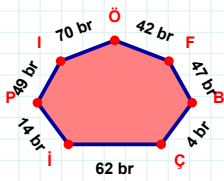
Kenar:

 $|GF| + |ÖS| = \dots$

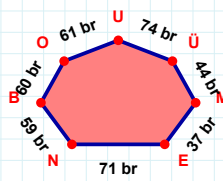
Cevap: br

 $|ÇR|$ kaç cm'dir?

- ☐ 61 cm
☐ 62 cm
☐ 63 cm

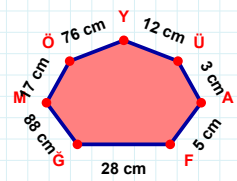
 $|IP| + |İÇ| = \dots$

Cevap: br



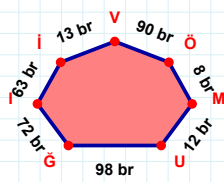
44 br hangi kenara aittir?

Kenar:

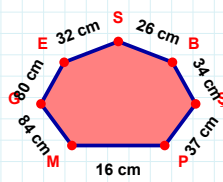


28 cm hangi kenara aittir?

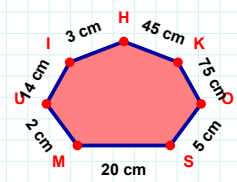
Kenar:

 $|ÖV|$ kaç br'dir?

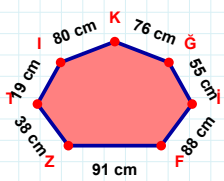
- ☐ 89 br
☐ 90 br
☐ 91 br

 $|ŞB|$ kaç cm'dir?

- ☐ 33 cm
☐ 34 cm
☐ 35 cm

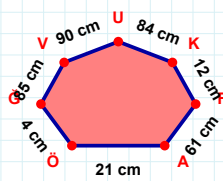
 $|IU| + |HI| = \dots$

Cevap: cm

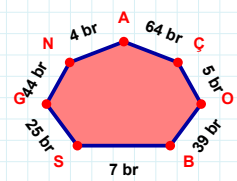


76 cm hangi kenara aittir?

- ☐ FT kenarı
☐ IT kenarı
☐ GK kenarı

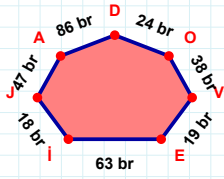
 $|KU| + |ÖA| = \dots$

Cevap: cm

 $|GS| + |AN| = \dots$

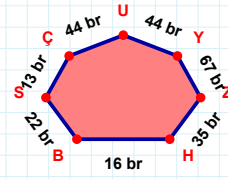
Cevap: br

SORU: Aşağıdaki geometrik şekillerle ilgili soruları cevaplayınız.



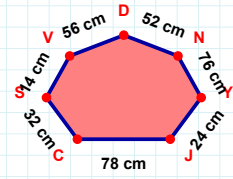
24 br hangi kenara aittir?

- ☐ İA kenarı
☐ AJ kenarı
☐ DA kenarı



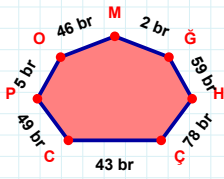
|SB| kaç brdir?

- ☐ 21 br
☐ 22 br
☐ 23 br



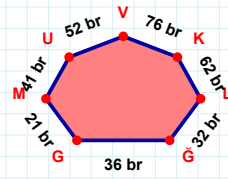
|JY| kaç cmdir?

- ☐ 23 cm
☐ 24 cm
☐ 25 cm



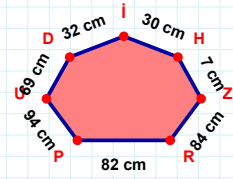
2 br hangi kenara aittir?

Kenar:



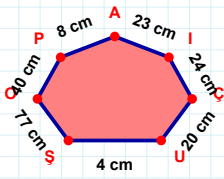
|LK| + |MG| =

Cevap: br



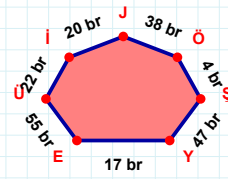
30 cm hangi kenara aittir?

- ☐ İR kenarı
☐ ZH kenarı
☐ RZ kenarı



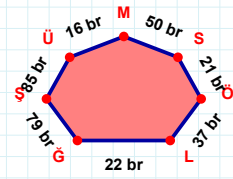
24 cm hangi kenara aittir?

Kenar:



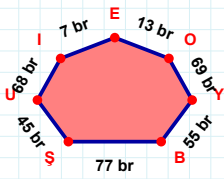
|EY| + |ŞÖ| =

Cevap: br



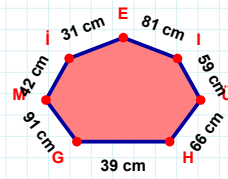
|LÖ| + |ÜŞ| =

Cevap: br



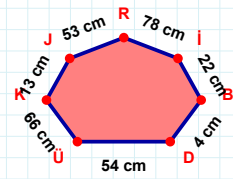
13 br hangi kenara aittir?

- ☐ IO kenarı
☐ IU kenarı
☐ EI kenarı



81 cm hangi kenara aittir?

- ☐ MG kenarı
☐ EG kenarı
☐ IE kenarı



78 cm hangi kenara aittir?

- ☐ KÜ kenarı
☐ RJ kenarı
☐ JÜ kenarı

SÜREÇ ODAKLI DEĞERLENDİRME ÖLÇEĞİ

Doğru Sayısı: / 24

Öğretmen ilgili kutucuğu işaretler.

Geliştirilmeli (0-8)

İyi (9-14)

Çok İyi (15-20)

Mükemmel (21-24)

☐
☐
☐
☐

Hazırlayan:

Bu bölüme sınıfınızın ilgili kazanıma yönelik genel durumuna ilişkin gözlem ve izlenimlerinizi, öğrencilerinizin bu kazanımla ilgili öğrenme eksikliklerini ve bu eksikliklerin giderilmesi amacıyla yaptığınız/yapmayı planladığınız faaliyetleri not edebilirsiniz.

| No | Adı - Soyadı | Toplam Puan | Değerlendirme |
|----|--------------|-------------|---------------|
| 1 | | | |
| 2 | | | |
| 3 | | | |
| 4 | | | |
| 5 | | | |
| 6 | | | |
| 7 | | | |
| 8 | | | |
| 9 | | | |
| 10 | | | |
| 11 | | | |
| 12 | | | |
| 13 | | | |
| 14 | | | |
| 15 | | | |
| 16 | | | |
| 17 | | | |
| 18 | | | |
| 19 | | | |
| 20 | | | |
| 21 | | | |
| 22 | | | |
| 23 | | | |
| 24 | | | |
| 25 | | | |
| 26 | | | |
| 27 | | | |
| 28 | | | |
| 29 | | | |
| 30 | | | |
| 31 | | | |
| 32 | | | |
| 33 | | | |
| 34 | | | |
| 35 | | | |

Hazırlayan: