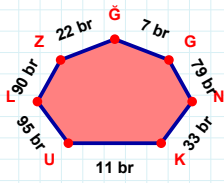
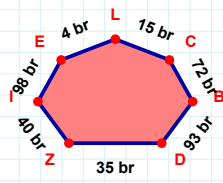


SORU: Aşağıdaki geometrik şekillerle ilgili soruları cevaplayınız.



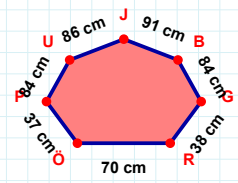
7 br hangi kenara aittir?

Kenar: .....

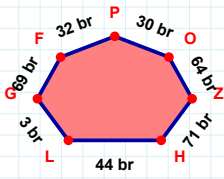


15 br hangi kenara aittir?

- ☐ CL kenarı  
☐ ZD kenarı  
☐ LI kenarı

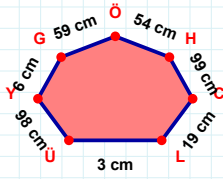
 $|JU| + |UP| = \dots$ 

Cevap: ..... cm



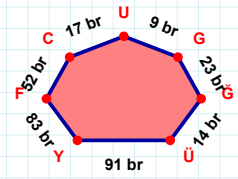
30 br hangi kenara aittir?

- ☐ FG kenarı  
☐ LH kenarı  
☐ LZ kenarı

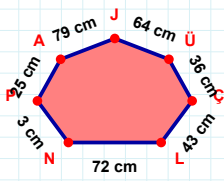


54 cm hangi kenara aittir?

- ☐ ÖG kenarı  
☐ HG kenarı  
☐ LC kenarı

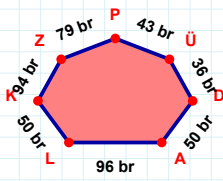
 $|YÜ| + |UC| = \dots$ 

Cevap: ..... br



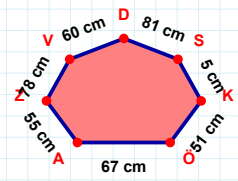
64 cm hangi kenara aittir?

Kenar: .....

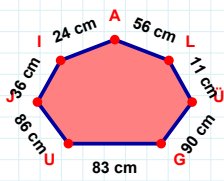


43 br hangi kenara aittir?

- ☐ DÜ kenarı  
☐ KL kenarı  
☐ DK kenarı

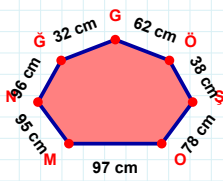
 $|KS| + |VZ| = \dots$ 

Cevap: ..... cm



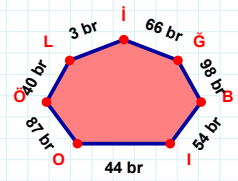
86 cm hangi kenara aittir?

Kenar: .....



62 cm hangi kenara aittir?

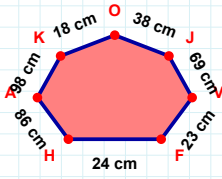
- ☐ Mİ kenarı  
☐ ŞÖ kenarı  
☐ OŞ kenarı



66 br hangi kenara aittir?

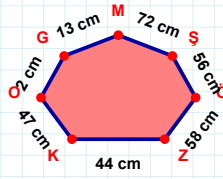
- ☐ İO kenarı  
☐ ÖB kenarı  
☐ IB kenarı

**SORU:** Aşağıdaki geometrik şekillerle ilgili soruları cevaplayınız.



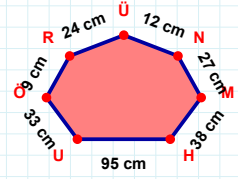
38 cm hangi kenara aittir?

- ☐ AH kenarı  
☐ JF kenarı  
☐ HF kenarı



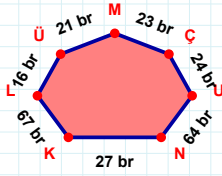
|GO| kaç cm'dir?

- ☐ 1 cm  
☐ 2 cm  
☐ 3 cm



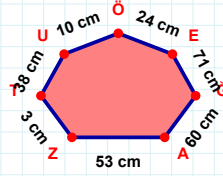
12 cm hangi kenara aittir?

Kenar: .....



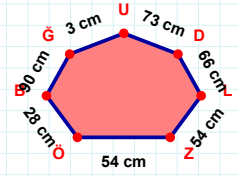
64 br hangi kenara aittir?

Kenar: .....



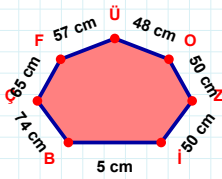
|TZ| + |ZA| = ....

Cevap: ..... cm



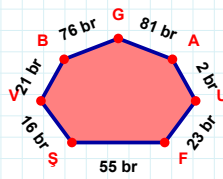
66 cm hangi kenara aittir?

Kenar: .....



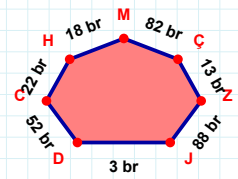
|LZ| kaç cm'dir?

- ☐ 49 cm  
☐ 50 cm  
☐ 51 cm



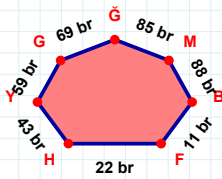
81 br hangi kenara aittir?

- ☐ ŞF kenarı  
☐ GŞ kenarı  
☐ VŞ kenarı



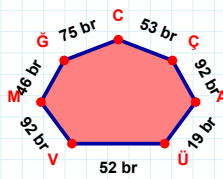
|ÇM| + |DJ| = ....

Cevap: ..... br



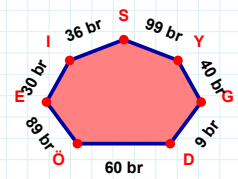
59 br hangi kenara aittir?

Kenar: .....



|MV| kaç br'dir?

- ☐ 91 br  
☐ 92 br  
☐ 93 br



|SI| + |DG| = ....

Cevap: ..... br

### SÜREÇ ODAKLI DEĞERLENDİRME ÖLÇEĞİ

Doğru Sayısı: ..... / 24

Öğretmen ilgili kutucuğu işaretler.

Geliştirilmeli (0-8)

İyi (9-14)

Çok İyi (15-20)

Mükemmel (21-24)

☐
☐
☐
☐

Hazırlayan: .....

Bu bölüme sınıfınızın ilgili kazanıma yönelik genel durumuna ilişkin gözlem ve izlenimlerinizi, öğrencilerinizin bu kazanımla ilgili öğrenme eksikliklerini ve bu eksikliklerin giderilmesi amacıyla yaptığınız/yapmayı planladığınız faaliyetleri not edebilirsiniz.

No	Adı - Soyadı	Toplam Puan	Değerlendirme
1			
2			
3			
4			
5			
6			
7			
8			
9			
10			
11			
12			
13			
14			
15			
16			
17			
18			
19			
20			
21			
22			
23			
24			
25			
26			
27			
28			
29			
30			
31			
32			
33			
34			
35			

Hazırlayan: .....