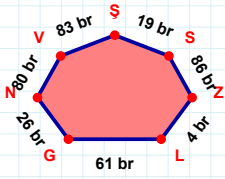
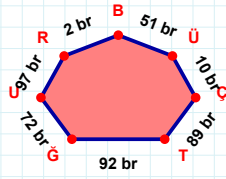


SORU: Aşağıdaki geometrik şekillerle ilgili soruları cevaplayınız.



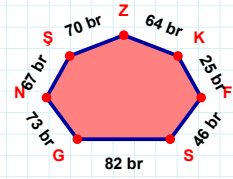
$$|VN| + |NG| = \dots$$

Cevap: br



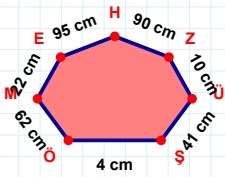
51 br hangi kenara aittir?

- ☐ BR kenarı
☐ GT kenarı
☐ TU kenarı



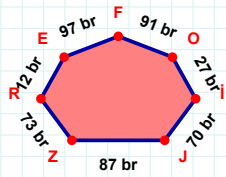
|FK| kaç brdir?

- ☐ 24 br
☐ 25 br
☐ 26 br



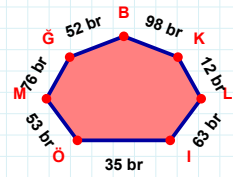
|EM| kaç cmdir?

- ☐ 21 cm
☐ 22 cm
☐ 23 cm



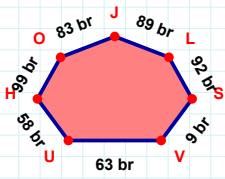
|RZ| kaç brdir?

- ☐ 72 br
☐ 73 br
☐ 74 br



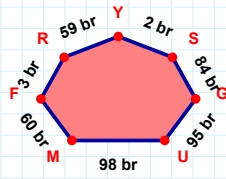
$$|LK| + |GM| = \dots$$

Cevap: br



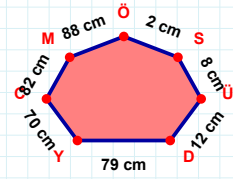
|OH| kaç brdir?

- ☐ 98 br
☐ 99 br
☐ 100 br



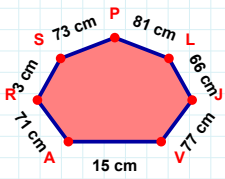
$$|RF| + |UG| = \dots$$

Cevap: br



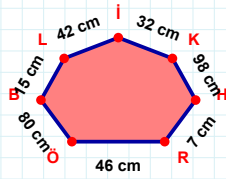
$$|CY| + |SÖ| = \dots$$

Cevap: cm



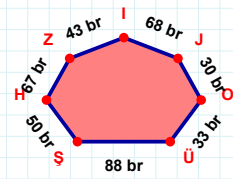
77 cm hangi kenara aittir?

Kenar:



$$|HK| + |LB| = \dots$$

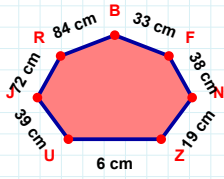
Cevap: cm



$$|OJ| + |ÜO| = \dots$$

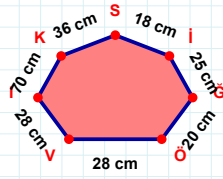
Cevap: br

SORU: Aşağıdaki geometrik şekillerle ilgili soruları cevaplayınız.



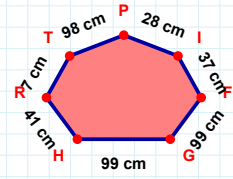
33 cm hangi kenara aittir?

- ☐ ZN kenarı
☐ BR kenarı
☐ UN kenarı



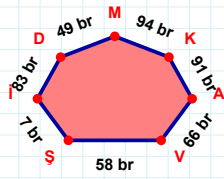
18 cm hangi kenara aittir?

- ☐ IV kenarı
☐ SK kenarı
☐ İĞ kenarı



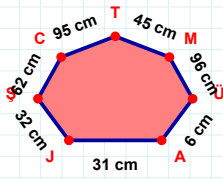
28 cm hangi kenara aittir?

- ☐ HG kenarı
☐ RH kenarı
☐ FR kenarı



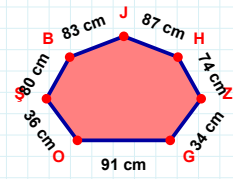
94 br hangi kenara aittir?

- ☐ MD kenarı
☐ MV kenarı
☐ ŞV kenarı



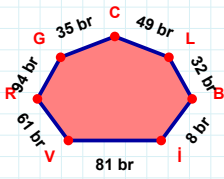
45 cm hangi kenara aittir?

Kenar:



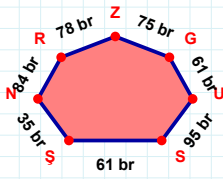
74 cm hangi kenara aittir?

Kenar:



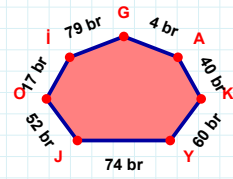
81 br hangi kenara aittir?

Kenar:



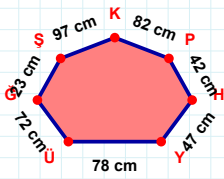
75 br hangi kenara aittir?

- ☐ NŞ kenarı
☐ UG kenarı
☐ GŞ kenarı



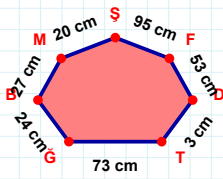
4 br hangi kenara aittir?

- ☐ İO kenarı
☐ OJ kenarı
☐ OK kenarı



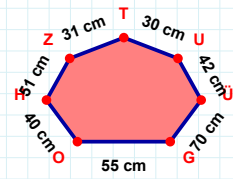
23 cm hangi kenara aittir?

Kenar:



95 cm hangi kenara aittir?

- ☐ FM kenarı
☐ FŞ kenarı
☐ BĞ kenarı



30 cm hangi kenara aittir?

- ☐ UH kenarı
☐ ÜU kenarı
☐ ZH kenarı

SÜREÇ ODAKLI DEĞERLENDİRME ÖLÇEĞİ

Doğru Sayısı: / 24

Öğretmen ilgili kutucuğu işaretler.

Geliştirilmeli (0-8)

İyi (9-14)

Çok İyi (15-20)

Mükemmel (21-24)

☐
☐
☐
☐

Hazırlayan:

Bu bölüme sınıfınızın ilgili kazanıma yönelik genel durumuna ilişkin gözlem ve izlenimlerinizi, öğrencilerinizin bu kazanımla ilgili öğrenme eksikliklerini ve bu eksikliklerin giderilmesi amacıyla yaptığınız/yapmayı planladığınız faaliyetleri not edebilirsiniz.

No	Adı - Soyadı	Toplam Puan	Değerlendirme
1			
2			
3			
4			
5			
6			
7			
8			
9			
10			
11			
12			
13			
14			
15			
16			
17			
18			
19			
20			
21			
22			
23			
24			
25			
26			
27			
28			
29			
30			
31			
32			
33			
34			
35			

Hazırlayan: