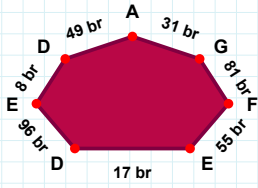
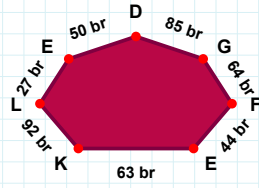


**SORU:** Aşağıdaki şekillerde istenen kenarın kaç birim veya santimetre olduğunu bulunuz.

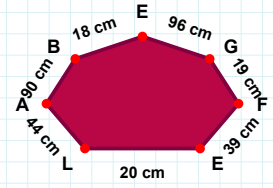
|FG| kaç brdir?

- ☐ 81 br  
☐ 71 br  
☐ 79 br



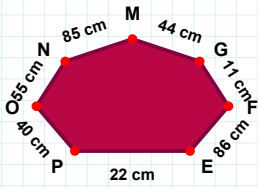
|LK| kaç brdir?

- ☐ 82 br  
☐ 92 br  
☐ 95 br



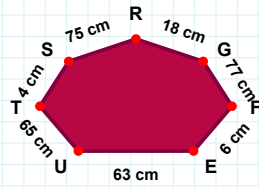
|LE| kaç cmdir?

- ☐ 20 cm  
☐ 10 cm  
☐ 15 cm



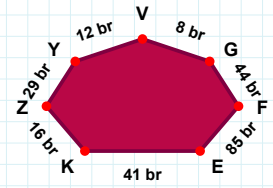
|TU| kaç cmdir?

- ☐ 64 cm  
☐ 62 cm  
☐ 65 cm



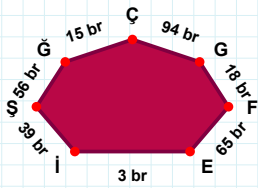
|FG| kaç cmdir?

- ☐ 11 cm  
☐ 13 cm  
☐ 8 cm



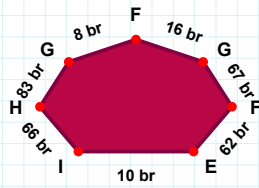
|VY| kaç brdir?

- ☐ 12 br  
☐ 17 br  
☐ 2 br



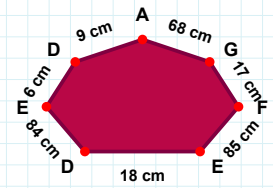
|GA| kaç cmdir?

- ☐ 68 cm  
☐ 66 cm  
☐ 58 cm



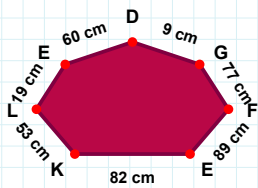
|GŞ| kaç brdir?

- ☐ 56 br  
☐ 61 br  
☐ 54 br



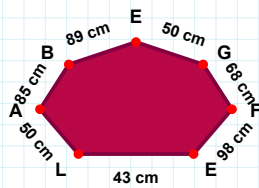
|HI| kaç brdir?

- ☐ 66 br  
☐ 71 br  
☐ 56 br



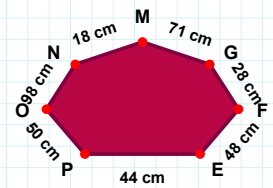
|EF| kaç cmdir?

- ☐ 88 cm  
☐ 98 cm  
☐ 96 cm



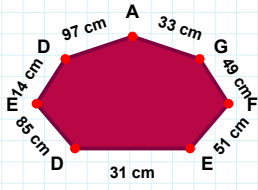
|PE| kaç cmdir?

- ☐ 44 cm  
☐ 42 cm  
☐ 34 cm

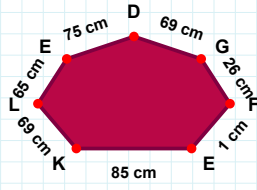


|KE| kaç cmdir?

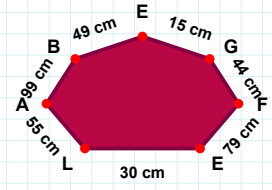
- ☐ 79 cm  
☐ 77 cm  
☐ 82 cm

**SORU: Aşağıdaki şekillerde istenen kenarın kaç birim veya santimetre olduğunu bulunuz.****|GA| kaç cmdir?**

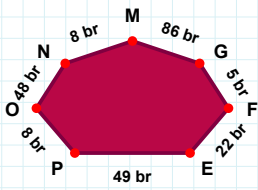
- ☐ 33 cm  
☐ 28 cm  
☐ 35 cm

**|LK| kaç cmdir?**

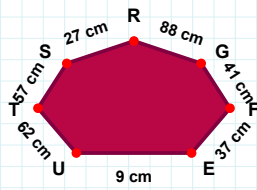
- ☐ 66 cm  
☐ 69 cm  
☐ 68 cm

**|FG| kaç cmdir?**

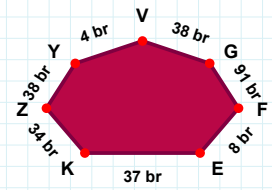
- ☐ 39 cm  
☐ 54 cm  
☐ 44 cm

**|EF| kaç brdir?**

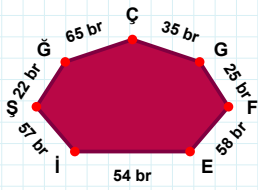
- ☐ 22 br  
☐ 20 br  
☐ 17 br

**|KE| kaç brdir?**

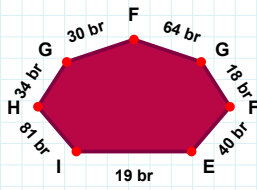
- ☐ 35 br  
☐ 40 br  
☐ 37 br

**|UE| kaç cmdir?**

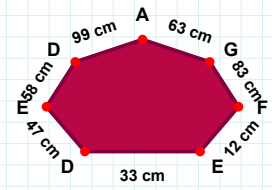
- ☐ 10 cm  
☐ 14 cm  
☐ 9 cm

**|GF| kaç brdir?**

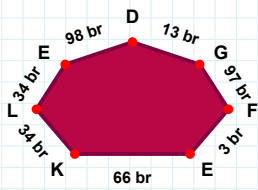
- ☐ 61 br  
☐ 59 br  
☐ 64 br

**|Şİ| kaç brdir?**

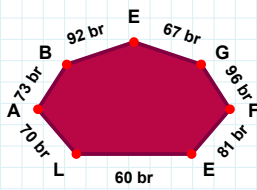
- ☐ 57 br  
☐ 59 br  
☐ 62 br

**|ED| kaç cmdir?**

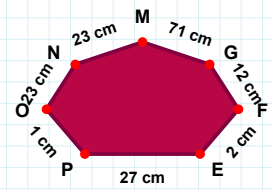
- ☐ 47 cm  
☐ 45 cm  
☐ 49 cm

**|FG| kaç brdir?**

- ☐ 99 br  
☐ 96 br  
☐ 97 br

**|KE| kaç brdir?**

- ☐ 66 br  
☐ 76 br  
☐ 65 br

**|GM| kaç cmdir?**

- ☐ 71 cm  
☐ 73 cm  
☐ 69 cm

## SÜREÇ ODAKLI DEĞERLENDİRME ÖLÇEĞİ

Doğru Sayısı: ..... / 24

Öğretmen ilgili kutucuğu işaretler.

Geliştirilmeli (0-8)

İyi (9-14)

Çok İyi (15-20)

Mükemmel (21-24)

☐☐☐☐

Hazırlayan: .....

Bu bölüme sınıfınızın ilgili kazanıma yönelik genel durumuna ilişkin gözlem ve izlenimlerinizi, öğrencilerinizin bu kazanımla ilgili öğrenme eksikliklerini ve bu eksikliklerin giderilmesi amacıyla yaptığınız/yapmayı planladığınız faaliyetleri not edebilirsiniz.

No	Adı - Soyadı	Toplam Puan	Değerlendirme
1			
2			
3			
4			
5			
6			
7			
8			
9			
10			
11			
12			
13			
14			
15			
16			
17			
18			
19			
20			
21			
22			
23			
24			
25			
26			
27			
28			
29			
30			
31			
32			
33			
34			
35			

Hazırlayan: .....